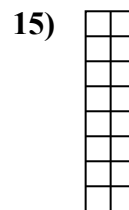

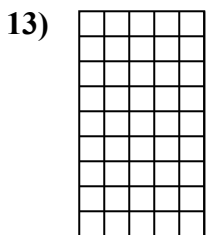
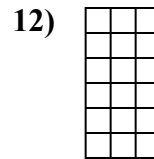
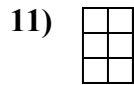
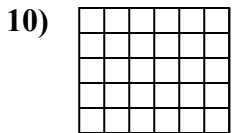


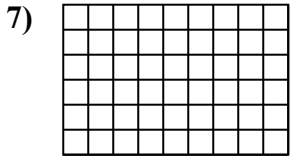

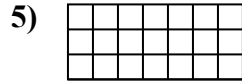
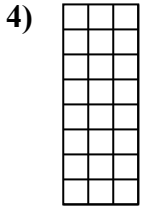
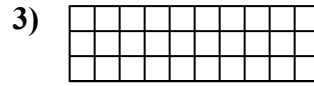
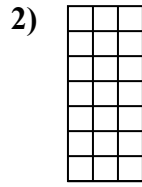





Определите площадь. Каждый блок= 1 единице (u²).



ОТВЕТЫ

1. _____

2. _____

3. _____

4. _____

5. _____

6. _____

7. _____

8. _____

9. _____

10. _____

11. _____

12. _____

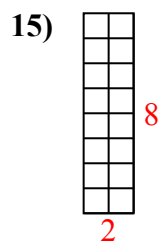
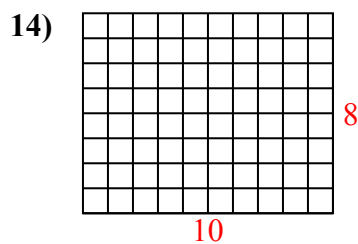
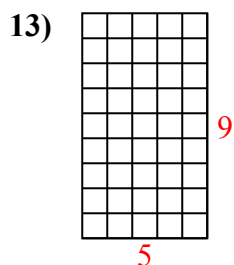
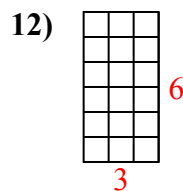
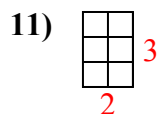
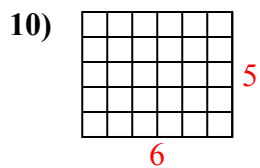
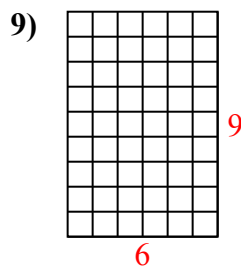
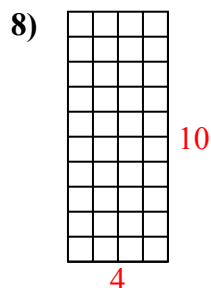
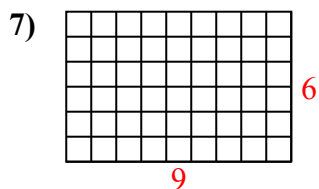
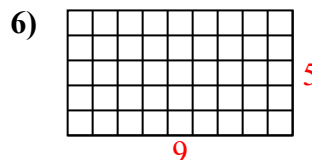
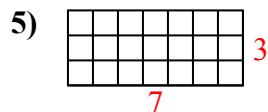
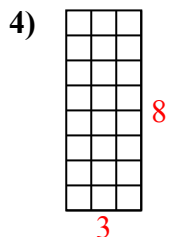
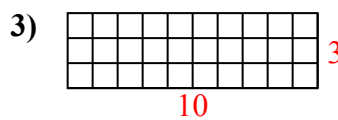
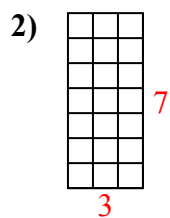
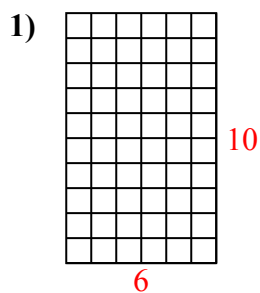
13. _____

14. _____

15. _____



Определите площадь. Каждый блок = 1 единице (u^2).



ОТВЕТЫ

1. 60 u^2

2. 21 u^2

3. 30 u^2

4. 24 u^2

5. 21 u^2

6. 45 u^2

7. 54 u^2

8. 40 u^2

9. 54 u^2

10. 30 u^2

11. 6 u^2

12. 18 u^2

13. 45 u^2

14. 80 u^2

15. 16 u^2