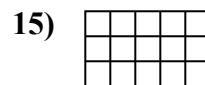
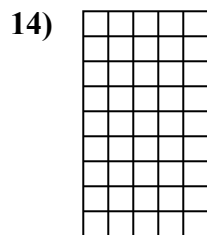
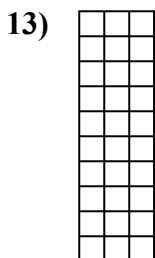
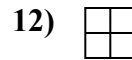
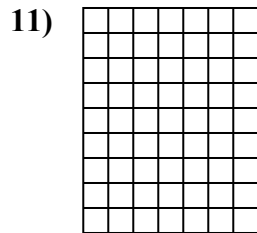
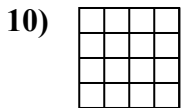
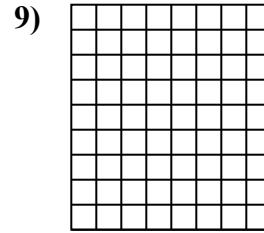

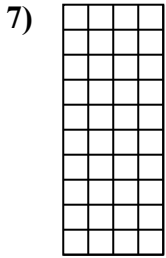

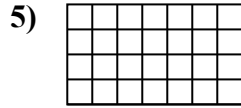
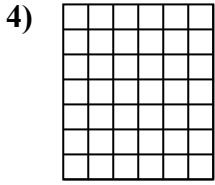
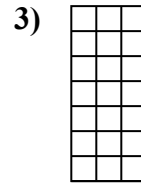
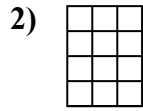
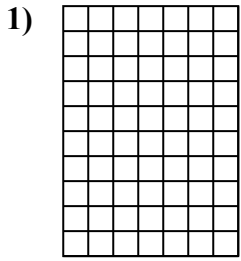




Определите площадь. Каждый блок= 1 единице (u²).

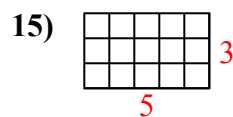
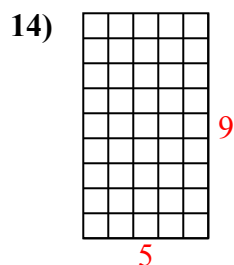
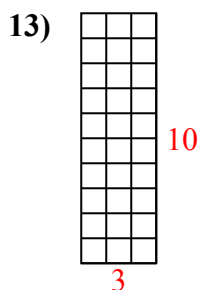
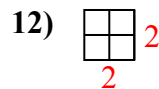
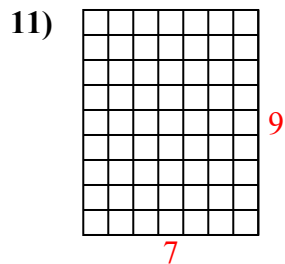
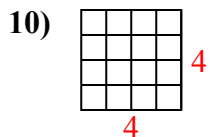
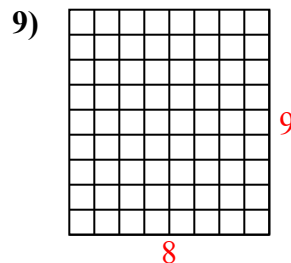
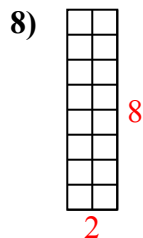
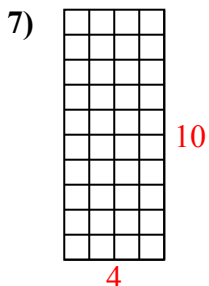
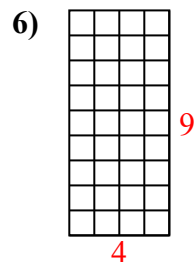
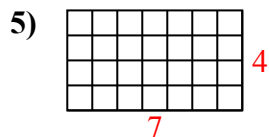
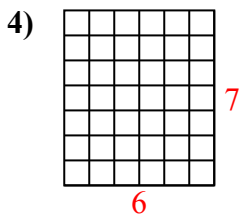
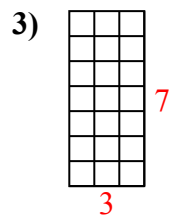
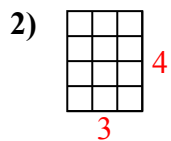
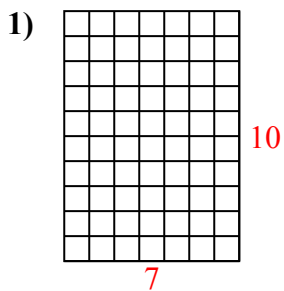


ОТВЕТЫ

1. _____
2. _____
3. _____
4. _____
5. _____
6. _____
7. _____
8. _____
9. _____
10. _____
11. _____
12. _____
13. _____
14. _____
15. _____



Определите площадь. Каждый блок= 1 единице (u^2).



ОТВЕТЫ

1. 70 u^2

2. 12 u^2

3. 21 u^2

4. 42 u^2

5. 28 u^2

6. 36 u^2

7. 40 u^2

8. 16 u^2

9. 72 u^2

10. 16 u^2

11. 63 u^2

12. 4 u^2

13. 30 u^2

14. 45 u^2

15. 15 u^2