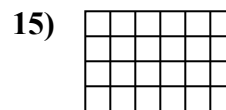
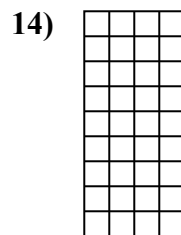
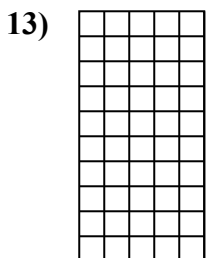
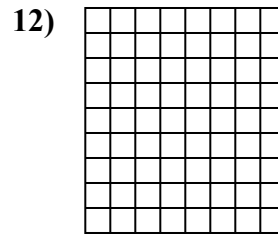
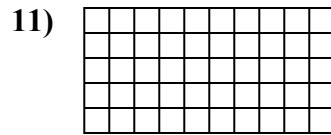
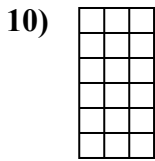
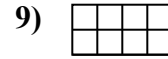


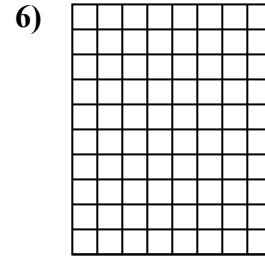
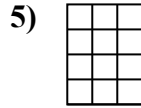
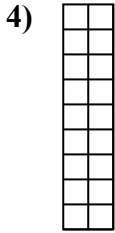
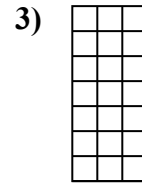
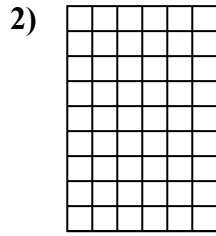
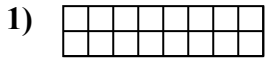




Определите площадь. Каждый блок= 1 единице (u<sup>2</sup>).

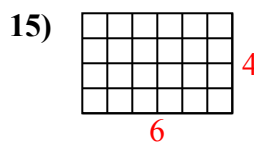
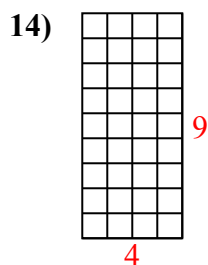
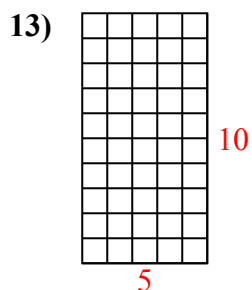
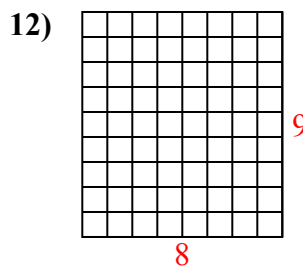
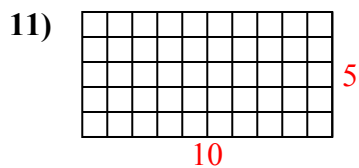
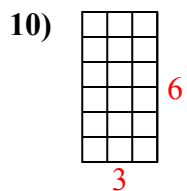
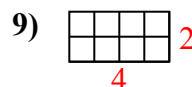
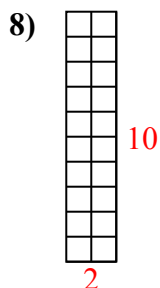
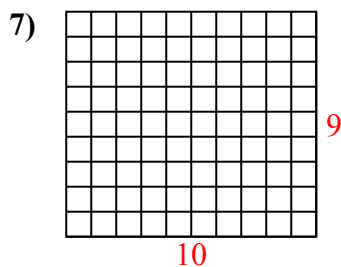
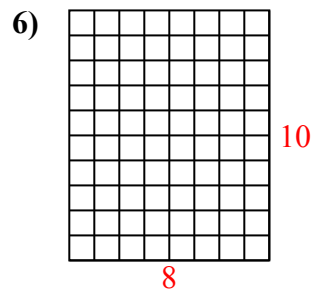
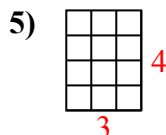
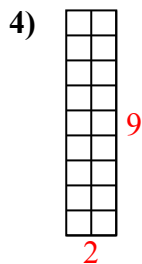
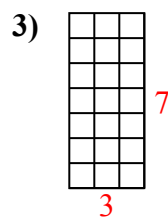
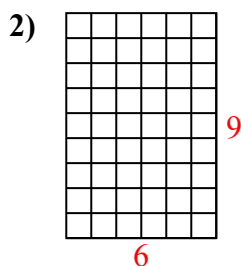
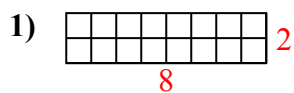


**ОТВЕТЫ**

- 1. \_\_\_\_\_
- 2. \_\_\_\_\_
- 3. \_\_\_\_\_
- 4. \_\_\_\_\_
- 5. \_\_\_\_\_
- 6. \_\_\_\_\_
- 7. \_\_\_\_\_
- 8. \_\_\_\_\_
- 9. \_\_\_\_\_
- 10. \_\_\_\_\_
- 11. \_\_\_\_\_
- 12. \_\_\_\_\_
- 13. \_\_\_\_\_
- 14. \_\_\_\_\_
- 15. \_\_\_\_\_



Определите площадь. Каждый блок = 1 единице ( $u^2$ ).



**ОТВЕТЫ**

1. 16  $u^2$

2. 54  $u^2$

3. 21  $u^2$

4. 18  $u^2$

5. 12  $u^2$

6. 80  $u^2$

7. 90  $u^2$

8. 20  $u^2$

9. 8  $u^2$

10. 18  $u^2$

11. 50  $u^2$

12. 72  $u^2$

13. 50  $u^2$

14. 36  $u^2$

15. 24  $u^2$