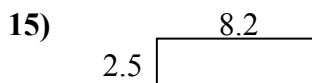
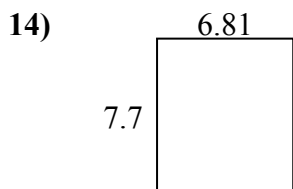
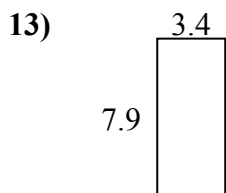
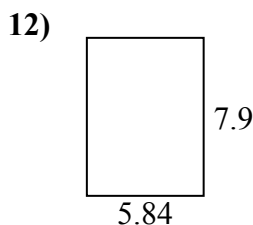
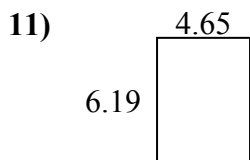
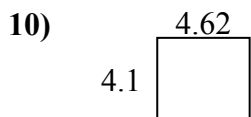
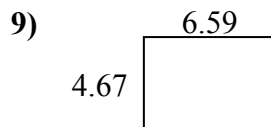
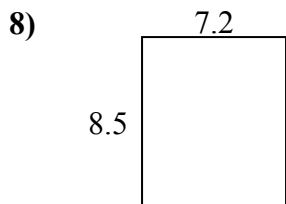
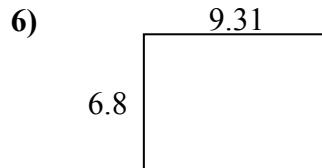
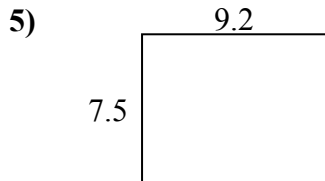
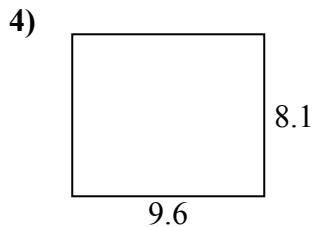
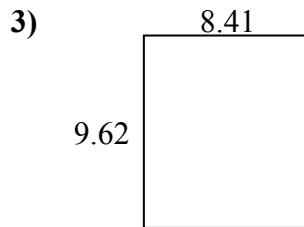
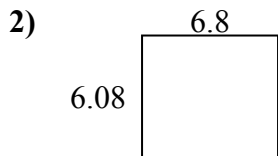
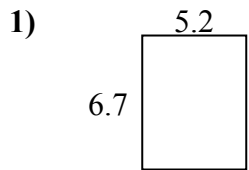




Найдите периметр и площадь каждой фигуры. Ответьте с точностью до 10-го числа.

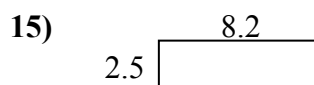
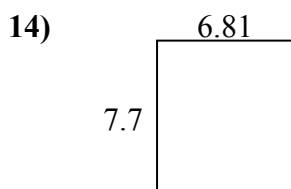
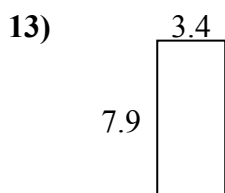
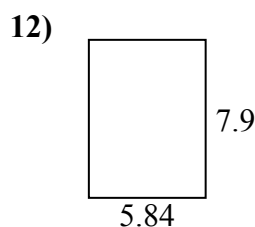
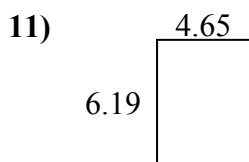
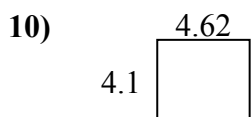
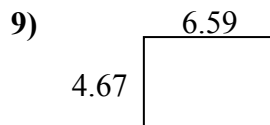
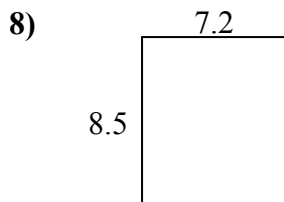
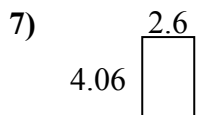
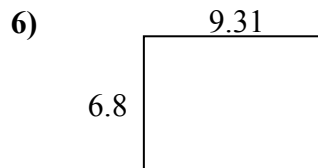
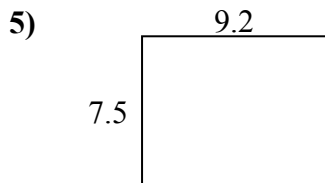
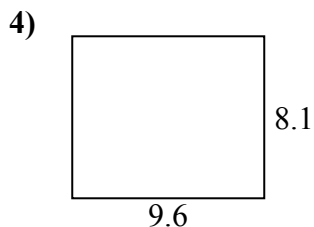
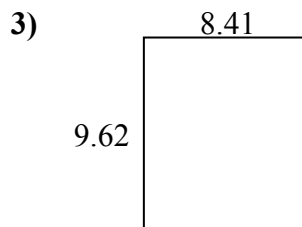
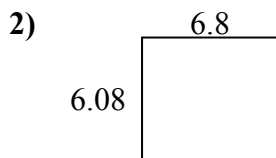
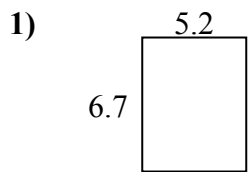


**ОТВЕТЫ**

1. \_\_\_\_\_
2. \_\_\_\_\_
3. \_\_\_\_\_
4. \_\_\_\_\_
5. \_\_\_\_\_
6. \_\_\_\_\_
7. \_\_\_\_\_
8. \_\_\_\_\_
9. \_\_\_\_\_
10. \_\_\_\_\_
11. \_\_\_\_\_
12. \_\_\_\_\_
13. \_\_\_\_\_
14. \_\_\_\_\_
15. \_\_\_\_\_



Найдите периметр и площадь каждой фигуры. Ответьте с точностью до 10-го числа.



**ОТВЕТЫ**

1.	<u>34,8</u>	<u>23,8</u>
2.	<u>41,3</u>	<u>25,8</u>
3.	<u>80,9</u>	<u>36,1</u>
4.	<u>77,8</u>	<u>35,4</u>
5.	<u>69,0</u>	<u>33,4</u>
6.	<u>63,3</u>	<u>32,2</u>
7.	<u>10,6</u>	<u>13,3</u>
8.	<u>61,2</u>	<u>31,4</u>
9.	<u>30,8</u>	<u>22,5</u>
10.	<u>18,9</u>	<u>17,4</u>
11.	<u>28,8</u>	<u>21,7</u>
12.	<u>46,1</u>	<u>27,5</u>
13.	<u>26,9</u>	<u>22,6</u>
14.	<u>52,4</u>	<u>29,0</u>
15.	<u>20,5</u>	<u>21,4</u>