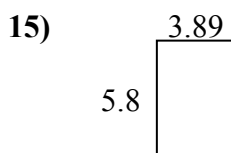
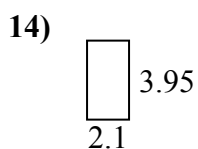
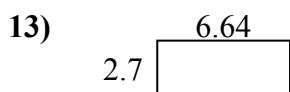
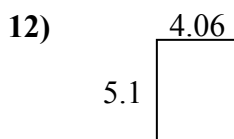
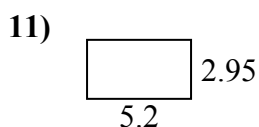
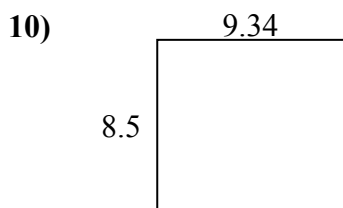
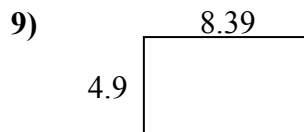
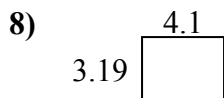
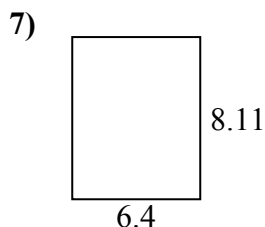
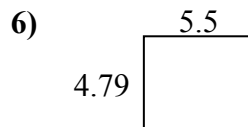
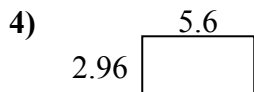
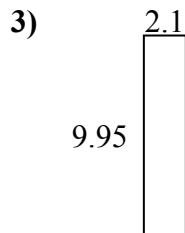
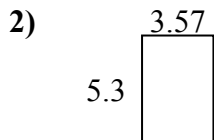
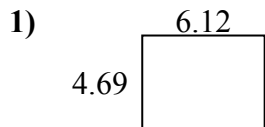




Найдите периметр и площадь каждой фигуры. Ответьте с точностью до 10-го числа.

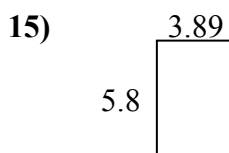
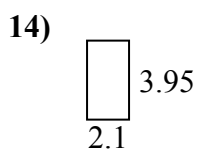
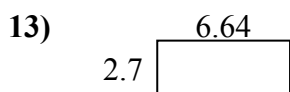
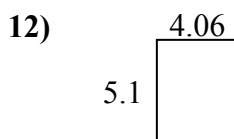
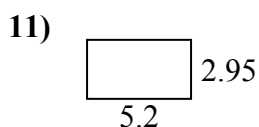
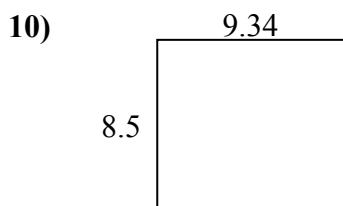
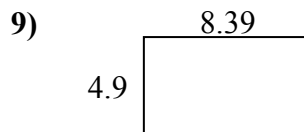
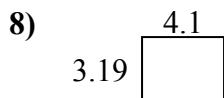
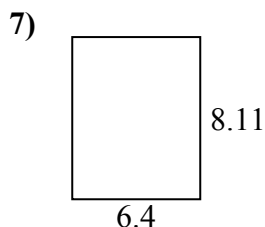
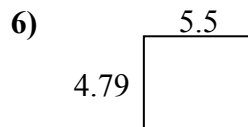
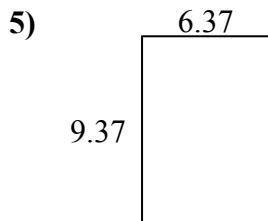
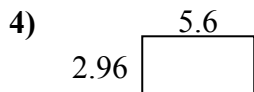
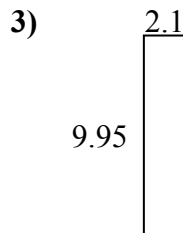
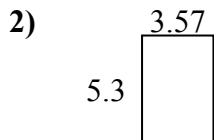
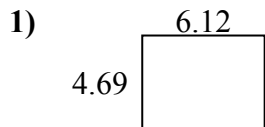


ОТВЕТЫ

1. _____
2. _____
3. _____
4. _____
5. _____
6. _____
7. _____
8. _____
9. _____
10. _____
11. _____
12. _____
13. _____
14. _____
15. _____



Найдите периметр и площадь каждой фигуры. Ответьте с точностью до 10-го числа.



ОТВЕТЫ

| | | |
|-----|-------------|-------------|
| 1. | <u>28,7</u> | <u>21,6</u> |
| 2. | <u>18,9</u> | <u>17,7</u> |
| 3. | <u>20,9</u> | <u>24,1</u> |
| 4. | <u>16,6</u> | <u>17,1</u> |
| 5. | <u>59,7</u> | <u>31,5</u> |
| 6. | <u>26,3</u> | <u>20,6</u> |
| 7. | <u>51,9</u> | <u>29,0</u> |
| 8. | <u>13,1</u> | <u>14,6</u> |
| 9. | <u>41,1</u> | <u>26,6</u> |
| 10. | <u>79,4</u> | <u>35,7</u> |
| 11. | <u>15,3</u> | <u>16,3</u> |
| 12. | <u>20,7</u> | <u>18,3</u> |
| 13. | <u>17,9</u> | <u>18,7</u> |
| 14. | <u>8,3</u> | <u>12,1</u> |
| 15. | <u>22,6</u> | <u>19,4</u> |