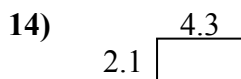
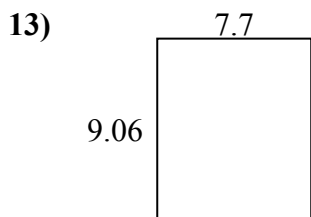
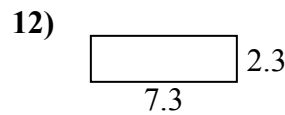
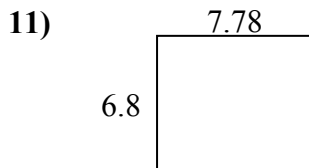
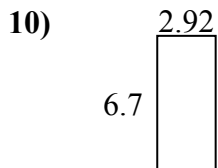
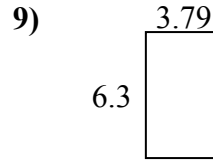
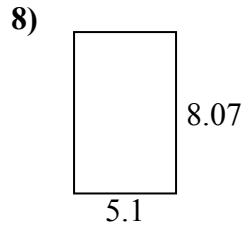
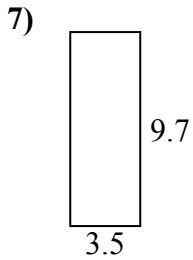
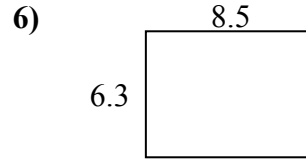
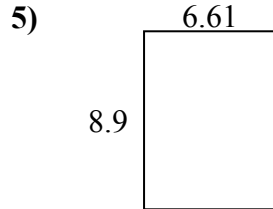
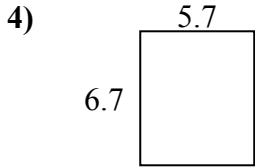
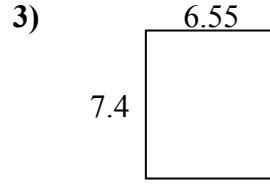
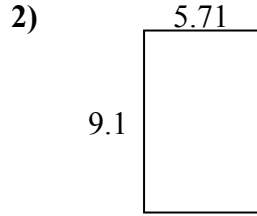
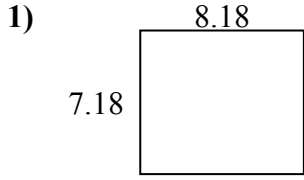




Найдите периметр и площадь каждой фигуры. Ответьте с точностью до 10-го числа.

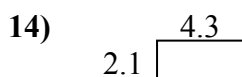
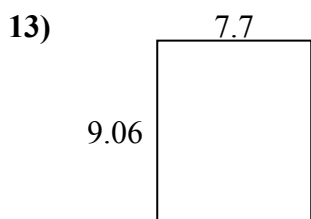
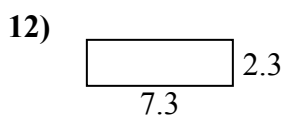
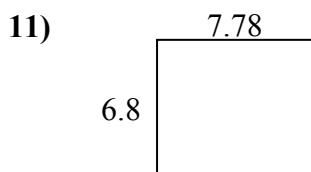
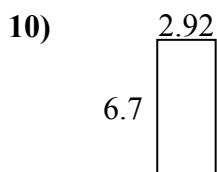
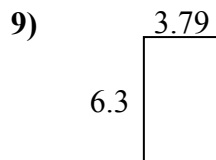
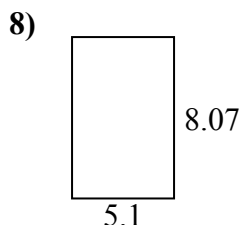
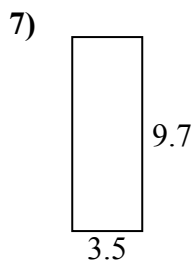
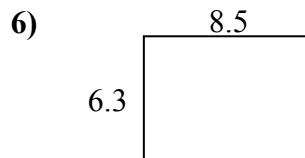
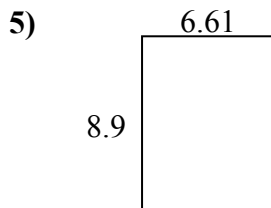
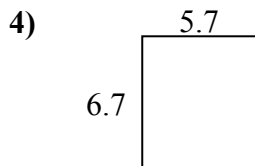
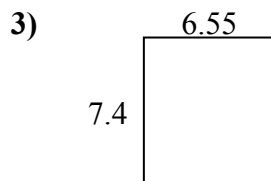
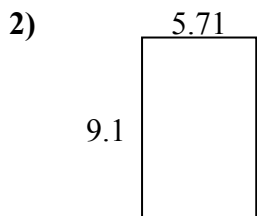
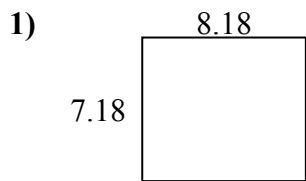


ОТВЕТЫ

1.	_____	_____
2.	_____	_____
3.	_____	_____
4.	_____	_____
5.	_____	_____
6.	_____	_____
7.	_____	_____
8.	_____	_____
9.	_____	_____
10.	_____	_____
11.	_____	_____
12.	_____	_____
13.	_____	_____
14.	_____	_____
15.	_____	_____



Найдите периметр и площадь каждой фигуры. Ответьте с точностью до 10-го числа.

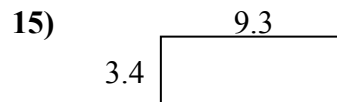
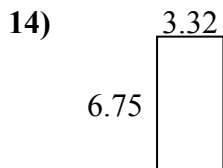
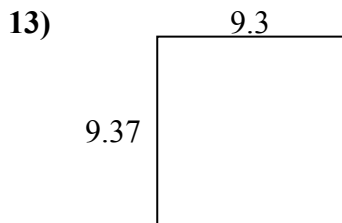
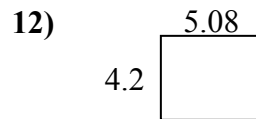
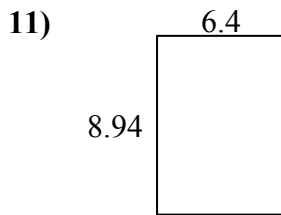
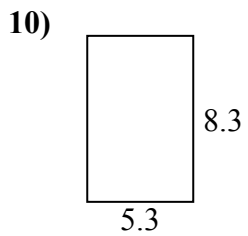
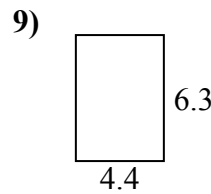
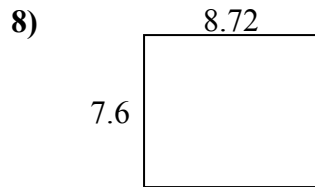
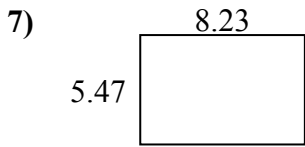
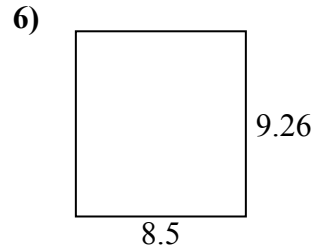
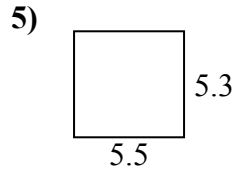
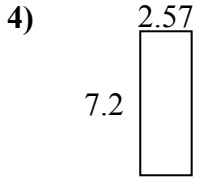
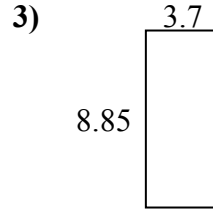
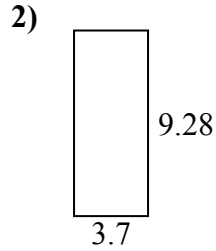
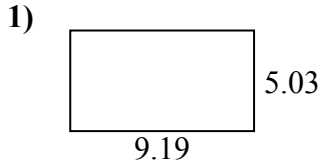


ОТВЕТЫ

1.	<u>58,7</u>	<u>30,7</u>
2.	<u>52,0</u>	<u>29,6</u>
3.	<u>48,5</u>	<u>27,9</u>
4.	<u>38,2</u>	<u>24,8</u>
5.	<u>58,8</u>	<u>31,0</u>
6.	<u>53,6</u>	<u>29,6</u>
7.	<u>34,0</u>	<u>26,4</u>
8.	<u>41,2</u>	<u>26,3</u>
9.	<u>23,9</u>	<u>20,2</u>
10.	<u>19,6</u>	<u>19,2</u>
11.	<u>52,9</u>	<u>29,2</u>
12.	<u>16,8</u>	<u>19,2</u>
13.	<u>69,8</u>	<u>33,5</u>
14.	<u>9,0</u>	<u>12,8</u>
15.	<u>9,7</u>	<u>12,8</u>



Найдите периметр и площадь каждой фигуры. Ответьте с точностью до 10-го числа.

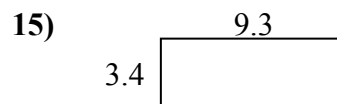
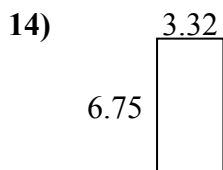
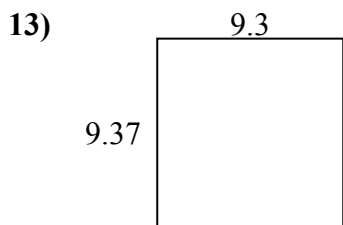
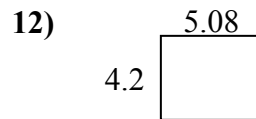
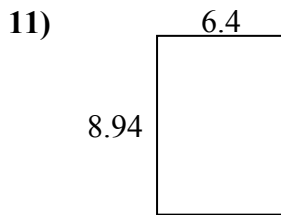
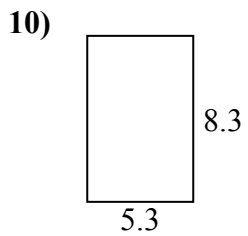
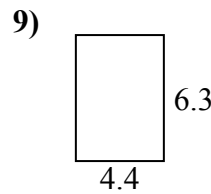
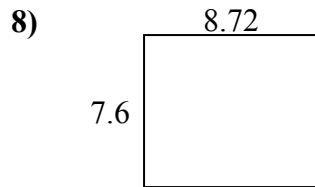
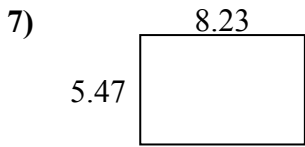
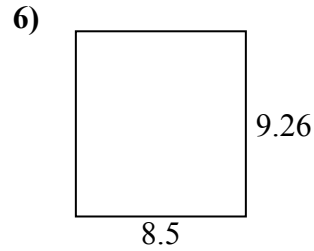
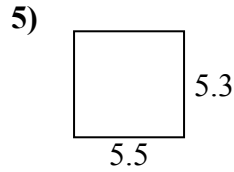
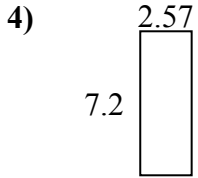
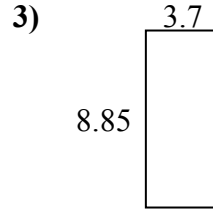
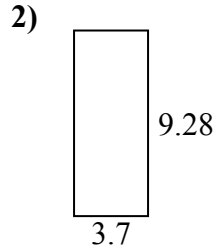
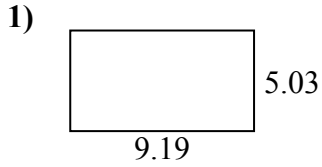


ОТВЕТЫ

1. _____
2. _____
3. _____
4. _____
5. _____
6. _____
7. _____
8. _____
9. _____
10. _____
11. _____
12. _____
13. _____
14. _____
15. _____



Найдите периметр и площадь каждой фигуры. Ответьте с точностью до 10-го числа.

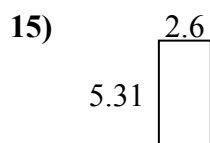
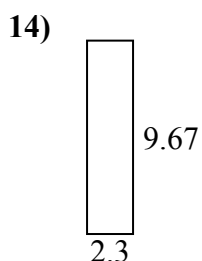
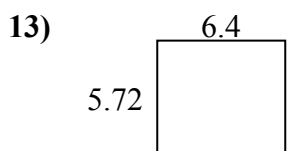
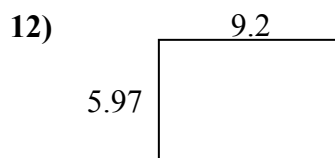
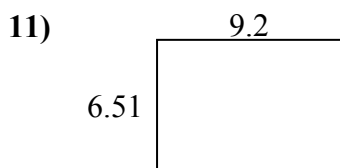
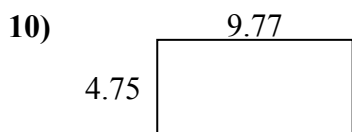
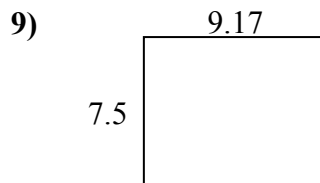
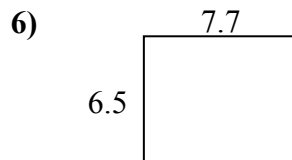
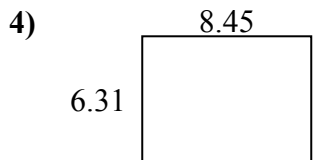
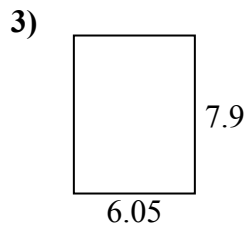
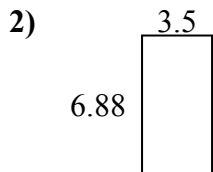
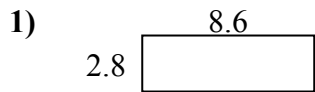


ОТВЕТЫ

1.	<u>46,2</u>	<u>28,4</u>
2.	<u>34,3</u>	<u>26,0</u>
3.	<u>32,7</u>	<u>25,1</u>
4.	<u>18,5</u>	<u>19,5</u>
5.	<u>29,2</u>	<u>21,6</u>
6.	<u>78,7</u>	<u>35,5</u>
7.	<u>45,0</u>	<u>27,4</u>
8.	<u>66,3</u>	<u>32,6</u>
9.	<u>27,7</u>	<u>21,4</u>
10.	<u>44,0</u>	<u>27,2</u>
11.	<u>57,2</u>	<u>30,7</u>
12.	<u>21,3</u>	<u>18,6</u>
13.	<u>87,1</u>	<u>37,3</u>
14.	<u>22,4</u>	<u>20,1</u>
15.	<u>31,6</u>	<u>25,4</u>



Найдите периметр и площадь каждой фигуры. Ответьте с точностью до 10-го числа.

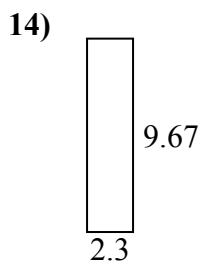
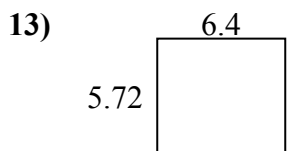
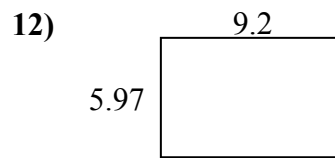
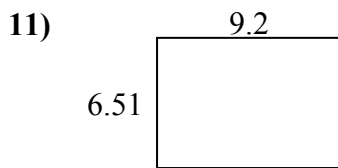
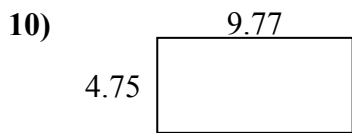
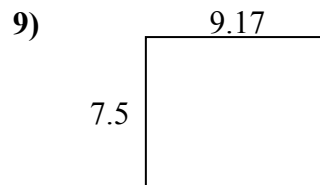
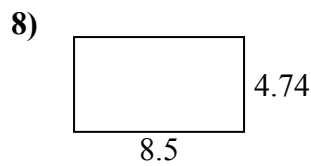
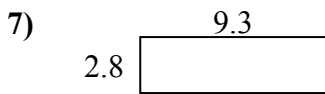
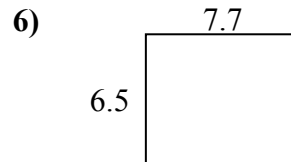

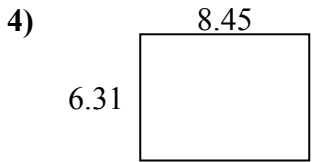
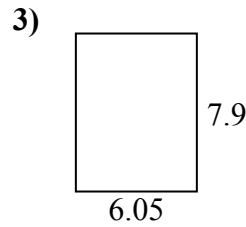
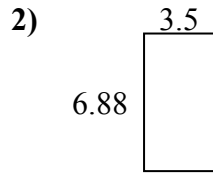
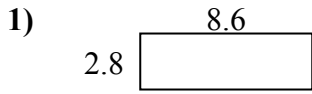


ОТВЕТЫ

1. _____
2. _____
3. _____
4. _____
5. _____
6. _____
7. _____
8. _____
9. _____
10. _____
11. _____
12. _____
13. _____
14. _____
15. _____



Найдите периметр и площадь каждой фигуры. Ответьте с точностью до 10-го числа.

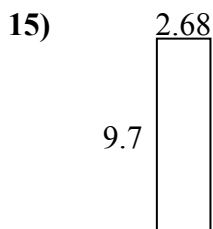
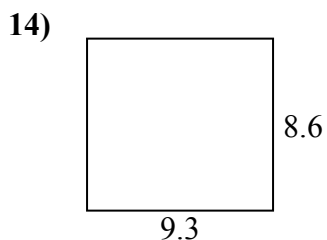
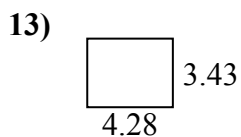
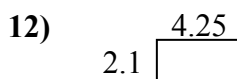
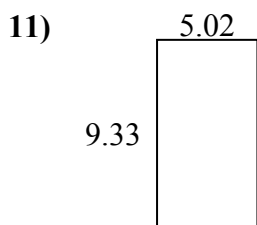
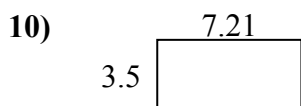
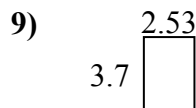
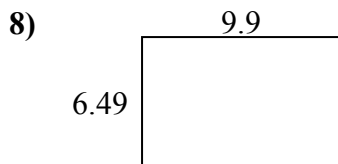
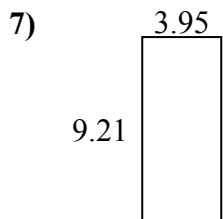
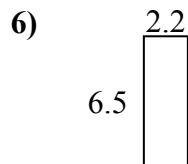
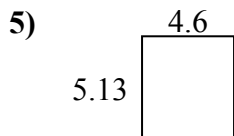
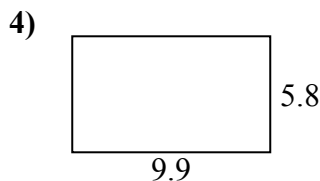
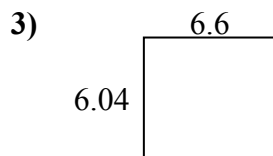
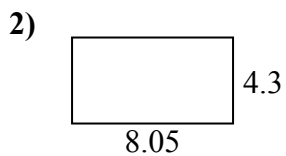
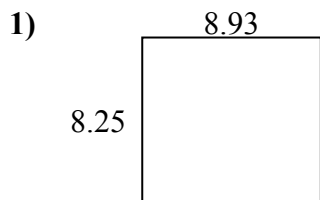


ОТВЕТЫ

1.	<u>24,1</u>	<u>22,8</u>
2.	<u>24,1</u>	<u>20,8</u>
3.	<u>47,8</u>	<u>27,9</u>
4.	<u>53,3</u>	<u>29,5</u>
5.	<u>18,0</u>	<u>19,8</u>
6.	<u>50,1</u>	<u>28,4</u>
7.	<u>26,0</u>	<u>24,2</u>
8.	<u>40,3</u>	<u>26,5</u>
9.	<u>68,8</u>	<u>33,3</u>
10.	<u>46,4</u>	<u>29,0</u>
11.	<u>59,9</u>	<u>31,4</u>
12.	<u>54,9</u>	<u>30,3</u>
13.	<u>36,6</u>	<u>24,2</u>
14.	<u>22,2</u>	<u>23,9</u>
15.	<u>13,8</u>	<u>15,8</u>



Найдите периметр и площадь каждой фигуры. Ответьте с точностью до 10-го числа.

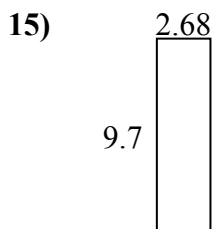
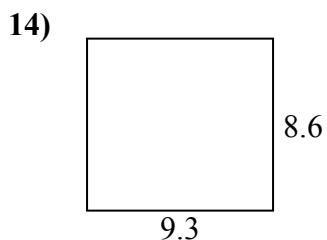
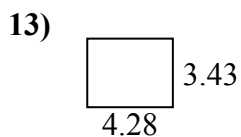
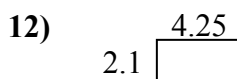
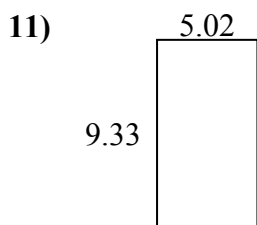
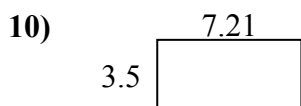
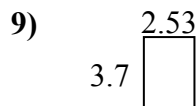
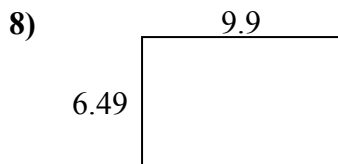
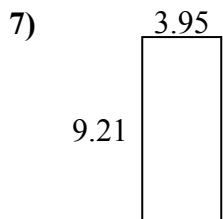
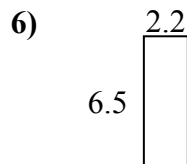
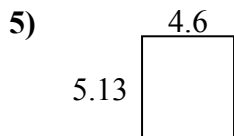
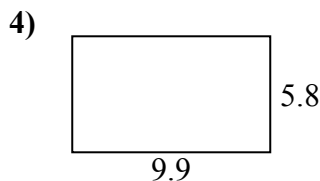
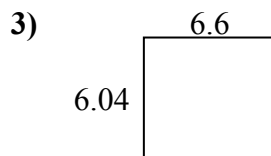
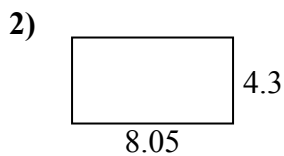
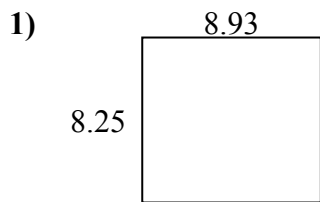


ОТВЕТЫ

1. _____
2. _____
3. _____
4. _____
5. _____
6. _____
7. _____
8. _____
9. _____
10. _____
11. _____
12. _____
13. _____
14. _____
15. _____



Найдите периметр и площадь каждой фигуры. Ответьте с точностью до 10-го числа.

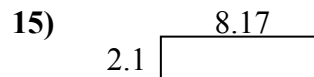

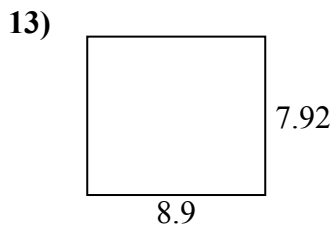
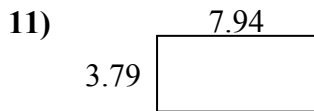
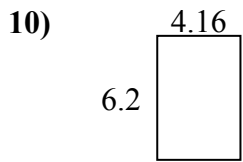
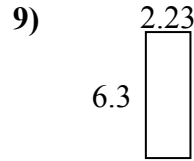
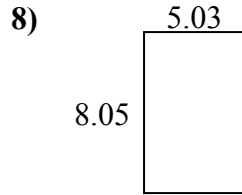
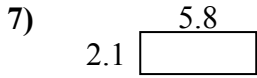
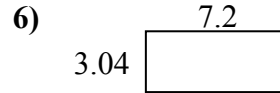
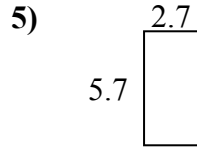
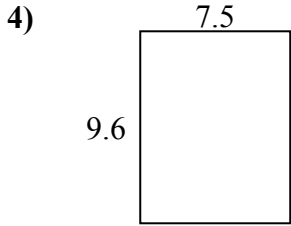
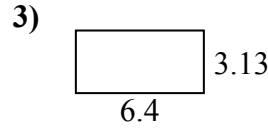
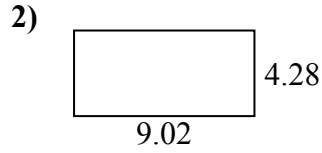



ОТВЕТЫ

1.	<u>73,7</u>	<u>34,4</u>
2.	<u>34,6</u>	<u>24,7</u>
3.	<u>39,9</u>	<u>25,3</u>
4.	<u>57,4</u>	<u>31,4</u>
5.	<u>23,6</u>	<u>19,5</u>
6.	<u>14,3</u>	<u>17,4</u>
7.	<u>36,4</u>	<u>26,3</u>
8.	<u>64,3</u>	<u>32,8</u>
9.	<u>9,4</u>	<u>12,5</u>
10.	<u>25,2</u>	<u>21,4</u>
11.	<u>46,8</u>	<u>28,7</u>
12.	<u>8,9</u>	<u>12,7</u>
13.	<u>14,7</u>	<u>15,4</u>
14.	<u>80,0</u>	<u>35,8</u>
15.	<u>26,0</u>	<u>24,8</u>



Найдите периметр и площадь каждой фигуры. Ответьте с точностью до 10-го числа.

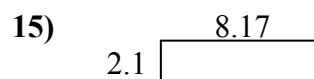
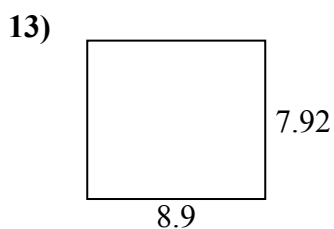
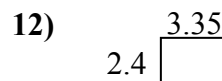
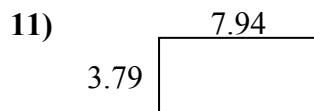
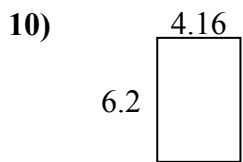
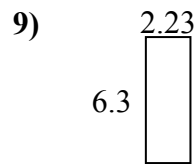
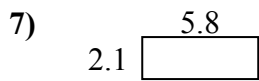
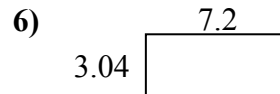
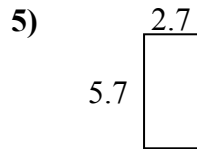
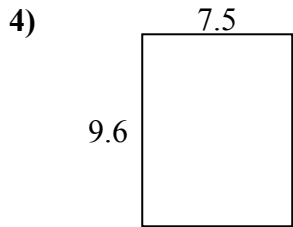
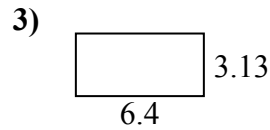
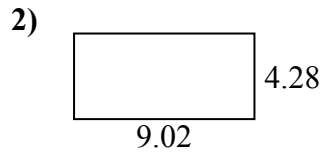



ОТВЕТЫ

1. _____
2. _____
3. _____
4. _____
5. _____
6. _____
7. _____
8. _____
9. _____
10. _____
11. _____
12. _____
13. _____
14. _____
15. _____



Найдите периметр и площадь каждой фигуры. Ответьте с точностью до 10-го числа.

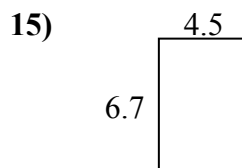
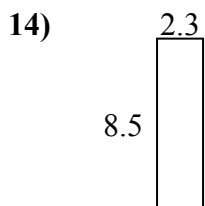
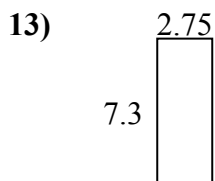
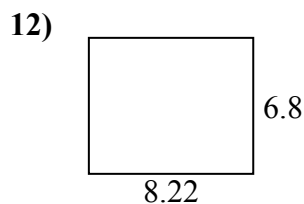
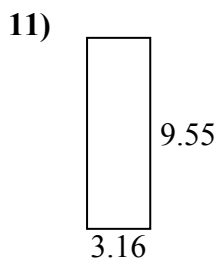
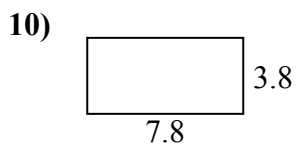
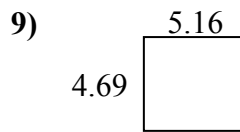
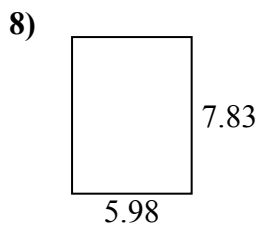
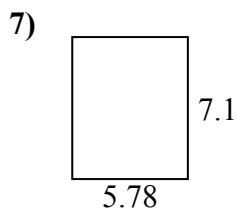
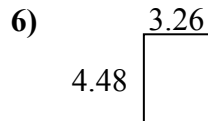
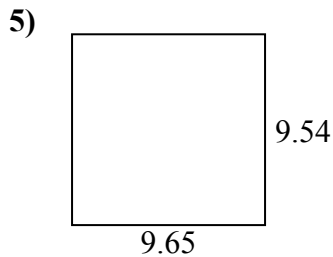
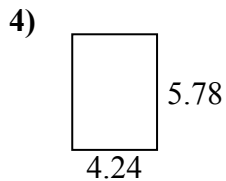
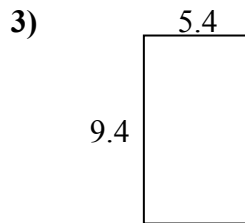
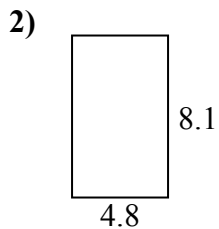
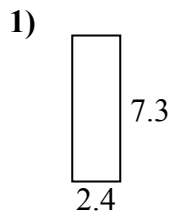


ОТВЕТЫ

1.	<u>30,7</u>	<u>25,2</u>
2.	<u>38,6</u>	<u>26,6</u>
3.	<u>20,0</u>	<u>19,1</u>
4.	<u>72,0</u>	<u>34,2</u>
5.	<u>15,4</u>	<u>16,8</u>
6.	<u>21,9</u>	<u>20,5</u>
7.	<u>12,2</u>	<u>15,8</u>
8.	<u>40,5</u>	<u>26,2</u>
9.	<u>14,0</u>	<u>17,1</u>
10.	<u>25,8</u>	<u>20,7</u>
11.	<u>30,1</u>	<u>23,5</u>
12.	<u>8,0</u>	<u>11,5</u>
13.	<u>70,5</u>	<u>33,6</u>
14.	<u>25,6</u>	<u>22,1</u>
15.	<u>17,2</u>	<u>20,5</u>



Найдите периметр и площадь каждой фигуры. Ответьте с точностью до 10-го числа.

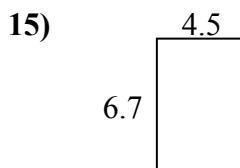
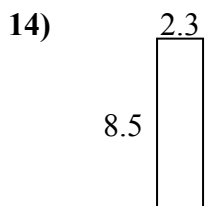
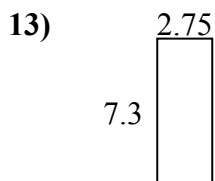
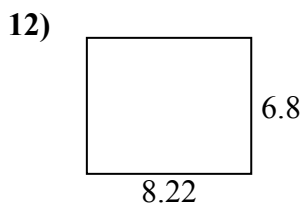
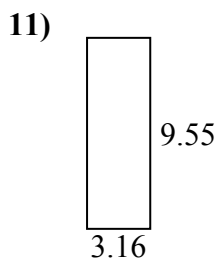
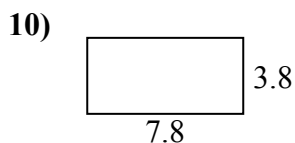
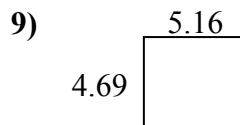
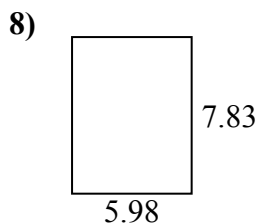
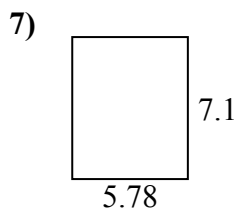
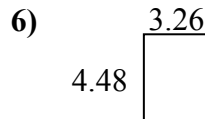
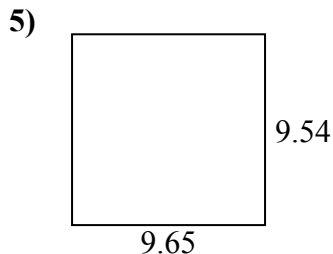
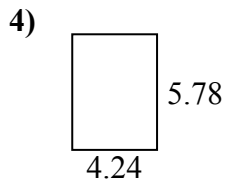
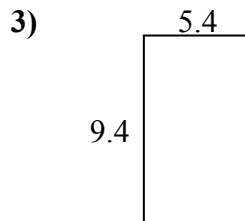
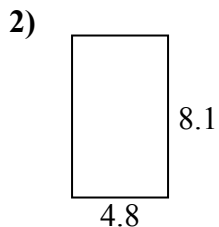
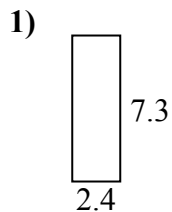


ОТВЕТЫ

1. _____
2. _____
3. _____
4. _____
5. _____
6. _____
7. _____
8. _____
9. _____
10. _____
11. _____
12. _____
13. _____
14. _____
15. _____



Найдите периметр и площадь каждой фигуры. Ответьте с точностью до 10-го числа.

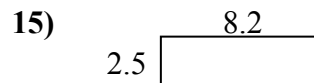
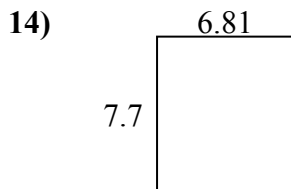
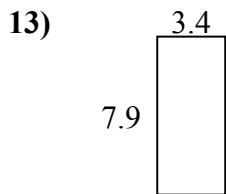
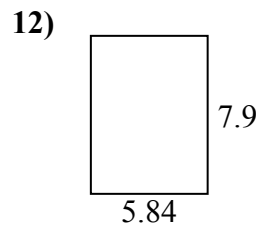
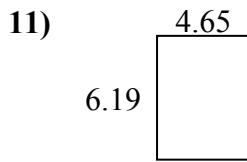
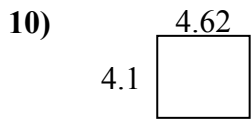
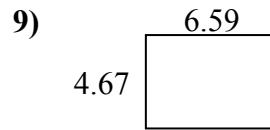
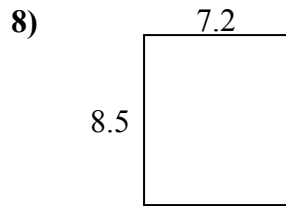
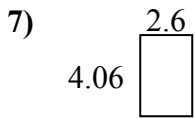
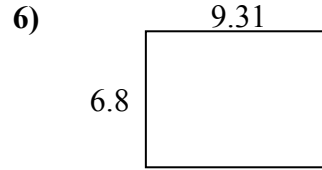
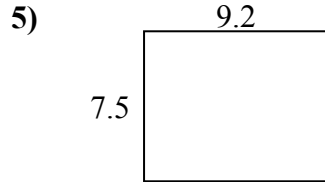
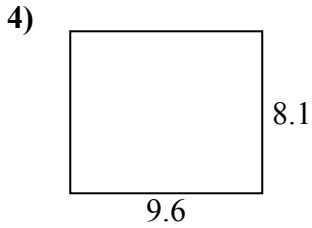
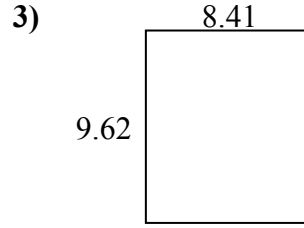
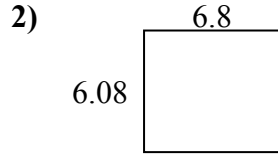
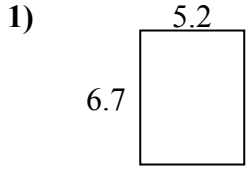


ОТВЕТЫ

1.	<u>17,5</u>	<u>19,4</u>
2.	<u>38,9</u>	<u>25,8</u>
3.	<u>50,8</u>	<u>29,6</u>
4.	<u>24,5</u>	<u>20,0</u>
5.	<u>92,1</u>	<u>38,4</u>
6.	<u>14,6</u>	<u>15,5</u>
7.	<u>41,0</u>	<u>25,8</u>
8.	<u>46,8</u>	<u>27,6</u>
9.	<u>24,2</u>	<u>19,7</u>
10.	<u>29,6</u>	<u>23,2</u>
11.	<u>30,2</u>	<u>25,4</u>
12.	<u>55,9</u>	<u>30,0</u>
13.	<u>20,1</u>	<u>20,1</u>
14.	<u>19,6</u>	<u>21,6</u>
15.	<u>30,2</u>	<u>22,4</u>



Найдите периметр и площадь каждой фигуры. Ответьте с точностью до 10-го числа.

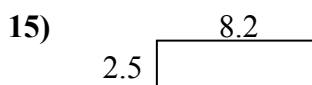
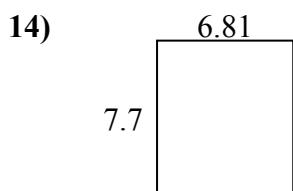
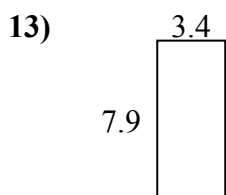
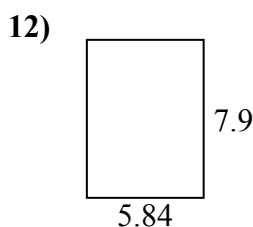
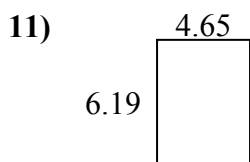
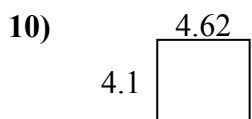
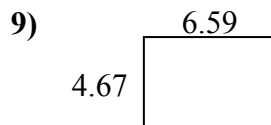
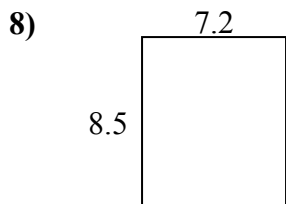
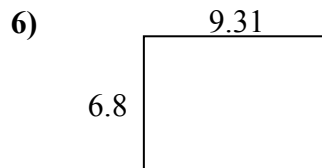
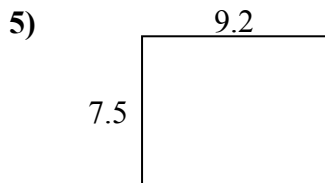
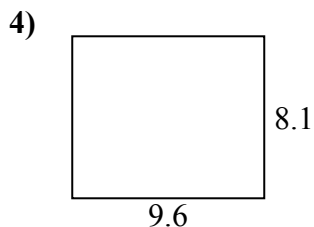
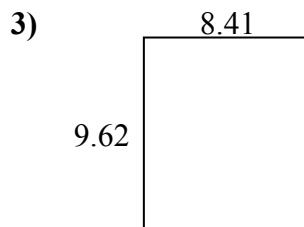
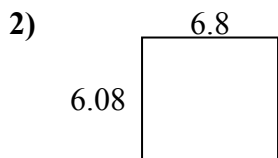
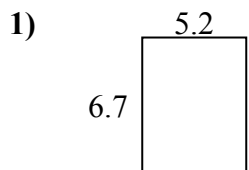


ОТВЕТЫ

1. _____
2. _____
3. _____
4. _____
5. _____
6. _____
7. _____
8. _____
9. _____
10. _____
11. _____
12. _____
13. _____
14. _____
15. _____



Найдите периметр и площадь каждой фигуры. Ответьте с точностью до 10-го числа.

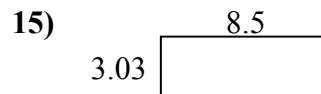
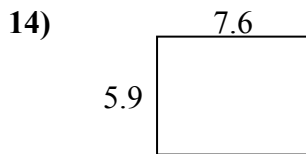
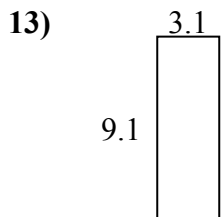
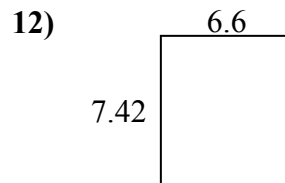
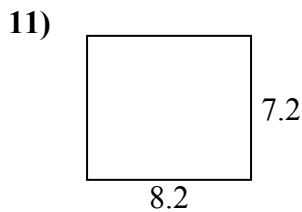
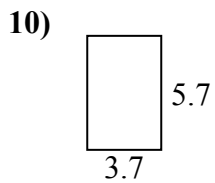
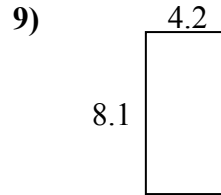
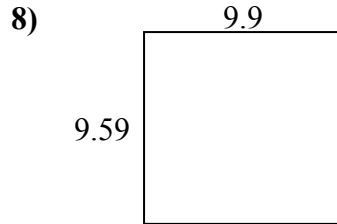
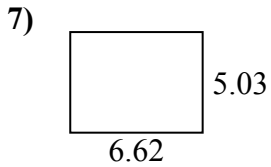
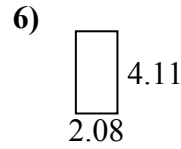
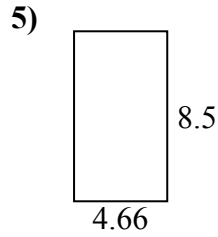
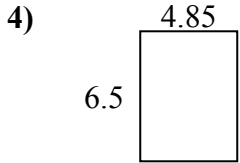
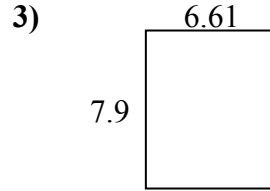
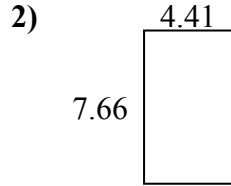
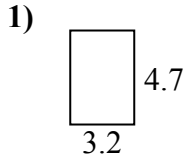


ОТВЕТЫ

1.	<u>34,8</u>	<u>23,8</u>
2.	<u>41,3</u>	<u>25,8</u>
3.	<u>80,9</u>	<u>36,1</u>
4.	<u>77,8</u>	<u>35,4</u>
5.	<u>69,0</u>	<u>33,4</u>
6.	<u>63,3</u>	<u>32,2</u>
7.	<u>10,6</u>	<u>13,3</u>
8.	<u>61,2</u>	<u>31,4</u>
9.	<u>30,8</u>	<u>22,5</u>
10.	<u>18,9</u>	<u>17,4</u>
11.	<u>28,8</u>	<u>21,7</u>
12.	<u>46,1</u>	<u>27,5</u>
13.	<u>26,9</u>	<u>22,6</u>
14.	<u>52,4</u>	<u>29,0</u>
15.	<u>20,5</u>	<u>21,4</u>



Найдите периметр и площадь каждой фигуры. Ответьте с точностью до 10-го числа.

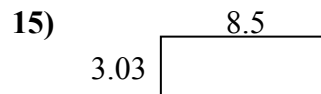
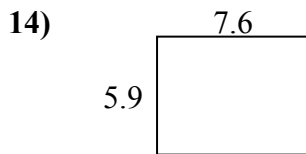
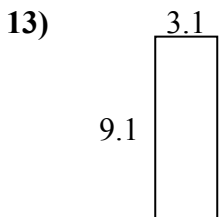
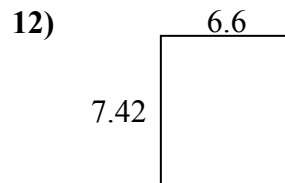
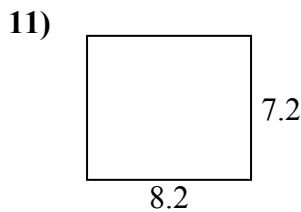
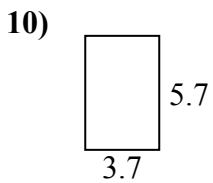
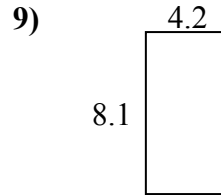
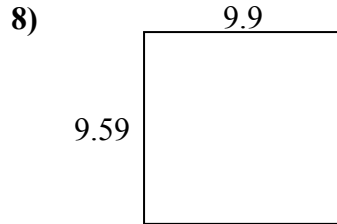
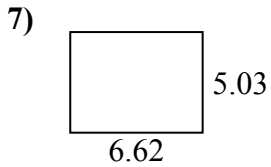
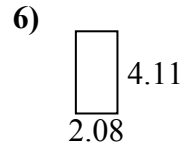
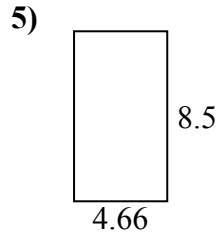
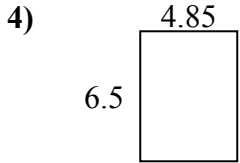
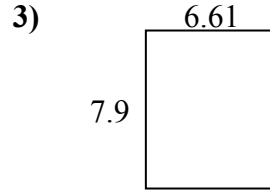
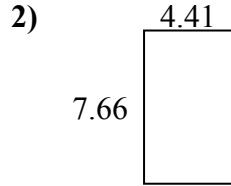
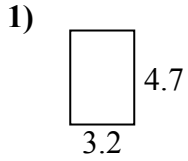


ОТВЕТЫ

1. _____
2. _____
3. _____
4. _____
5. _____
6. _____
7. _____
8. _____
9. _____
10. _____
11. _____
12. _____
13. _____
14. _____
15. _____



Найдите периметр и площадь каждой фигуры. Ответьте с точностью до 10-го числа.

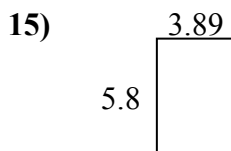
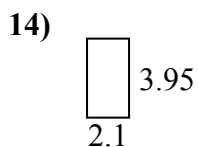
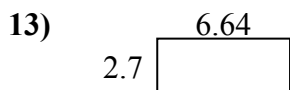
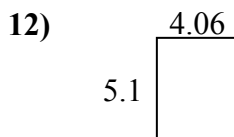
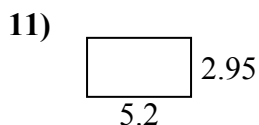
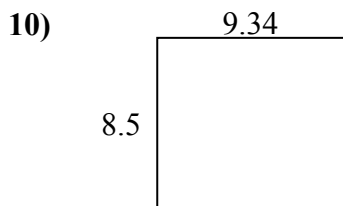
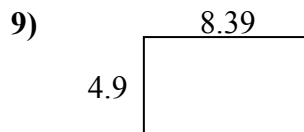
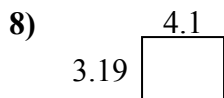
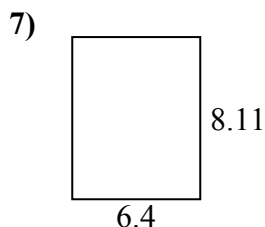
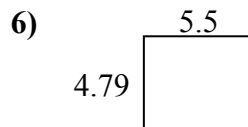
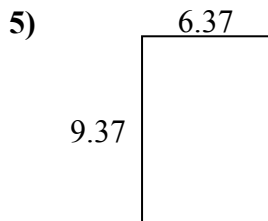
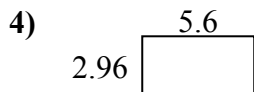
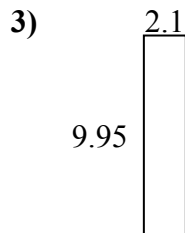
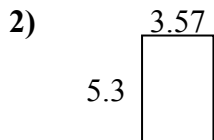
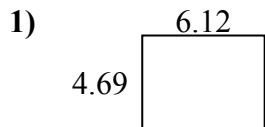


ОТВЕТЫ

1.	<u>15,0</u>	<u>15,8</u>
2.	<u>33,8</u>	<u>24,1</u>
3.	<u>52,2</u>	<u>29,0</u>
4.	<u>31,5</u>	<u>22,7</u>
5.	<u>39,6</u>	<u>26,3</u>
6.	<u>8,5</u>	<u>12,4</u>
7.	<u>33,3</u>	<u>23,3</u>
8.	<u>94,9</u>	<u>39,0</u>
9.	<u>34,0</u>	<u>24,6</u>
10.	<u>21,1</u>	<u>18,8</u>
11.	<u>59,0</u>	<u>30,8</u>
12.	<u>49,0</u>	<u>28,0</u>
13.	<u>28,2</u>	<u>24,4</u>
14.	<u>44,8</u>	<u>27,0</u>
15.	<u>25,8</u>	<u>23,1</u>



Найдите периметр и площадь каждой фигуры. Ответьте с точностью до 10-го числа.

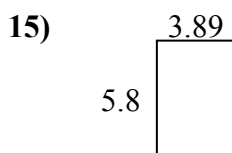
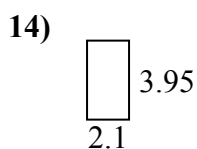
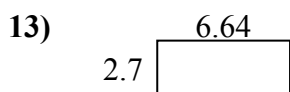
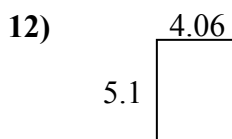
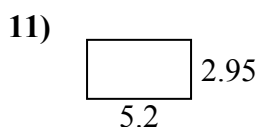
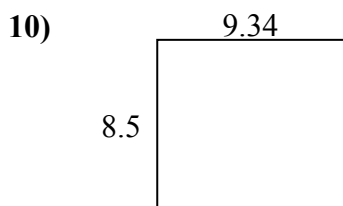
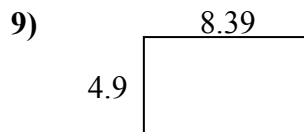
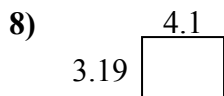
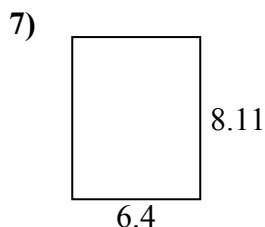
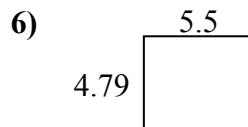
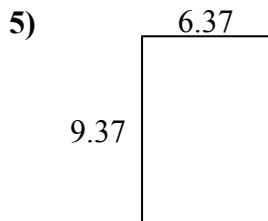
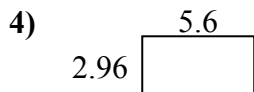
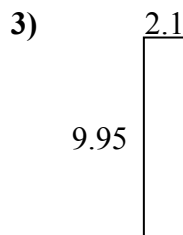
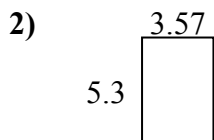
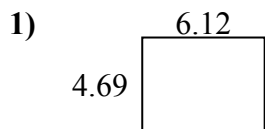


ОТВЕТЫ

1. _____
2. _____
3. _____
4. _____
5. _____
6. _____
7. _____
8. _____
9. _____
10. _____
11. _____
12. _____
13. _____
14. _____
15. _____



Найдите периметр и площадь каждой фигуры. Ответьте с точностью до 10-го числа.

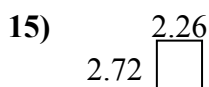
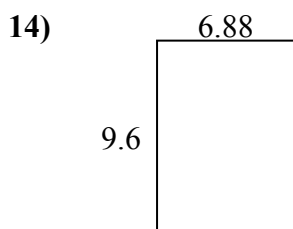
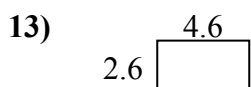
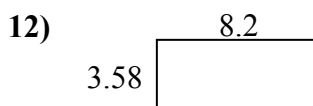
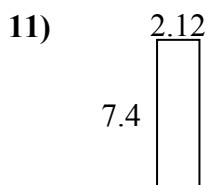
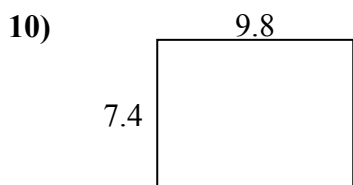
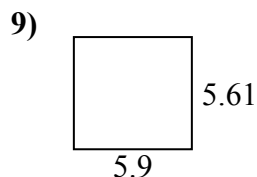

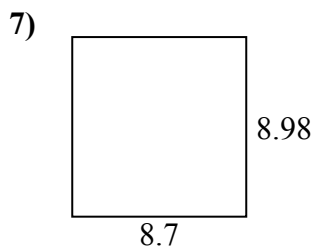
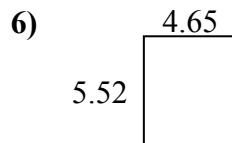
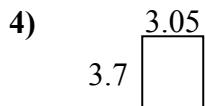
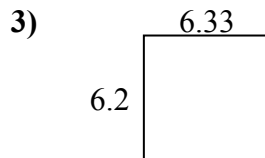
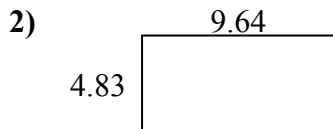
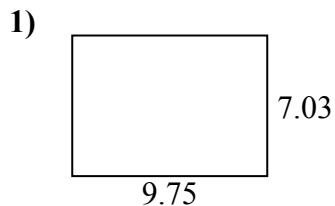


ОТВЕТЫ

1.	<u>28,7</u>	<u>21,6</u>
2.	<u>18,9</u>	<u>17,7</u>
3.	<u>20,9</u>	<u>24,1</u>
4.	<u>16,6</u>	<u>17,1</u>
5.	<u>59,7</u>	<u>31,5</u>
6.	<u>26,3</u>	<u>20,6</u>
7.	<u>51,9</u>	<u>29,0</u>
8.	<u>13,1</u>	<u>14,6</u>
9.	<u>41,1</u>	<u>26,6</u>
10.	<u>79,4</u>	<u>35,7</u>
11.	<u>15,3</u>	<u>16,3</u>
12.	<u>20,7</u>	<u>18,3</u>
13.	<u>17,9</u>	<u>18,7</u>
14.	<u>8,3</u>	<u>12,1</u>
15.	<u>22,6</u>	<u>19,4</u>



Найдите периметр и площадь каждой фигуры. Ответьте с точностью до 10-го числа.

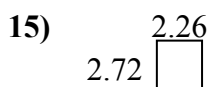
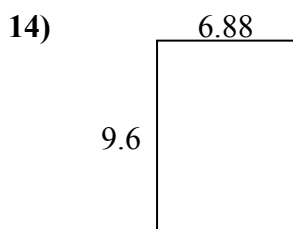
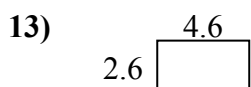
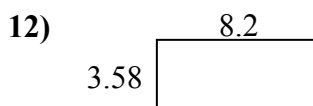
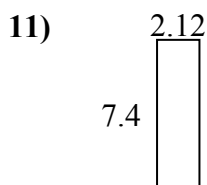
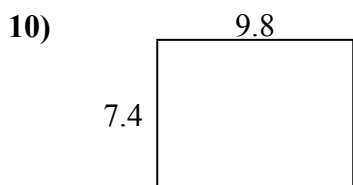
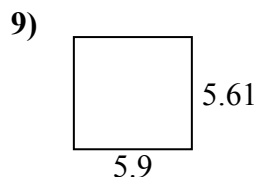

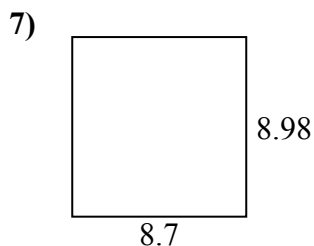
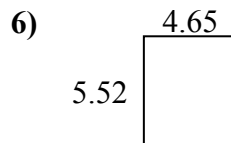
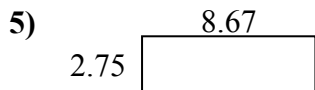
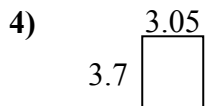
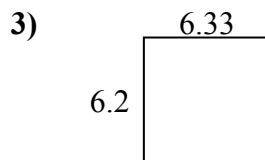
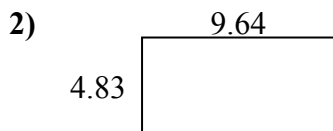
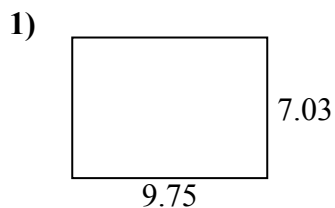


ОТВЕТЫ

1. _____
2. _____
3. _____
4. _____
5. _____
6. _____
7. _____
8. _____
9. _____
10. _____
11. _____
12. _____
13. _____
14. _____
15. _____



Найдите периметр и площадь каждой фигуры. Ответьте с точностью до 10-го числа.



ОТВЕТЫ

1.	<u>68,5</u>	<u>33,6</u>
2.	<u>46,6</u>	<u>28,9</u>
3.	<u>39,2</u>	<u>25,1</u>
4.	<u>11,3</u>	<u>13,5</u>
5.	<u>23,8</u>	<u>22,8</u>
6.	<u>25,7</u>	<u>20,3</u>
7.	<u>78,1</u>	<u>35,4</u>
8.	<u>17,1</u>	<u>18,1</u>
9.	<u>33,1</u>	<u>23,0</u>
10.	<u>72,5</u>	<u>34,4</u>
11.	<u>15,7</u>	<u>19,0</u>
12.	<u>29,4</u>	<u>23,6</u>
13.	<u>12,0</u>	<u>14,4</u>
14.	<u>66,0</u>	<u>33,0</u>
15.	<u>6,1</u>	<u>10,0</u>