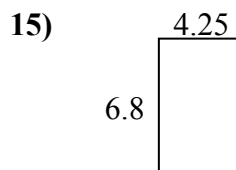
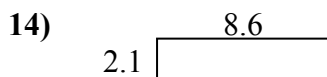
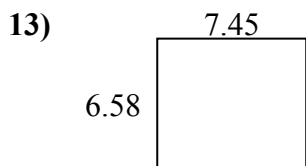
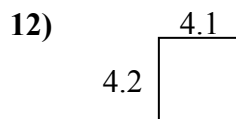
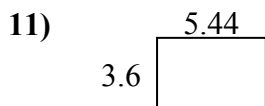
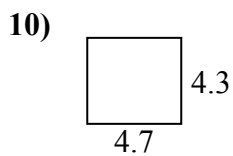

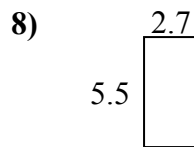
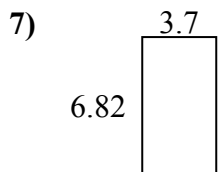
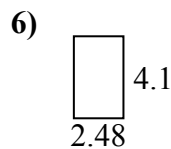
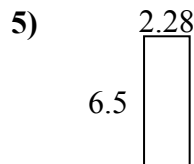
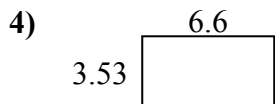
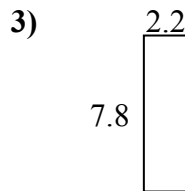
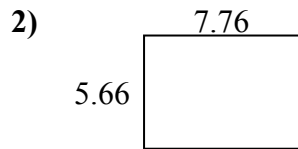
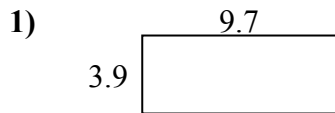




Найдите периметр и площадь каждой фигуры. Ответьте с точностью до 10-го числа.

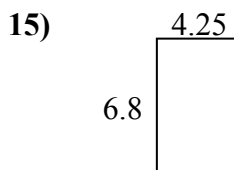
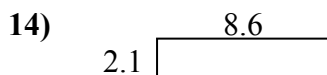
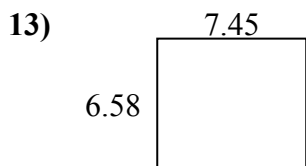
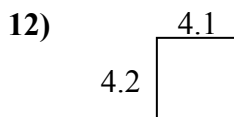
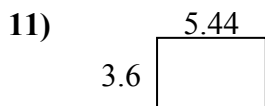
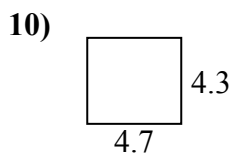

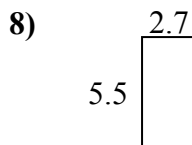
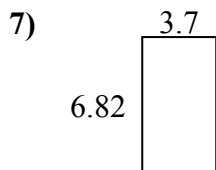
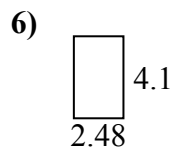
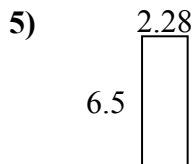
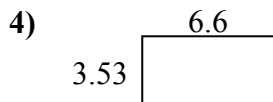
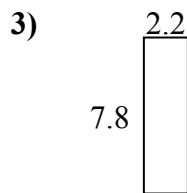
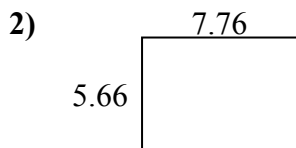
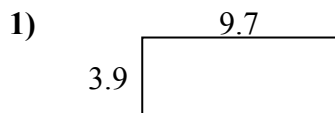


ОТВЕТЫ

1. _____
2. _____
3. _____
4. _____
5. _____
6. _____
7. _____
8. _____
9. _____
10. _____
11. _____
12. _____
13. _____
14. _____
15. _____



Найдите периметр и площадь каждой фигуры. Ответьте с точностью до 10-го числа.



ОТВЕТЫ

1.	<u>37,8</u>	<u>27,2</u>
2.	<u>43,9</u>	<u>26,8</u>
3.	<u>17,2</u>	<u>20,0</u>
4.	<u>23,3</u>	<u>20,3</u>
5.	<u>14,8</u>	<u>17,6</u>
6.	<u>10,2</u>	<u>13,2</u>
7.	<u>25,2</u>	<u>21,0</u>
8.	<u>14,9</u>	<u>16,4</u>
9.	<u>39,6</u>	<u>27,5</u>
10.	<u>20,2</u>	<u>18,0</u>
11.	<u>19,6</u>	<u>18,1</u>
12.	<u>17,2</u>	<u>16,6</u>
13.	<u>49,0</u>	<u>28,1</u>
14.	<u>18,1</u>	<u>21,4</u>
15.	<u>28,9</u>	<u>22,1</u>