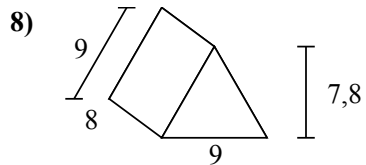
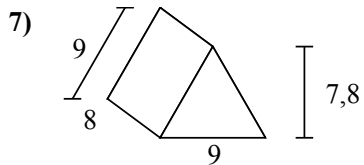
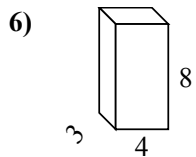
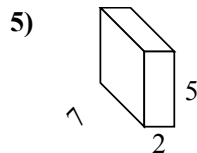
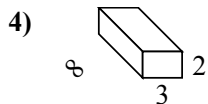
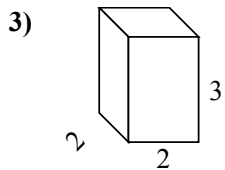
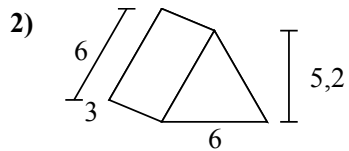
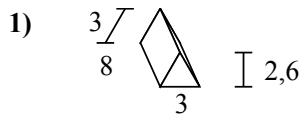
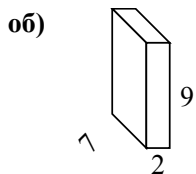




Определите площадь поверхности каждой фигуры.



**Ответы**

об. 190 см<sup>2</sup>

1. \_\_\_\_\_

2. \_\_\_\_\_

3. \_\_\_\_\_

4. \_\_\_\_\_

5. \_\_\_\_\_

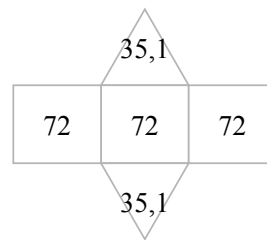
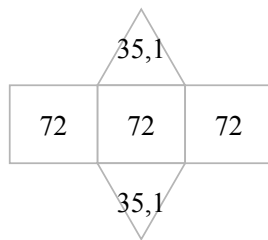
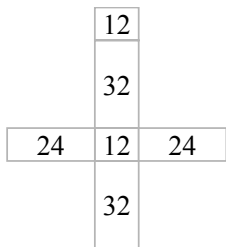
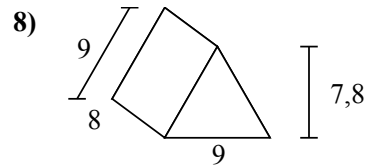
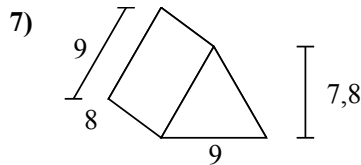
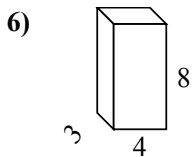
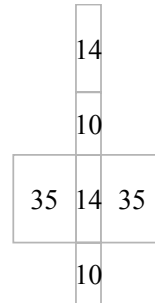
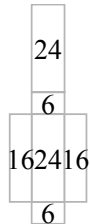
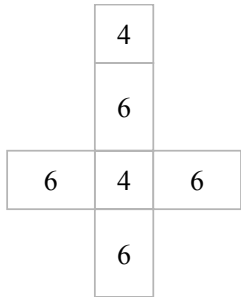
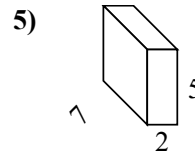
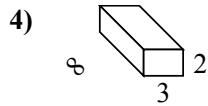
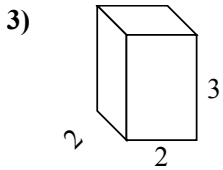
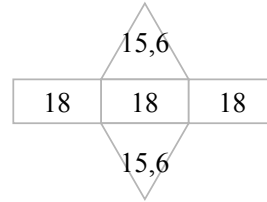
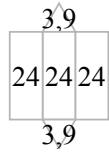
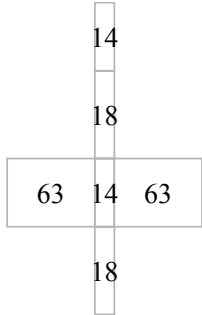
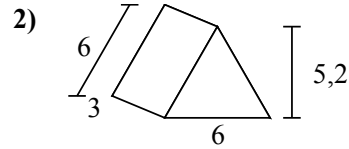
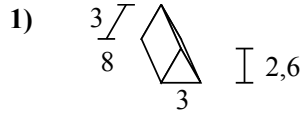
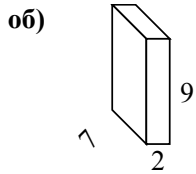
6. \_\_\_\_\_

7. \_\_\_\_\_

8. \_\_\_\_\_



Определите площадь поверхности каждой фигуры.



**ОТВЕТЫ**

- об. 190 cm<sup>2</sup>
- 1. 79,8 cm<sup>2</sup>
- 2. 85,2 cm<sup>2</sup>
- 3. 32 cm<sup>2</sup>
- 4. 92 cm<sup>2</sup>
- 5. 118 cm<sup>2</sup>
- 6. 136 cm<sup>2</sup>
- 7. 286,2 cm<sup>2</sup>
- 8. 286,2 cm<sup>2</sup>