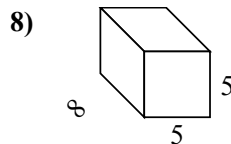
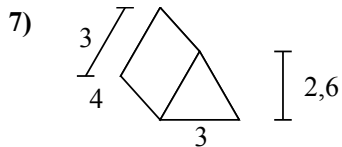
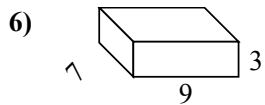
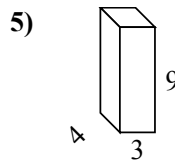
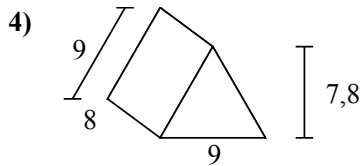
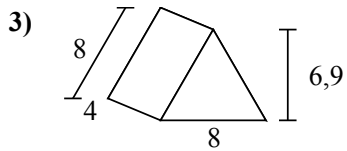
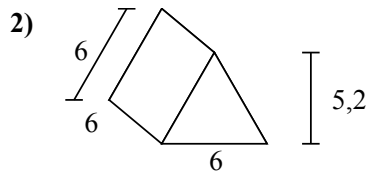
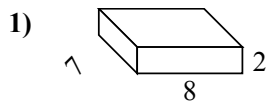
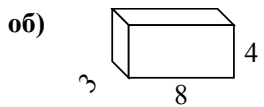




Определите площадь поверхности каждой фигуры.



Ответы

об. **136 cm²**

1. _____

2. _____

3. _____

4. _____

5. _____

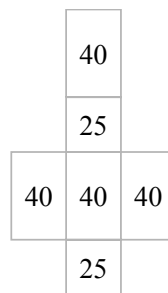
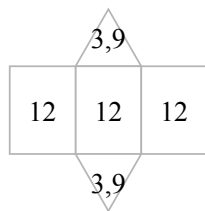
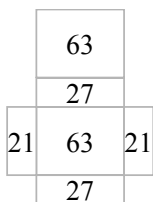
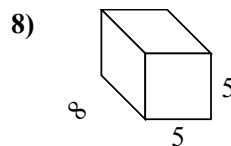
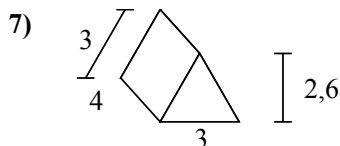
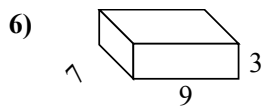
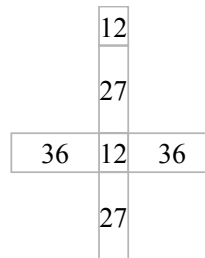
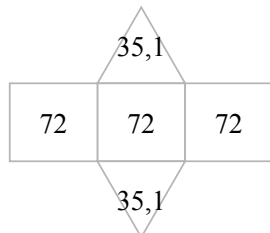
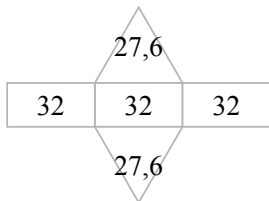
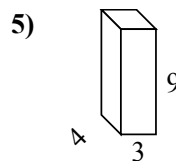
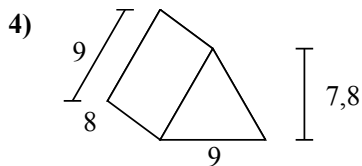
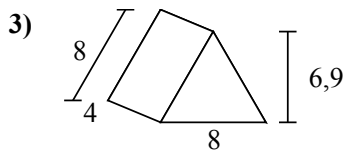
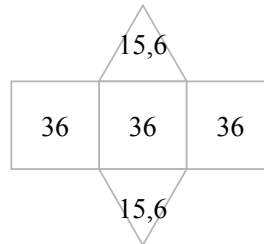
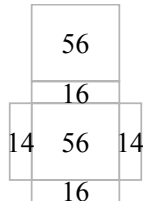
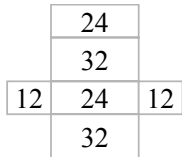
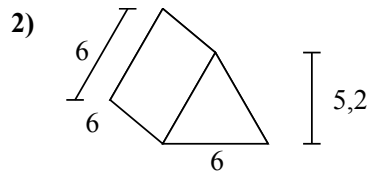
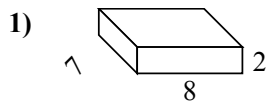
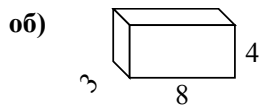
6. _____

7. _____

8. _____



Определите площадь поверхности каждой фигуры.



ОТВЕТЫ

об. 136 cm²

1. 172 cm²

2. 139,2 cm²

3. 151,2 cm²

4. 286,2 cm²

5. 150 cm²

6. 222 cm²

7. 43,8 cm²

8. 210 cm²