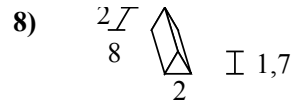
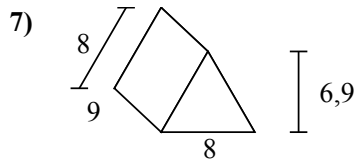
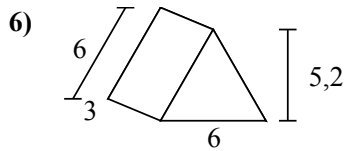
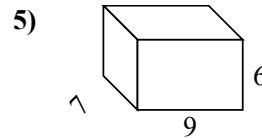
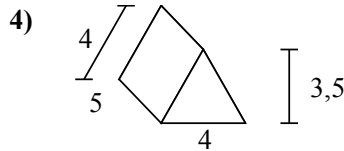
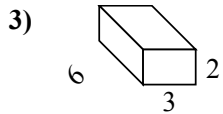
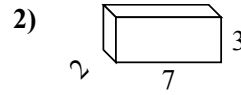
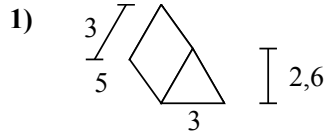
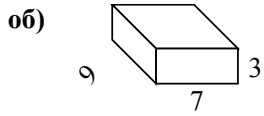




Определите площадь поверхности каждой фигуры.


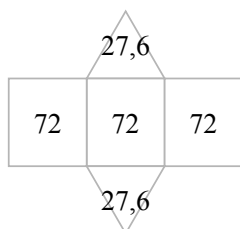
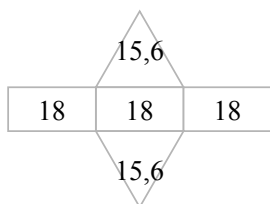
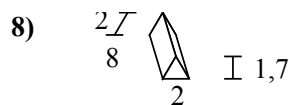
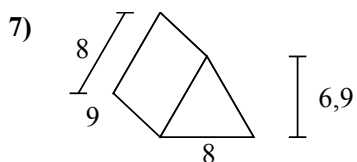
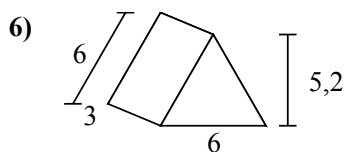
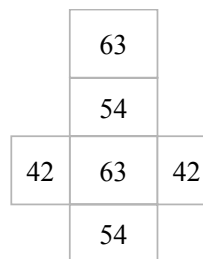
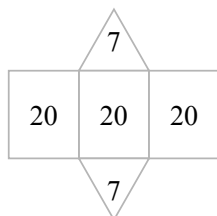
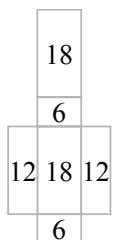
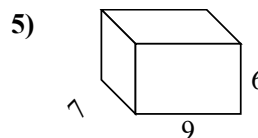
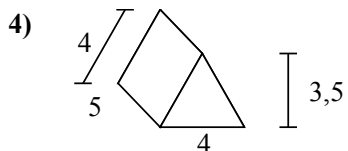
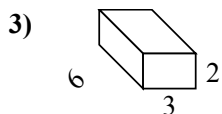
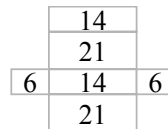
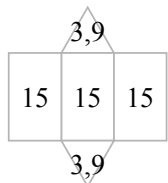
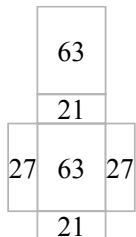
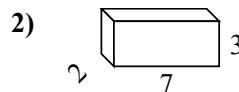
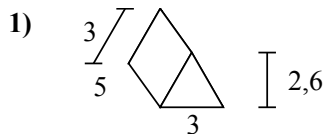
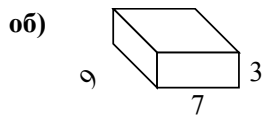


Ответы

- об. **222 cm²**
1. _____
2. _____
3. _____
4. _____
5. _____
6. _____
7. _____
8. _____



Определите площадь поверхности каждой фигуры.



ОТВЕТЫ

об. 222 cm²

1. 52,8 cm²

2. 82 cm²

3. 72 cm²

4. 74 cm²

5. 318 cm²

6. 85,2 cm²

7. 271,2 cm²

8. 51,4 cm²