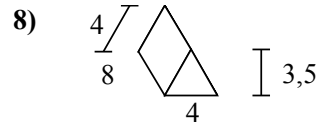
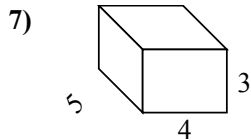
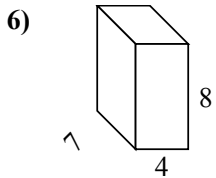
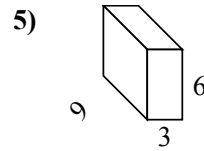
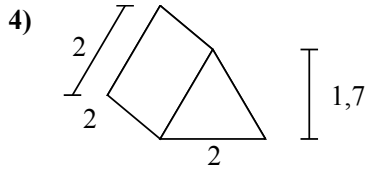
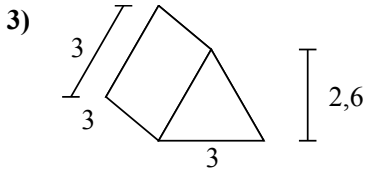
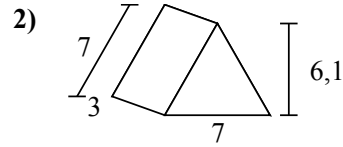
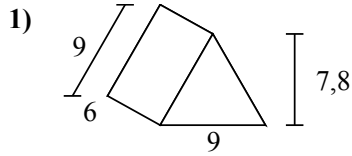
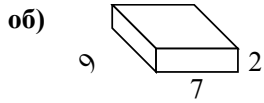




Определите площадь поверхности каждой фигуры.



Ответы

об. **190 cm²**

1. _____

2. _____

3. _____

4. _____

5. _____

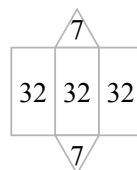
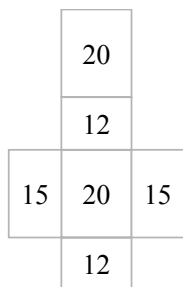
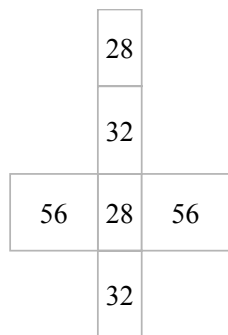
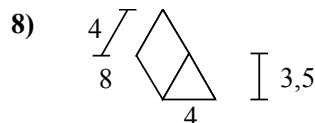
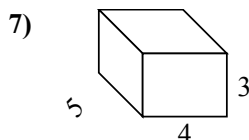
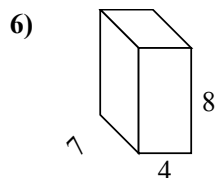
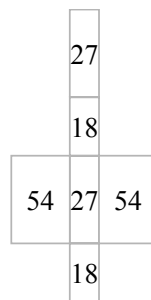
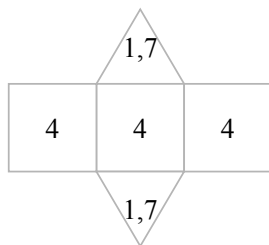
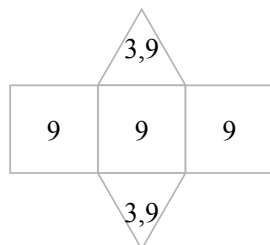
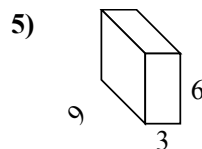
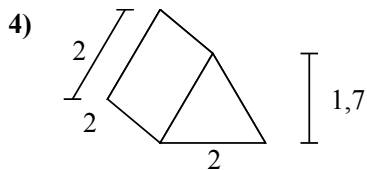
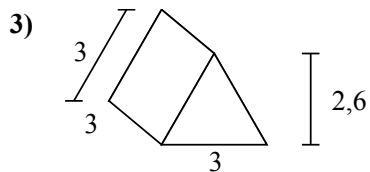
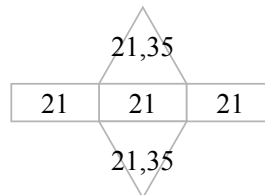
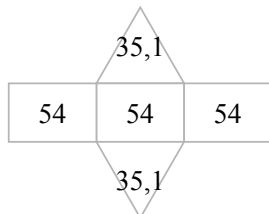
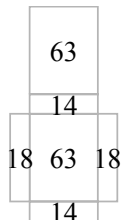
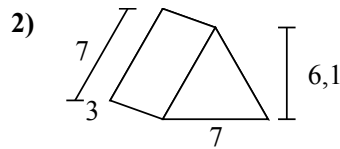
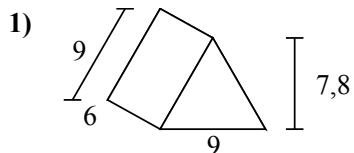
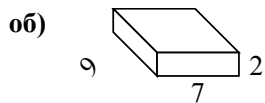
6. _____

7. _____

8. _____



Определите площадь поверхности каждой фигуры.



ОТВЕТЫ

об. 190 cm²

1. 232,2 cm²

2. 105,7 cm²

3. 34,8 cm²

4. 15,4 cm²

5. 198 cm²

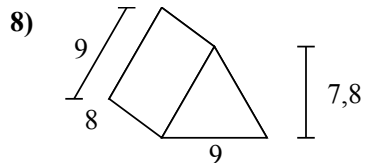
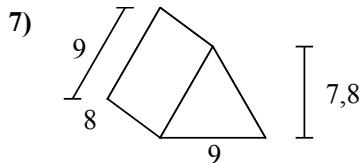
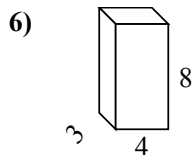
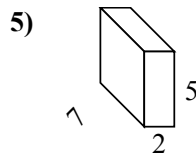
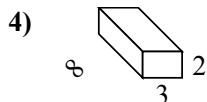
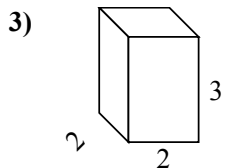
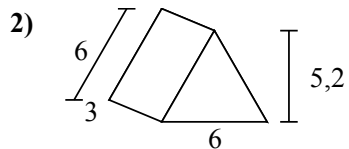
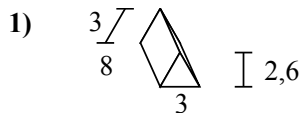
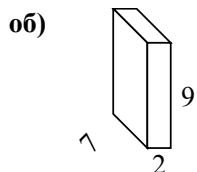
6. 232 cm²

7. 94 cm²

8. 110 cm²



Определите площадь поверхности каждой фигуры.



Отвeты

об. **190 cm²**

1. _____

2. _____

3. _____

4. _____

5. _____

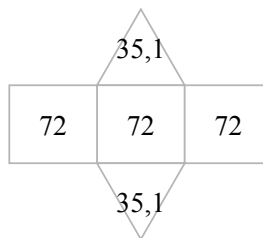
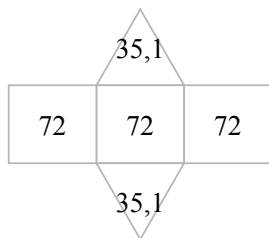
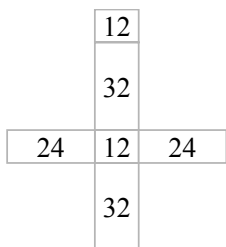
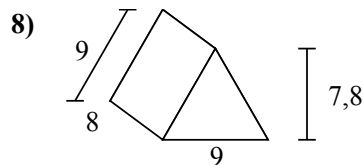
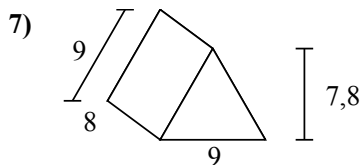
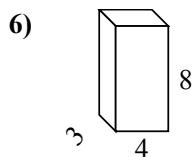
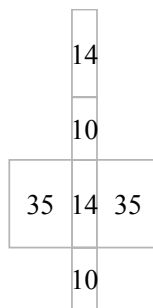
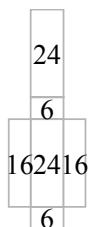
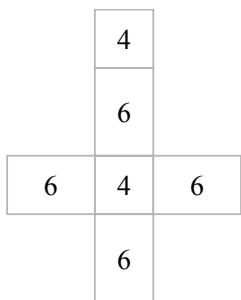
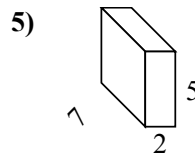
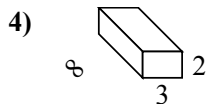
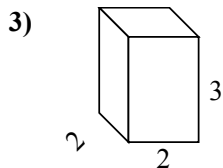
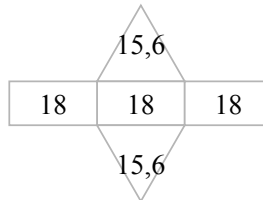
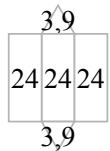
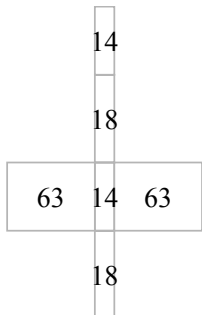
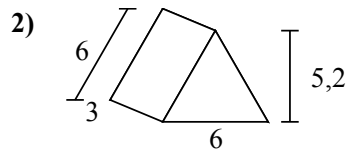
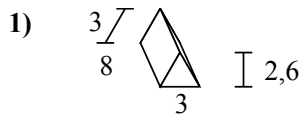
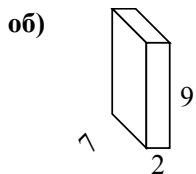
6. _____

7. _____

8. _____



Определите площадь поверхности каждой фигуры.

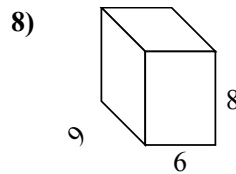
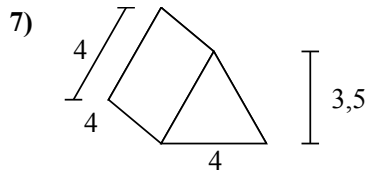
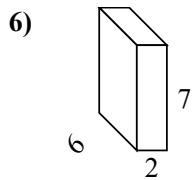
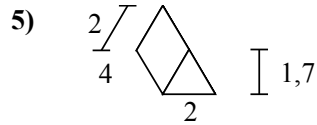
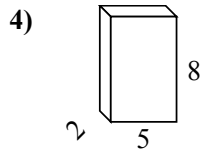
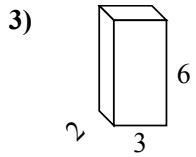
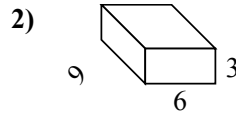
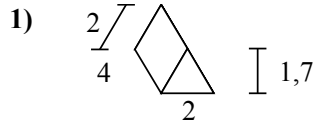
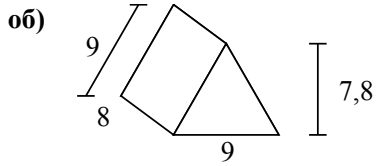


ОТВЕТЫ

- об. 190 cm²
- 1. 79,8 cm²
- 2. 85,2 cm²
- 3. 32 cm²
- 4. 92 cm²
- 5. 118 cm²
- 6. 136 cm²
- 7. 286,2 cm²
- 8. 286,2 cm²



Определите площадь поверхности каждой фигуры.

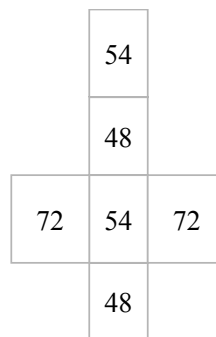
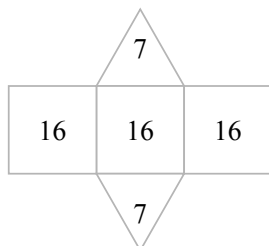
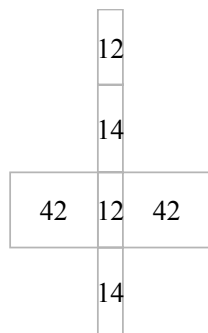
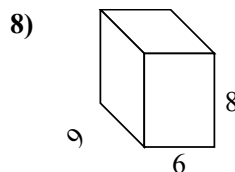
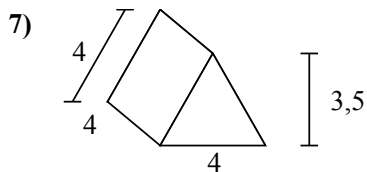
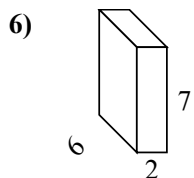
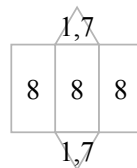
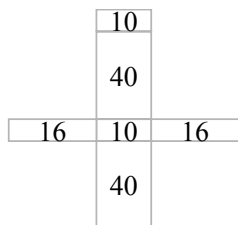
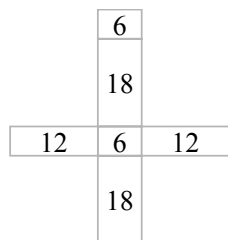
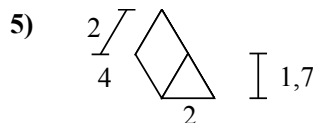
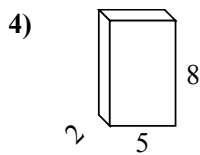
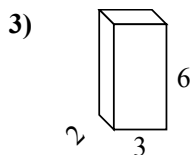
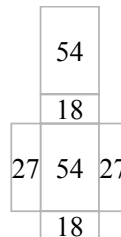
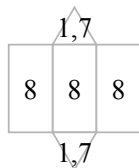
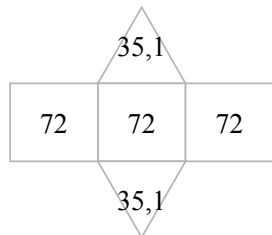
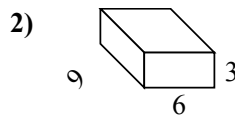
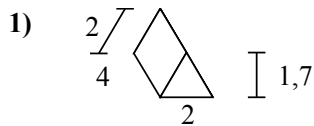
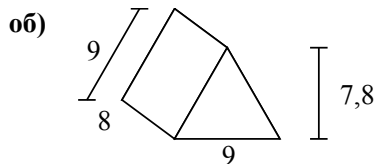


Ответы

- об. **286,2 см²**
- 1. _____
- 2. _____
- 3. _____
- 4. _____
- 5. _____
- 6. _____
- 7. _____
- 8. _____



Определите площадь поверхности каждой фигуры.



ОТВЕТЫ

об. 286,2 cm²

1. 27,4 cm²

2. 198 cm²

3. 72 cm²

4. 132 cm²

5. 27,4 cm²

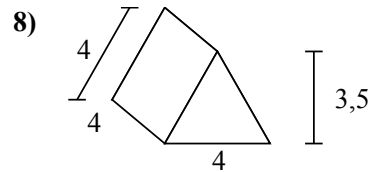
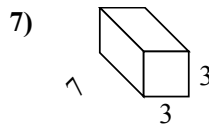
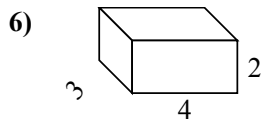
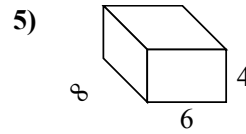
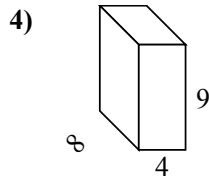
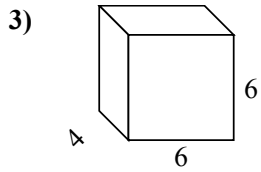
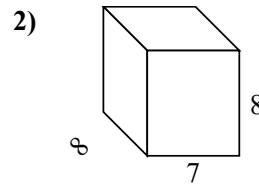
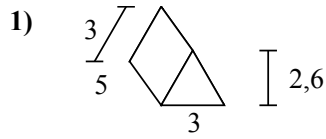
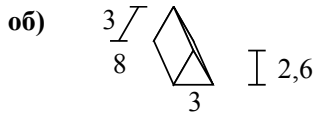
6. 136 cm²

7. 62 cm²

8. 348 cm²



Определите площадь поверхности каждой фигуры.



Ответы

об. 79,8 см²

1. _____

2. _____

3. _____

4. _____

5. _____

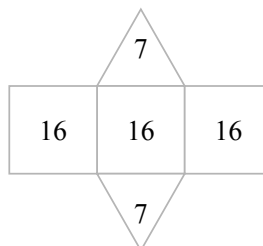
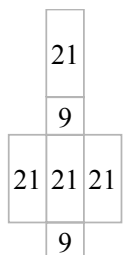
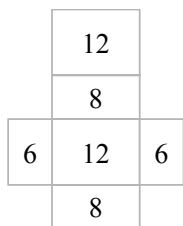
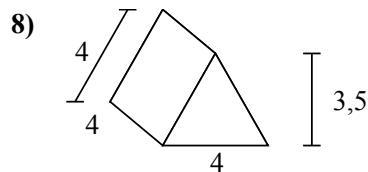
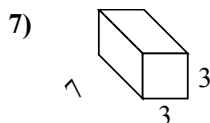
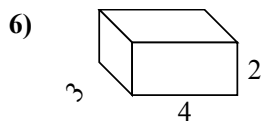
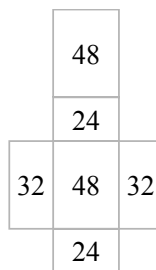
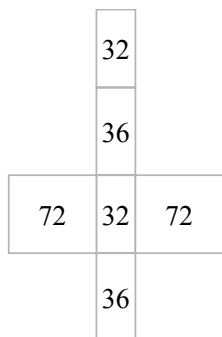
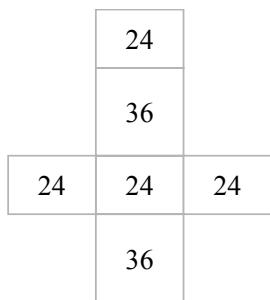
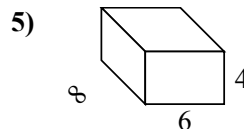
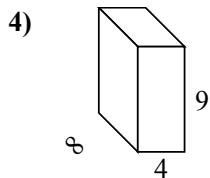
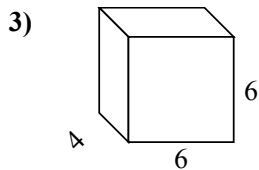
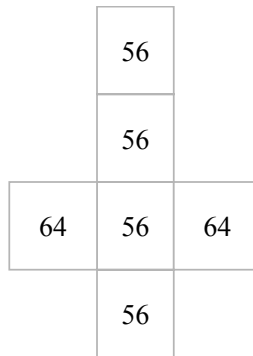
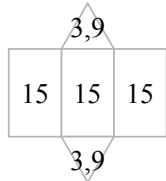
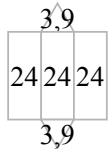
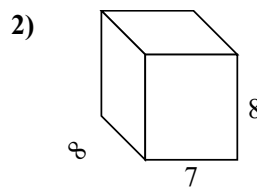
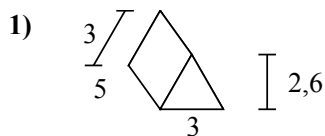
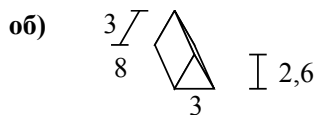
6. _____

7. _____

8. _____



Определите площадь поверхности каждой фигуры.

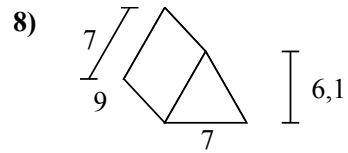
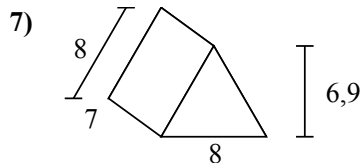
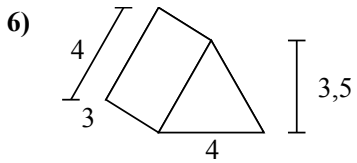
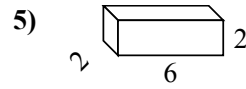
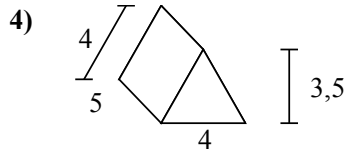
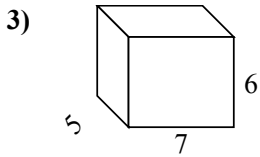
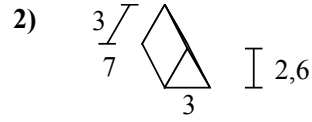
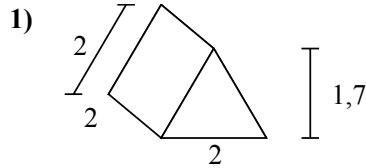
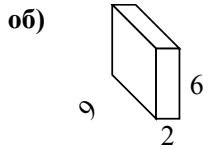


Ответы

- об. 79,8 cm²
- 1. 52,8 cm²
- 2. 352 cm²
- 3. 168 cm²
- 4. 280 cm²
- 5. 208 cm²
- 6. 52 cm²
- 7. 102 cm²
- 8. 62 cm²



Определите площадь поверхности каждой фигуры.



Ответы

об. 168 cm²

1. _____

2. _____

3. _____

4. _____

5. _____

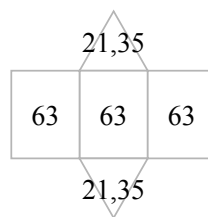
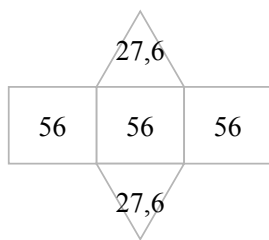
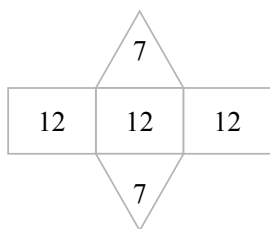
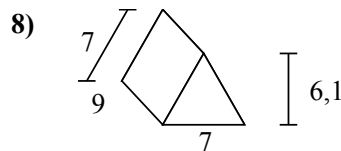
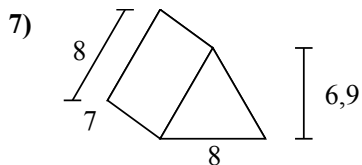
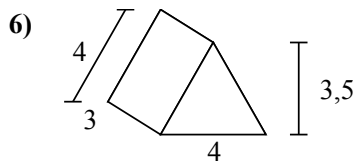
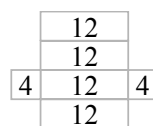
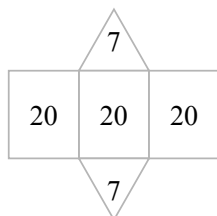
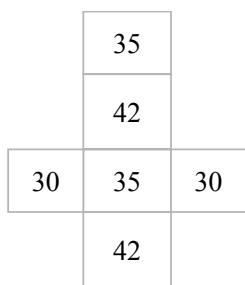
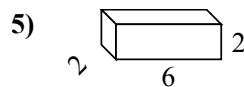
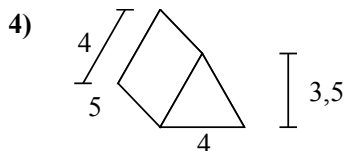
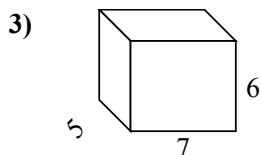
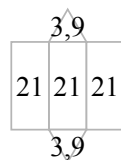
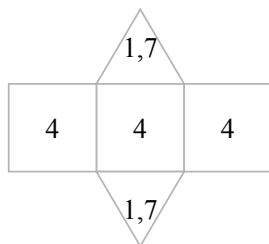
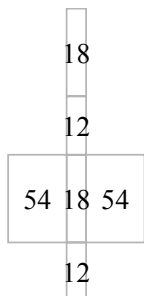
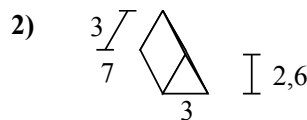
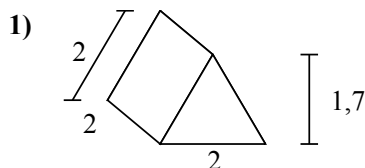
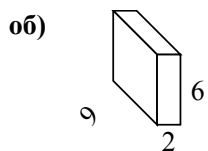
6. _____

7. _____

8. _____



Определите площадь поверхности каждой фигуры.



ОТВЕТЫ

об. 168 cm²

1. 15,4 cm²

2. 70,8 cm²

3. 214 cm²

4. 74 cm²

5. 56 cm²

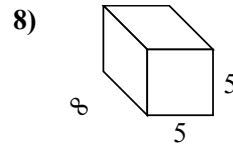
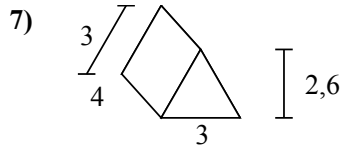
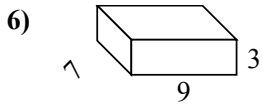
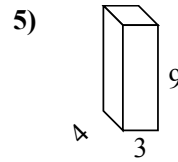
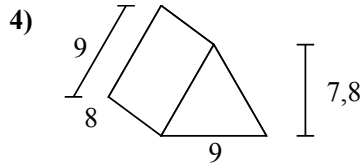
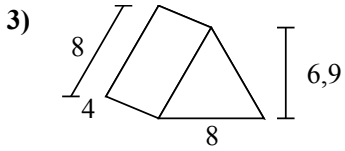
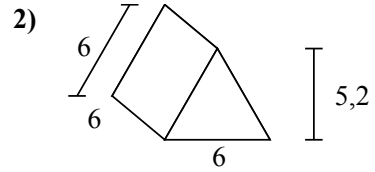
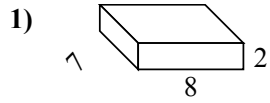
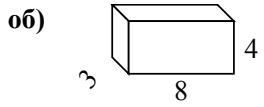
6. 50 cm²

7. 223,2 cm²

8. 231,7 cm²



Определите площадь поверхности каждой фигуры.



Ответы

об. 136 cm²

1. _____

2. _____

3. _____

4. _____

5. _____

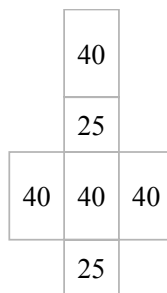
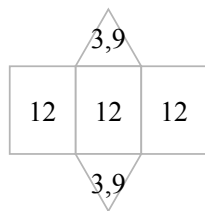
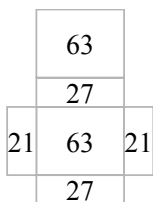
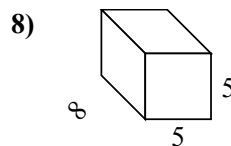
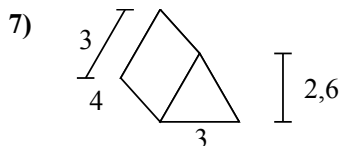
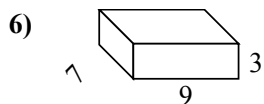
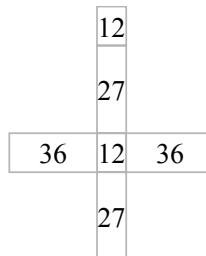
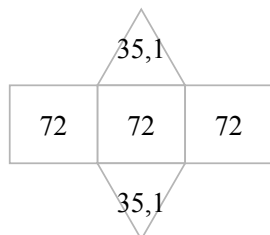
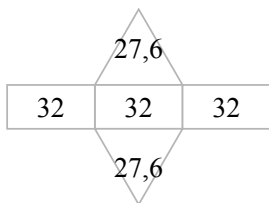
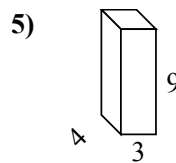
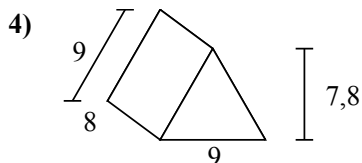
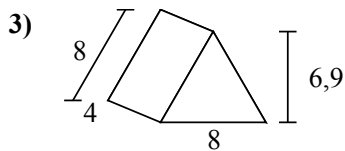
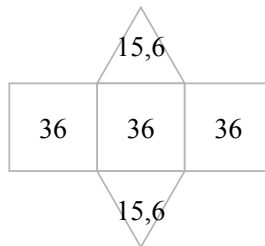
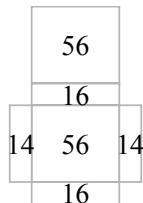
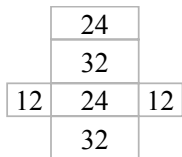
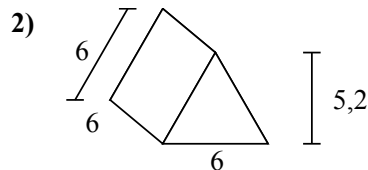
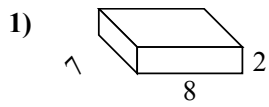
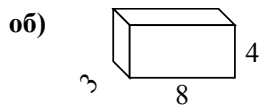
6. _____

7. _____

8. _____



Определите площадь поверхности каждой фигуры.



ОТВЕТЫ

об. 136 cm²

1. 172 cm²

2. 139,2 cm²

3. 151,2 cm²

4. 286,2 cm²

5. 150 cm²

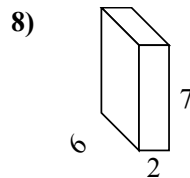
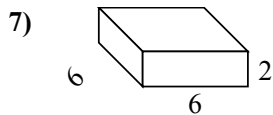
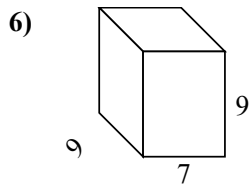
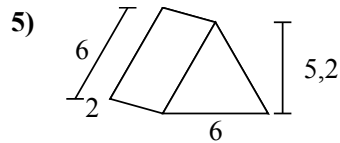
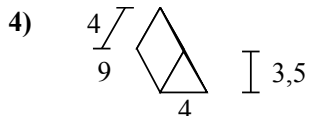
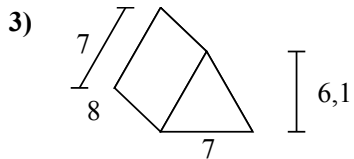
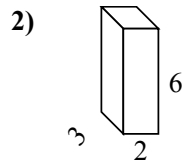
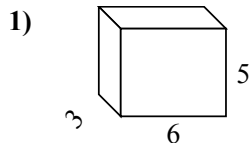
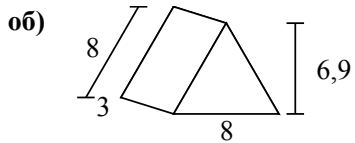
6. 222 cm²

7. 43,8 cm²

8. 210 cm²



Определите площадь поверхности каждой фигуры.



Ответы

об. 127,2 см²

1. _____

2. _____

3. _____

4. _____

5. _____

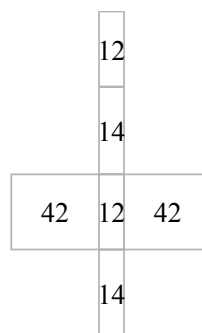
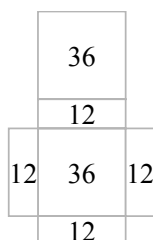
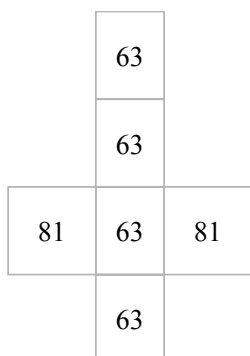
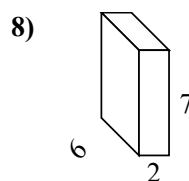
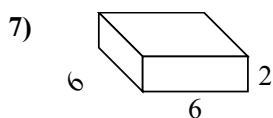
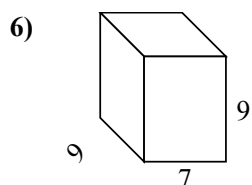
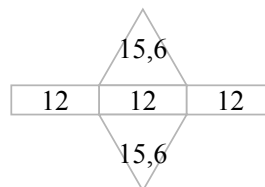
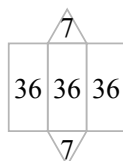
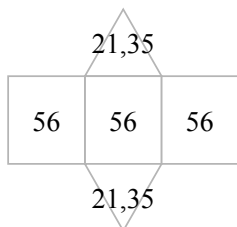
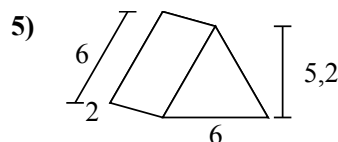
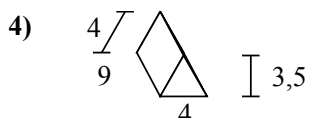
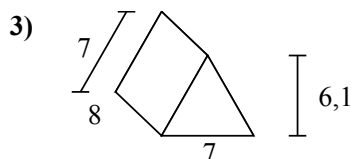
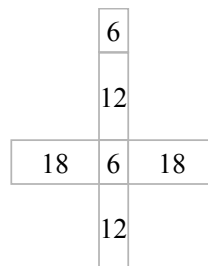
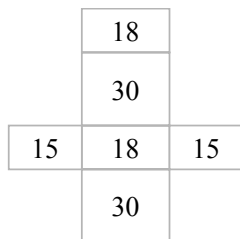
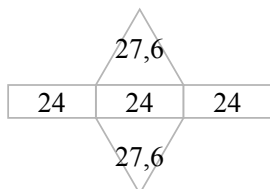
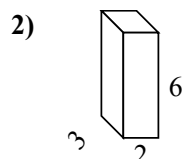
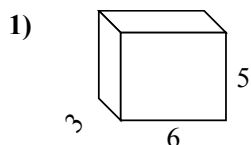
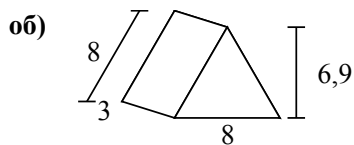
6. _____

7. _____

8. _____



Определите площадь поверхности каждой фигуры.



ОТВЕТЫ

об. 127,2 cm²

1. 126 cm²

2. 72 cm²

3. 210,7 cm²

4. 122 cm²

5. 67,2 cm²

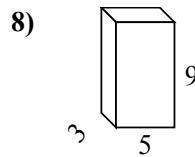
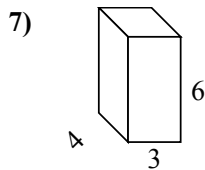
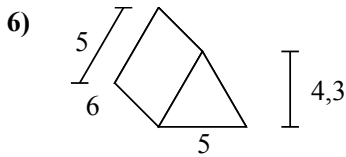
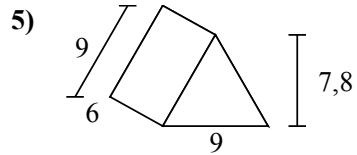
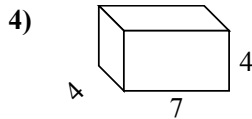
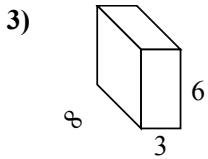
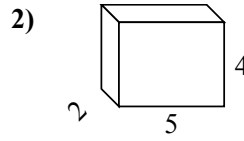
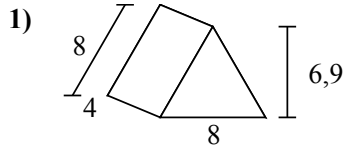
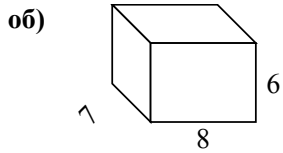
6. 414 cm²

7. 120 cm²

8. 136 cm²



Определите площадь поверхности каждой фигуры.



Ответы

об. 292 см²

1. _____

2. _____

3. _____

4. _____

5. _____

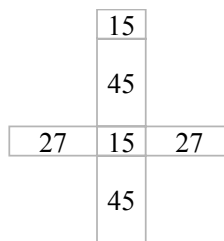
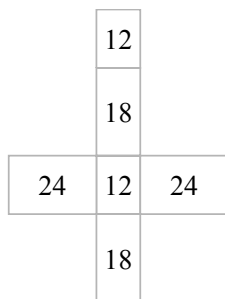
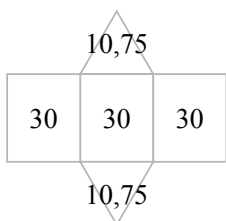
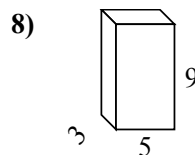
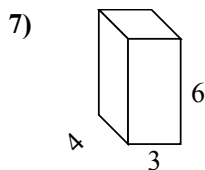
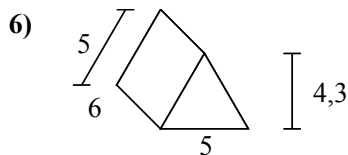
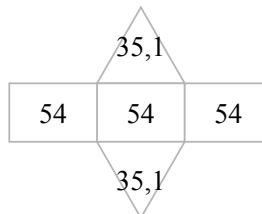
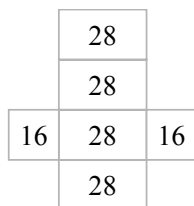
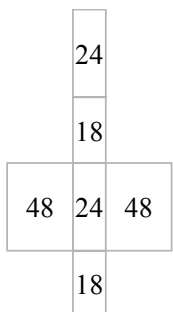
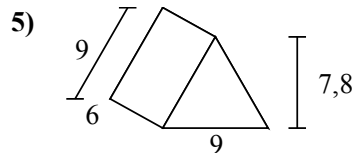
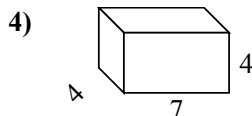
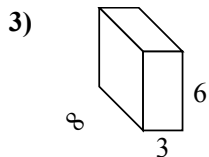
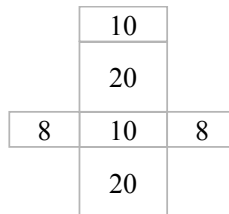
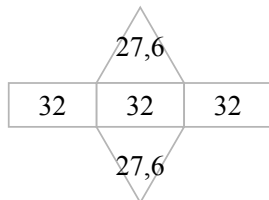
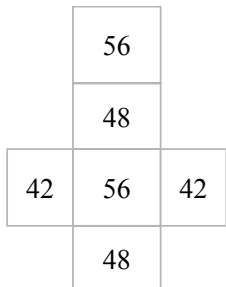
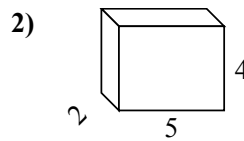
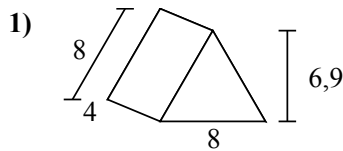
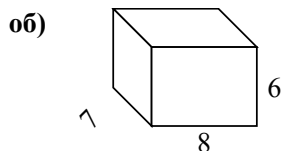
6. _____

7. _____

8. _____



Определите площадь поверхности каждой фигуры.



ОТВЕТЫ

об. 292 cm²

1. 151,2 cm²

2. 76 cm²

3. 180 cm²

4. 144 cm²

5. 232,2 cm²

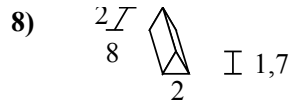
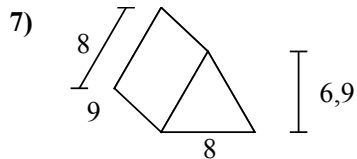
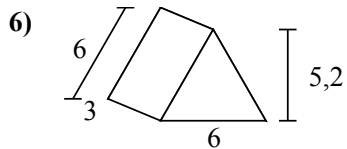
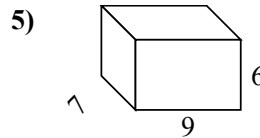
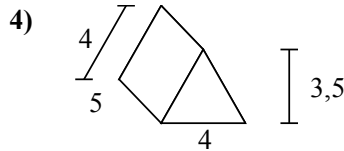
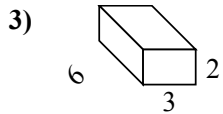
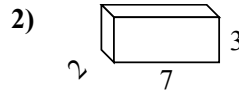
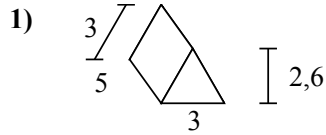
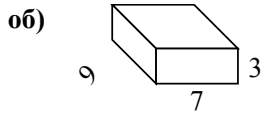
6. 111,5 cm²

7. 108 cm²

8. 174 cm²



Определите площадь поверхности каждой фигуры.

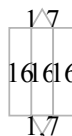
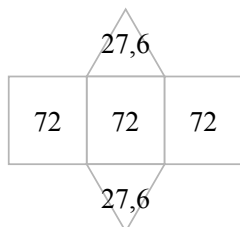
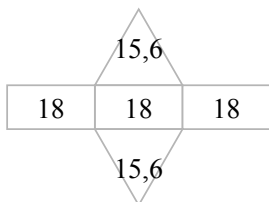
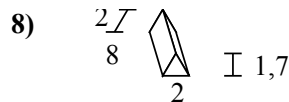
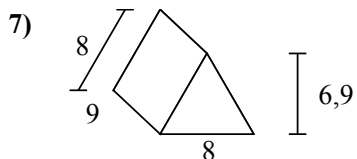
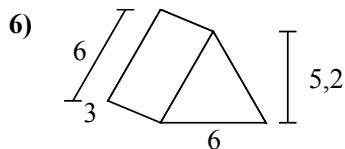
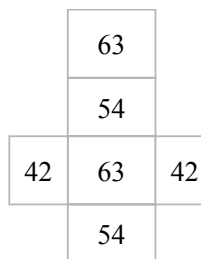
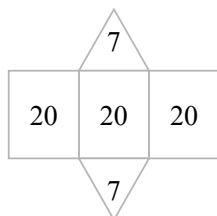
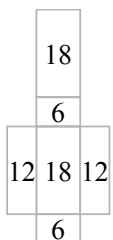
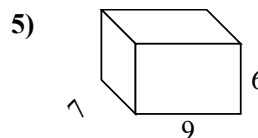
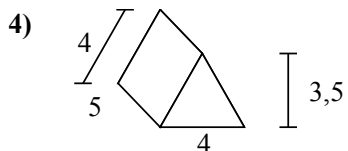
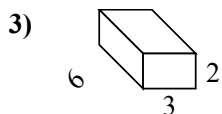
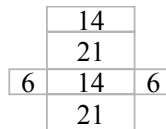
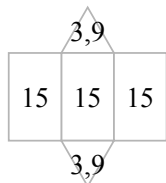
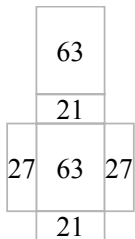
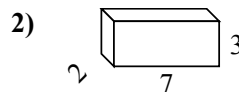
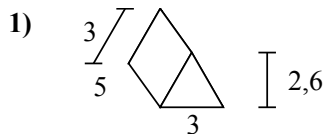
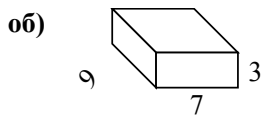


Ответы

- об. **222 cm²**
1. _____
2. _____
3. _____
4. _____
5. _____
6. _____
7. _____
8. _____



Определите площадь поверхности каждой фигуры.



ОТВЕТЫ

об. 222 cm²

1. 52,8 cm²

2. 82 cm²

3. 72 cm²

4. 74 cm²

5. 318 cm²

6. 85,2 cm²

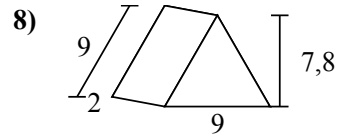
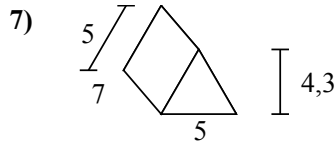
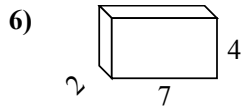
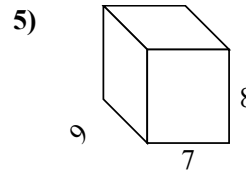
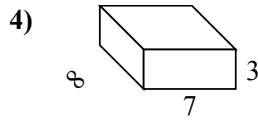
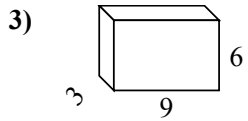
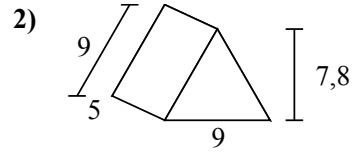
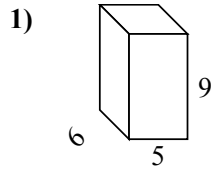
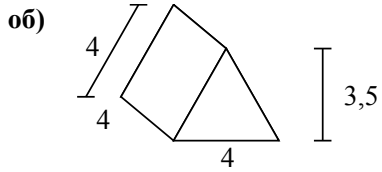
7. 271,2 cm²

8. 51,4 cm²



Определите площадь поверхности каждой фигуры.

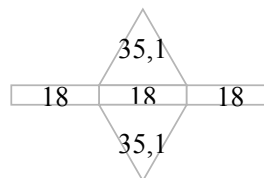
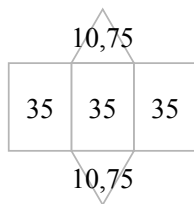
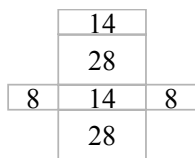
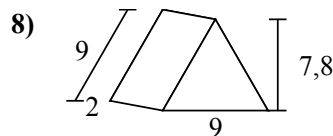
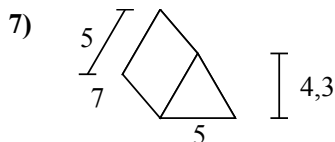
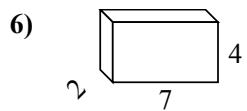
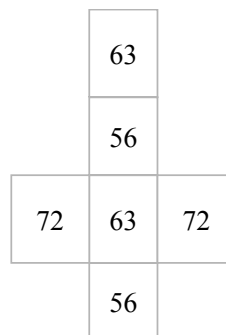
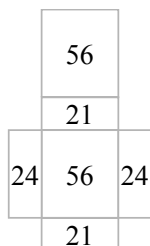
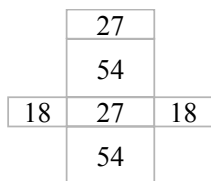
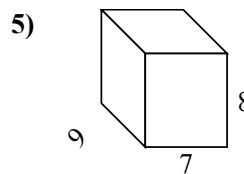
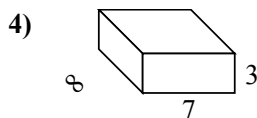
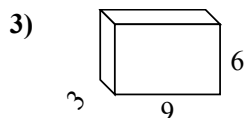
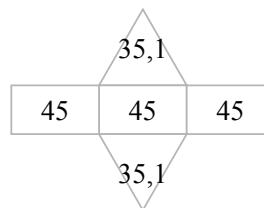
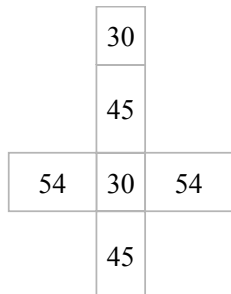
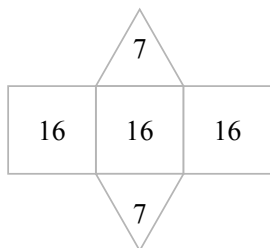
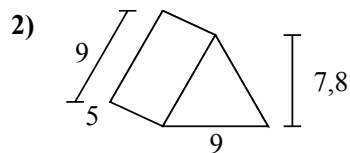
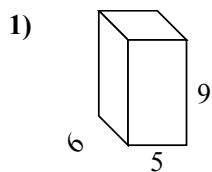
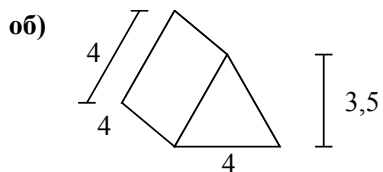
ОТВЕТЫ



- об. **62 cm²**
1. _____
2. _____
3. _____
4. _____
5. _____
6. _____
7. _____
8. _____



Определите площадь поверхности каждой фигуры.



ОТВЕТЫ

об. 62 cm²

1. 258 cm²

2. 205,2 cm²

3. 198 cm²

4. 202 cm²

5. 382 cm²

6. 100 cm²

7. 126,5 cm²

8. 124,2 cm²