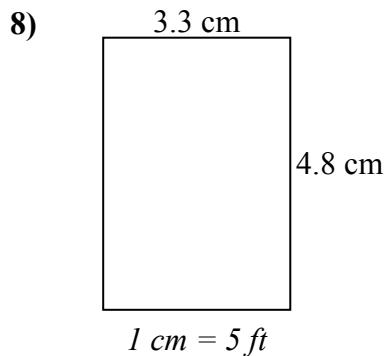
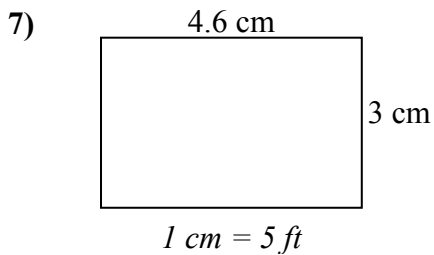
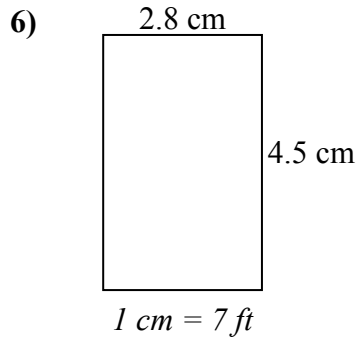
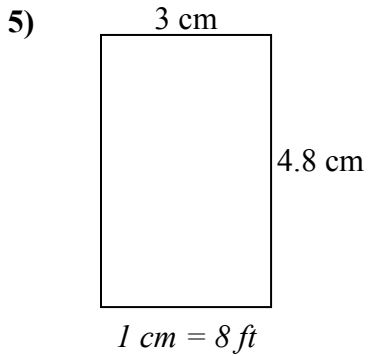
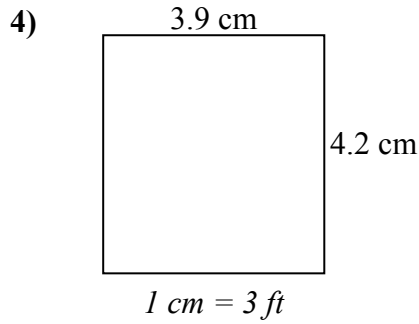
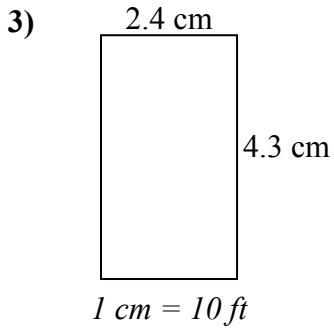
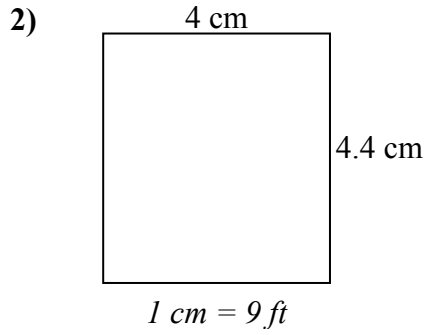
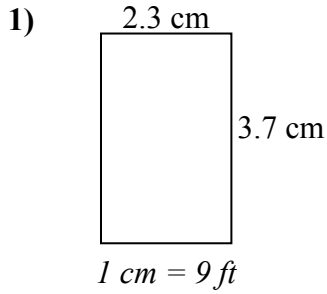




Определите актуальную ширину, высоту и площадь каждого прямоугольника.

Округлите площадь до целого числа.



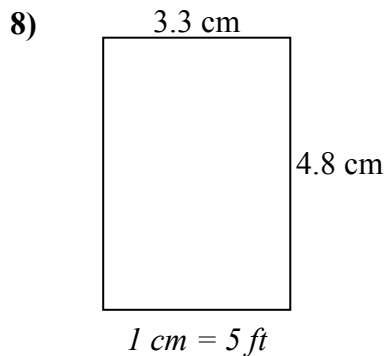
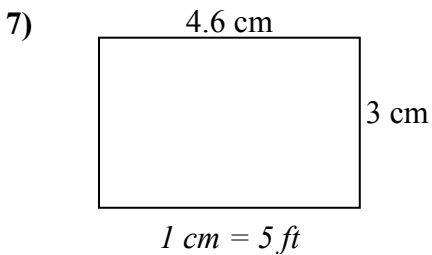
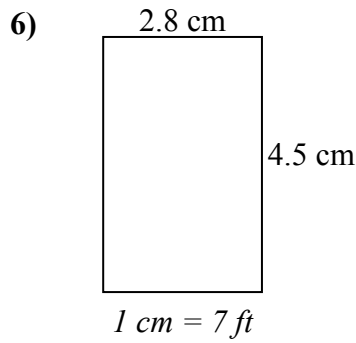
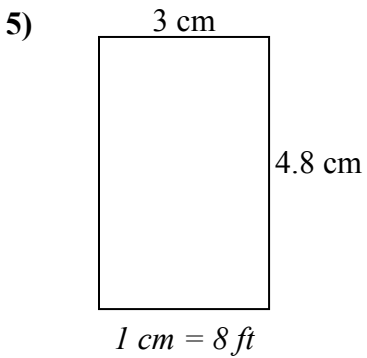
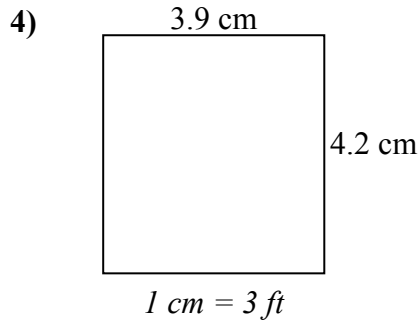
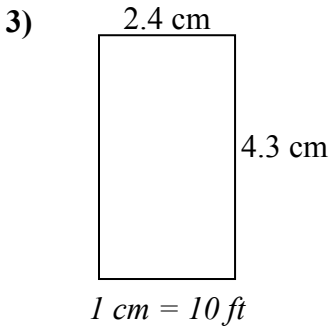
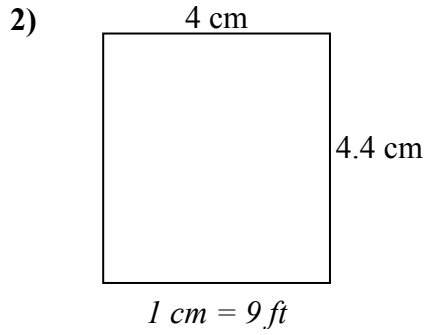
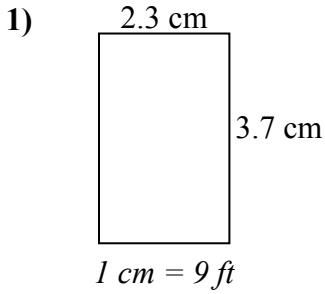
ОТВЕТЫ

1. _____
2. _____
3. _____
4. _____
5. _____
6. _____
7. _____
8. _____



Определите актуальную ширину, высоту и площадь каждого прямоугольника.

Округлите площадь до целого числа.



ОТВЕТЫ

| | | | |
|----|-------------|-------------|--------------|
| 1. | <u>20.7</u> | <u>33.3</u> | <u>689</u> |
| 2. | <u>36</u> | <u>39.6</u> | <u>1 426</u> |
| 3. | <u>24</u> | <u>43</u> | <u>1 032</u> |
| 4. | <u>11.7</u> | <u>12.6</u> | <u>147</u> |
| 5. | <u>24</u> | <u>38.4</u> | <u>922</u> |
| 6. | <u>19.6</u> | <u>31.5</u> | <u>617</u> |
| 7. | <u>23</u> | <u>15</u> | <u>345</u> |
| 8. | <u>16.5</u> | <u>24</u> | <u>396</u> |