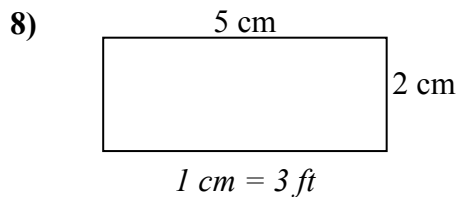
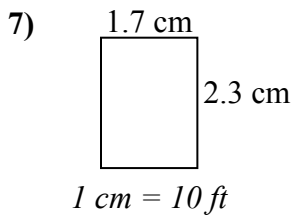
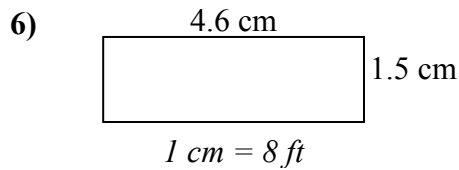
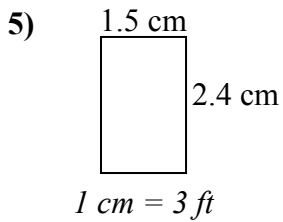
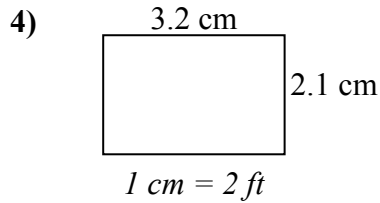
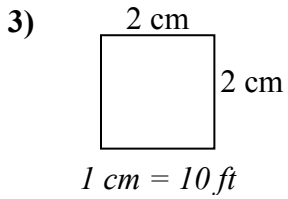
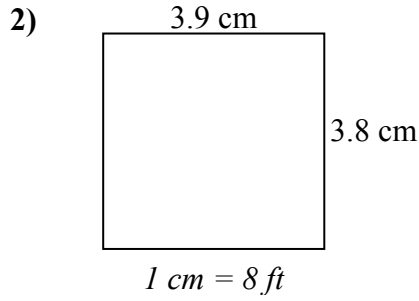
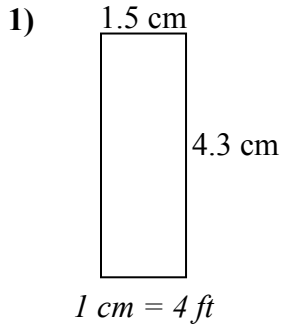




Определите актуальную ширину, высоту и площадь каждого прямоугольника.

Округлите площадь до целого числа.



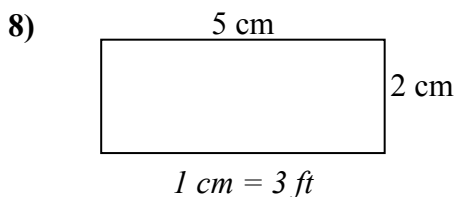
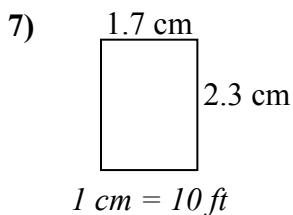
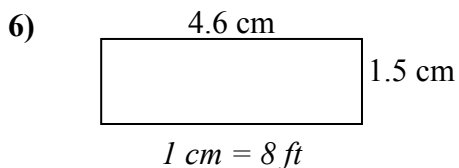
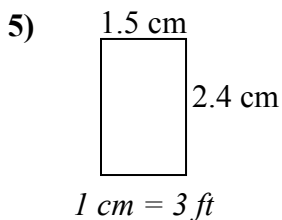
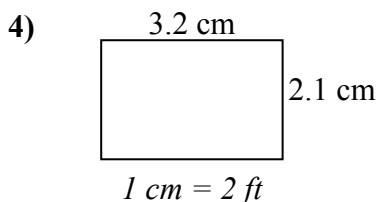
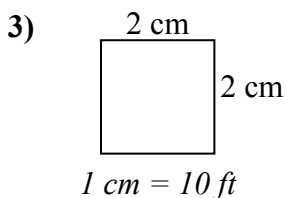
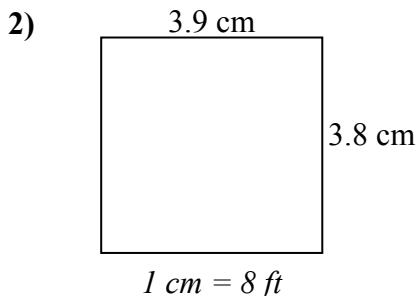
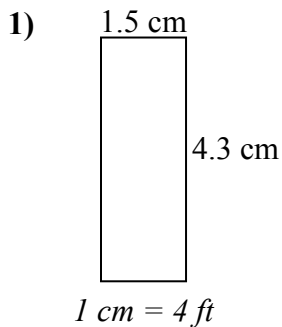
**ОТВЕТЫ**

1. \_\_\_\_\_
2. \_\_\_\_\_
3. \_\_\_\_\_
4. \_\_\_\_\_
5. \_\_\_\_\_
6. \_\_\_\_\_
7. \_\_\_\_\_
8. \_\_\_\_\_



Определите актуальную ширину, высоту и площадь каждого прямоугольника.

Округлите площадь до целого числа.



**ОТВЕТЫ**

1.	<u>6</u>	<u>17.2</u>	<u>103</u>
2.	<u>31.2</u>	<u>30.4</u>	<u>948</u>
3.	<u>20</u>	<u>20</u>	<u>400</u>
4.	<u>6.4</u>	<u>4.2</u>	<u>27</u>
5.	<u>4.5</u>	<u>7.2</u>	<u>32</u>
6.	<u>36.8</u>	<u>12</u>	<u>442</u>
7.	<u>17</u>	<u>23</u>	<u>391</u>
8.	<u>15</u>	<u>6</u>	<u>90</u>