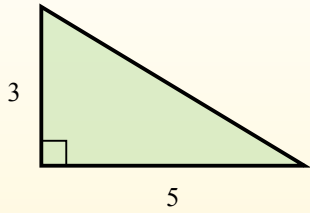


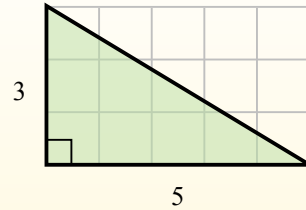


Найдите площадь каждого треугольника в блоках (b).

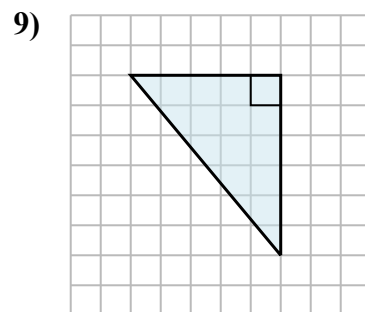
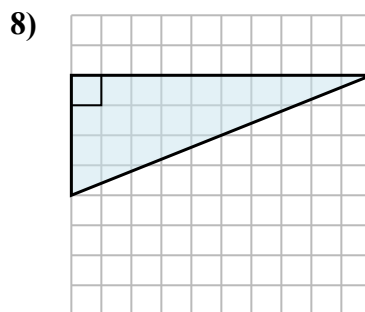
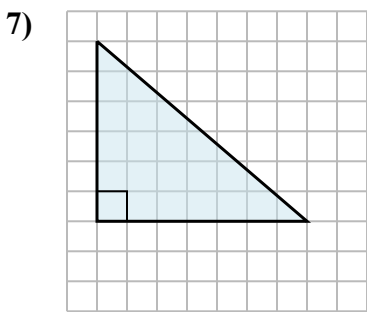
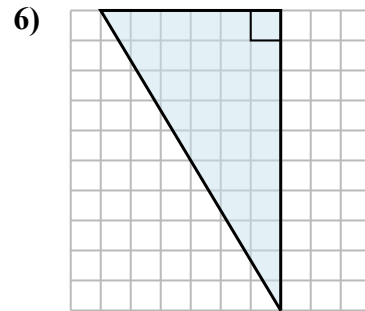
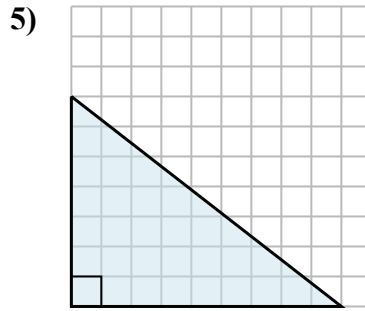
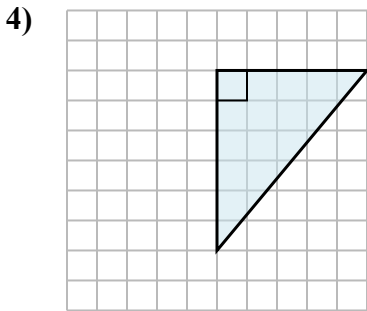
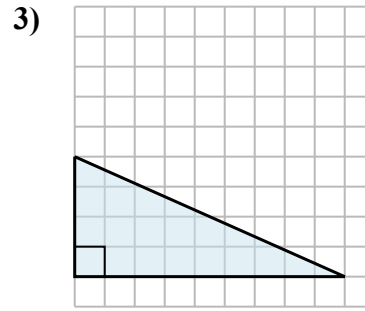
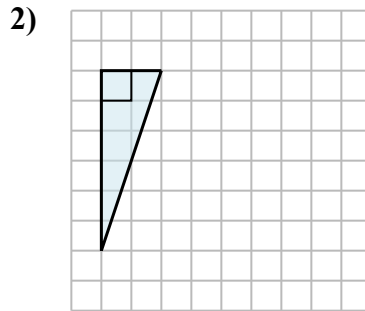
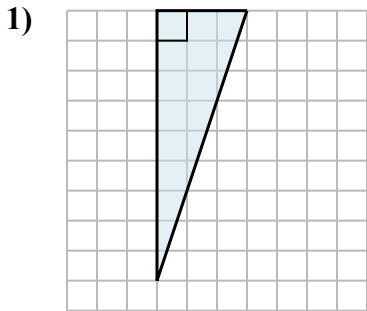
El área de un triángulo recto es la mitad del área del rectángulo que lo rodea.



En este ejemplo, el rectángulo circundante tendría un área de 15 bloques. ($15 b^2$).



La mitad de 15 es 7.5
Este triángulo recto tiene un área de $7.5 b^2$.



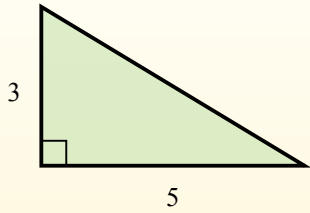
Ответы

1. _____
2. _____
3. _____
4. _____
5. _____
6. _____
7. _____
8. _____
9. _____

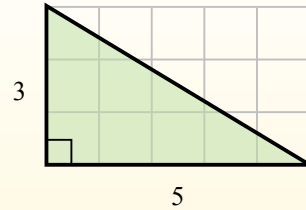


Найдите площадь каждого треугольника в блоках (b).

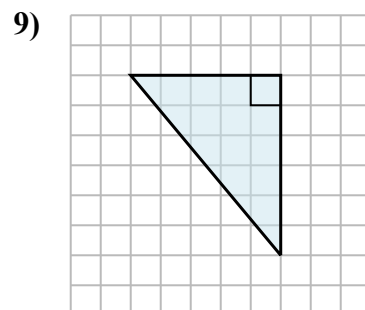
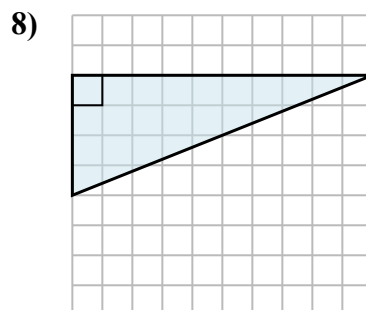
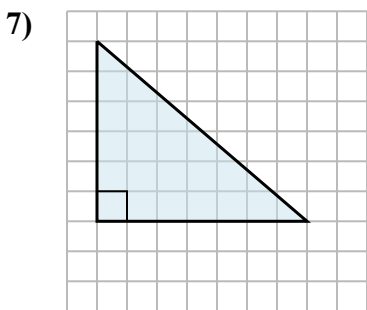
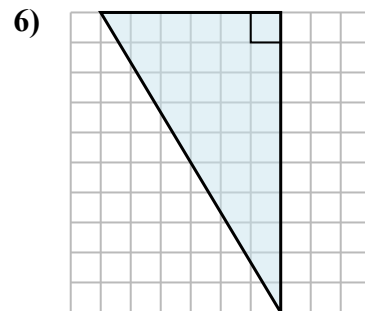
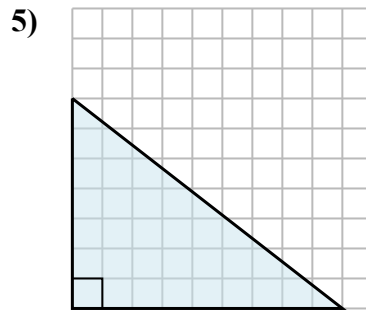
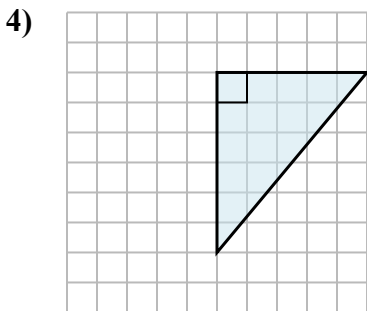
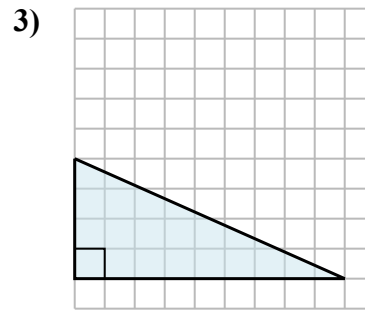
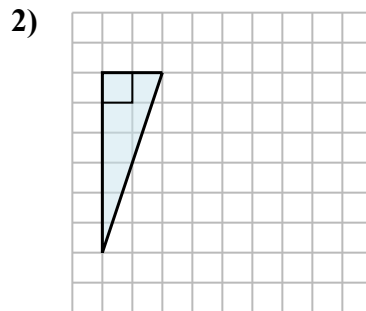
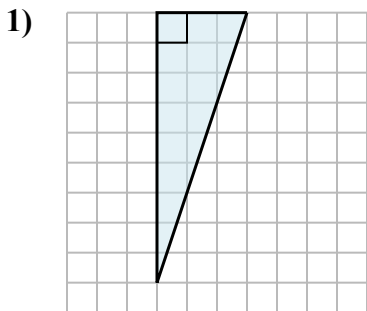
El área de un triángulo recto es la mitad del área del rectángulo que lo rodea.



En este ejemplo, el rectángulo circundante tendría un área de 15 bloques. ($15 b^2$).



La mitad de 15 es 7.5
Este triángulo recto tiene un área de $7.5 b^2$.

**ОТВЕТЫ**1. $13,5 b^2$ 2. $6 b^2$ 3. $18 b^2$ 4. $15 b^2$ 5. $31,5 b^2$ 6. $30 b^2$ 7. $21 b^2$ 8. $20 b^2$ 9. $15 b^2$