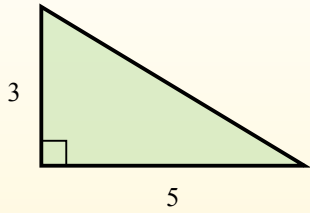


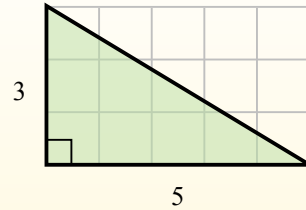


Найдите площадь каждого треугольника в блоках (b).

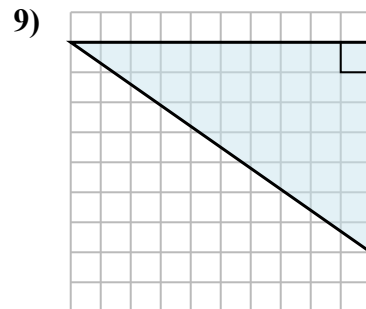
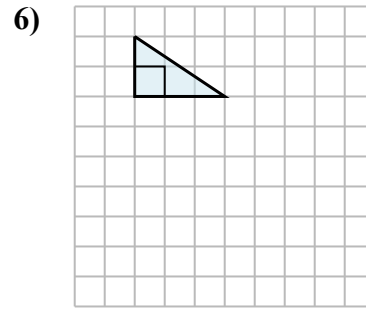
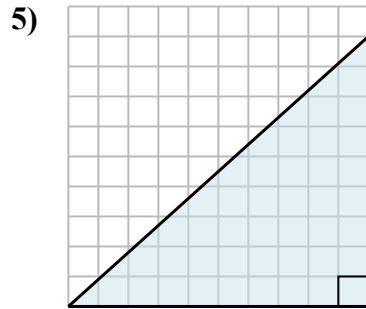
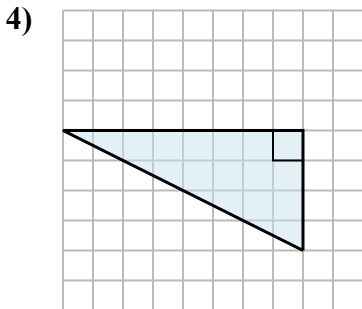
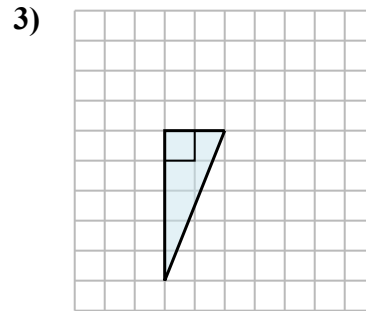
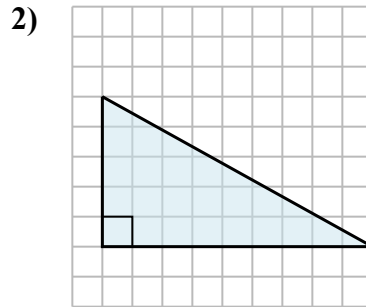
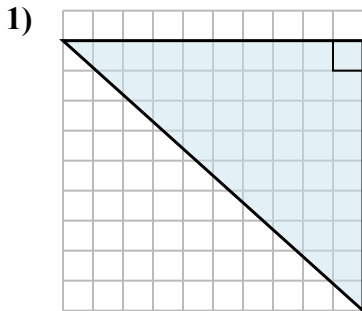
El área de un triángulo recto es la mitad del área del rectángulo que lo rodea.



En este ejemplo, el rectángulo circundante tendría un área de 15 bloques. ($15 b^2$).



La mitad de 15 es 7.5
Este triángulo recto tiene un área de $7.5 b^2$.



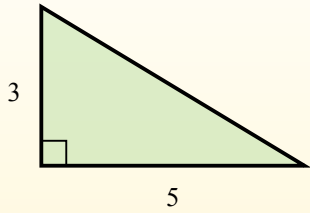
Ответы

1. _____
2. _____
3. _____
4. _____
5. _____
6. _____
7. _____
8. _____
9. _____

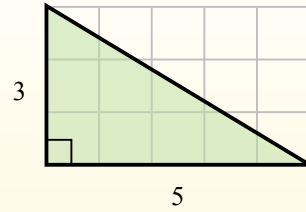


Найдите площадь каждого треугольника в блоках (b).

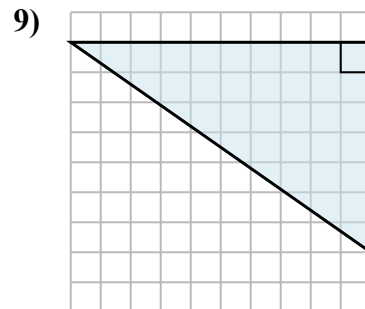
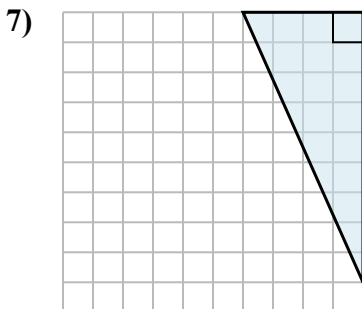
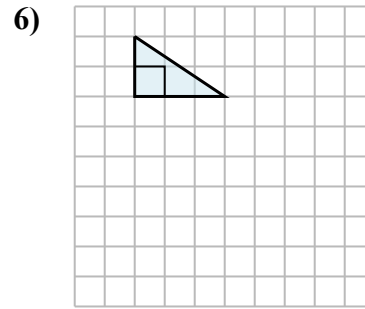
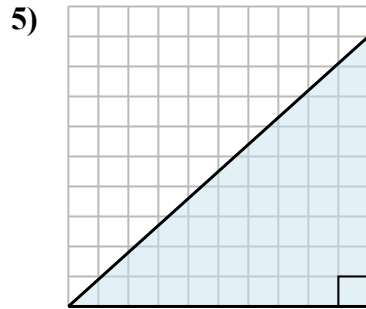
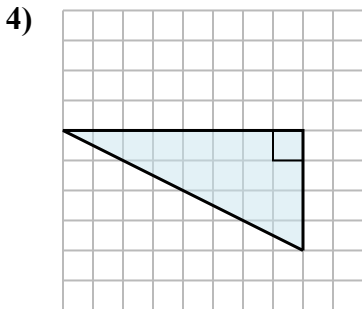
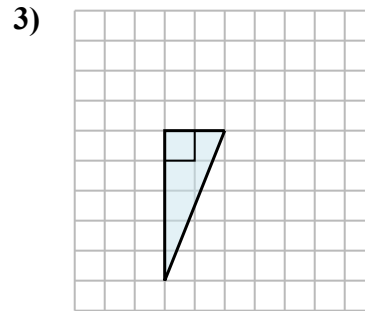
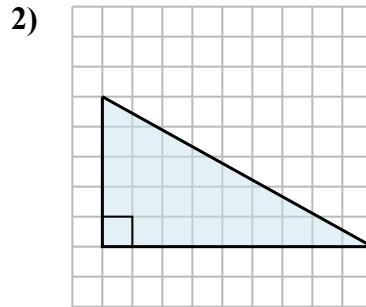
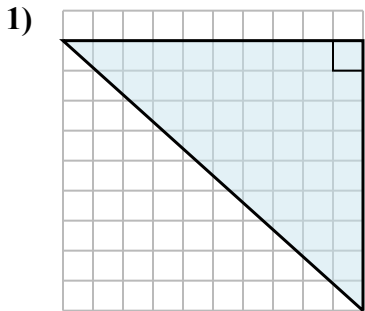
El área de un triángulo recto es la mitad del área del rectángulo que lo rodea.



En este ejemplo, el rectángulo circundante tendría un área de 15 bloques. ($15 b^2$).



La mitad de 15 es 7.5
Este triángulo recto tiene un área de $7.5 b^2$.

**Ответы**

1. $45 b^2$
2. $22,5 b^2$
3. $5 b^2$
4. $16 b^2$
5. $45 b^2$
6. $3 b^2$
7. $18 b^2$
8. $15 b^2$
9. $35 b^2$