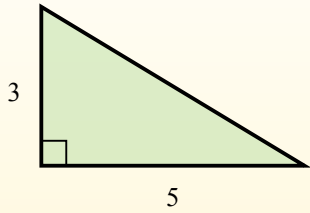


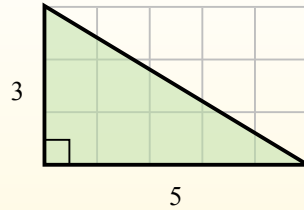


Найдите площадь каждого треугольника в блоках (b).

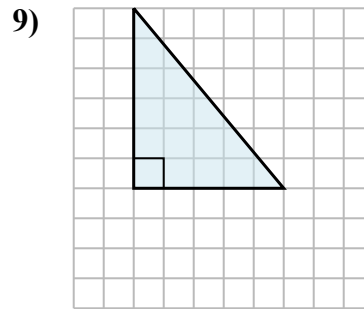
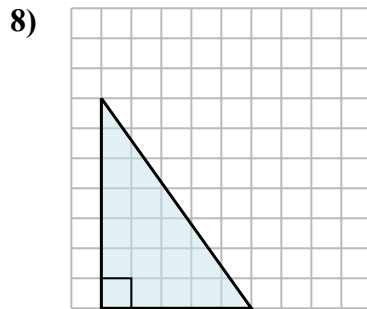
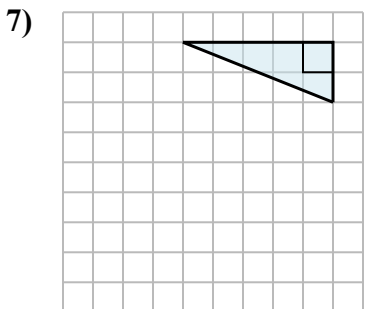
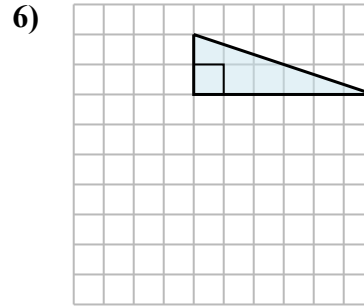
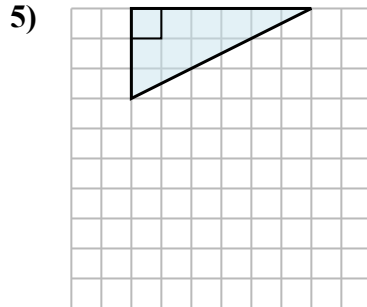
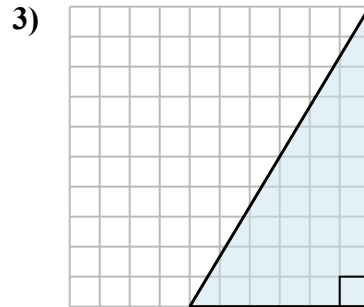
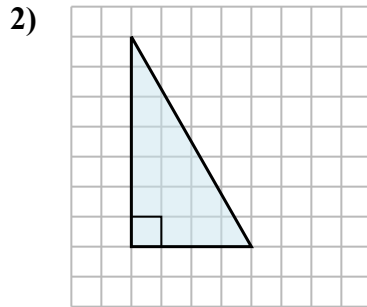
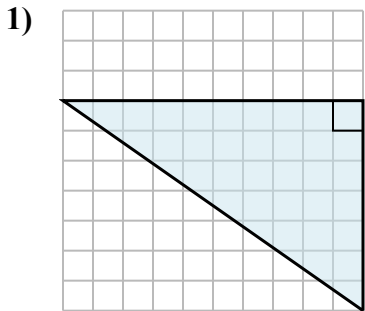
El área de un triángulo recto es la mitad del área del rectángulo que lo rodea.



En este ejemplo, el rectángulo circundante tendría un área de 15 bloques. ( $15 b^2$ ).



La mitad de 15 es 7.5  
Este triángulo recto tiene un área de  $7.5 b^2$ .



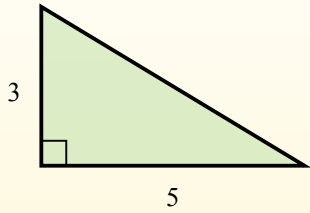
**Ответы**

1. \_\_\_\_\_
2. \_\_\_\_\_
3. \_\_\_\_\_
4. \_\_\_\_\_
5. \_\_\_\_\_
6. \_\_\_\_\_
7. \_\_\_\_\_
8. \_\_\_\_\_
9. \_\_\_\_\_

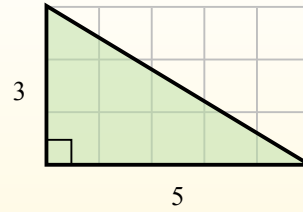


Найдите площадь каждого треугольника в блоках (b).

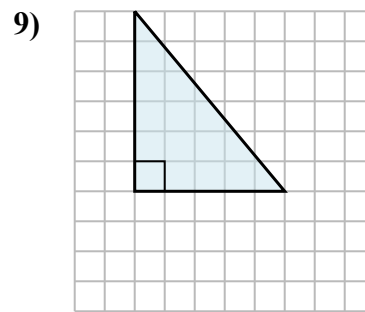
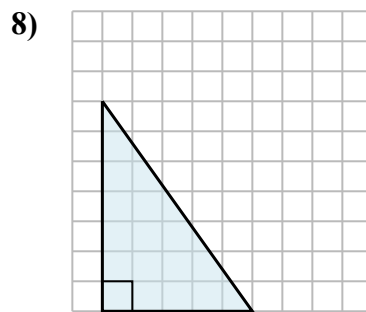
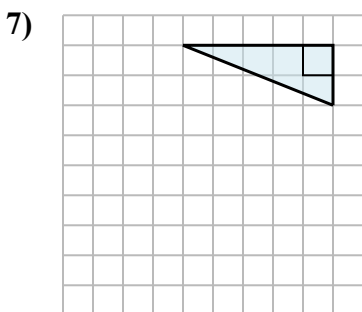
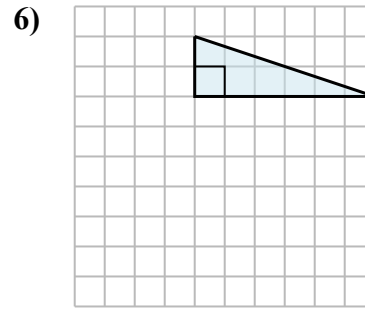
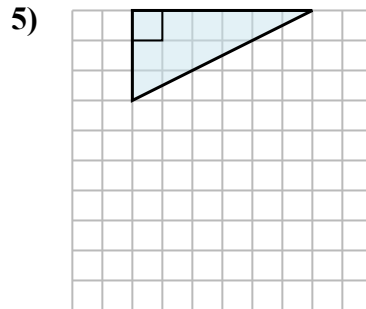
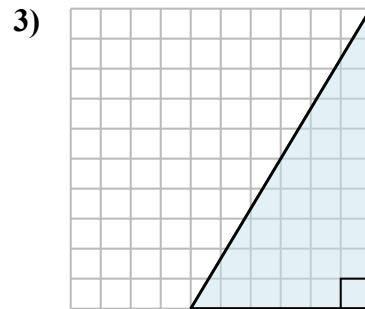
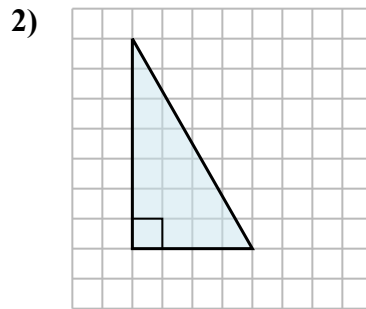
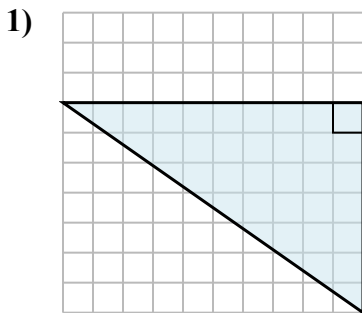
El área de un triángulo recto es la mitad del área del rectángulo que lo rodea.



En este ejemplo, el rectángulo circundante tendría un área de 15 bloques. ( $15 b^2$ ).



La mitad de 15 es 7.5  
Este triángulo recto tiene un área de  $7.5 b^2$ .

**ОТВЕТЫ**

1.  $35 b^2$
2.  $14 b^2$
3.  $30 b^2$
4.  $8 b^2$
5.  $9 b^2$
6.  $6 b^2$
7.  $5 b^2$
8.  $17,5 b^2$
9.  $15 b^2$