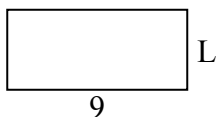


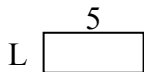


Определите значение 'L'

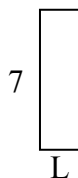
1) Площадь =  $36u^2$



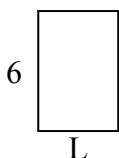
2) Площадь =  $10u^2$



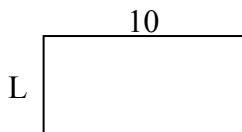
3) Площадь =  $14u^2$



4) Площадь =  $24u^2$



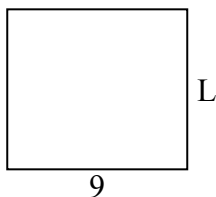
5) Площадь =  $50u^2$



6) Площадь =  $6u^2$




7) Площадь =  $72u^2$



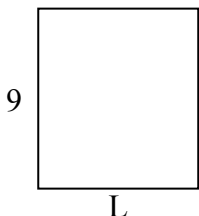
8) Площадь =  $27u^2$



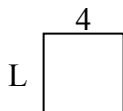
9) Площадь =  $70u^2$



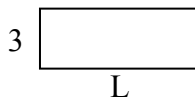
10) Площадь =  $72u^2$




11) Площадь =  $16u^2$



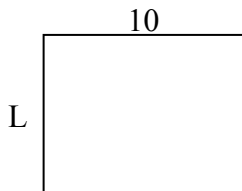
12) Площадь =  $24u^2$



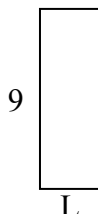
13) Площадь =  $14u^2$



14) Площадь =  $80u^2$



15) Площадь =  $27u^2$



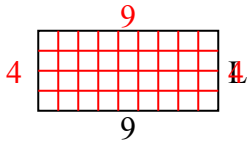
**ОТВЕТЫ**

1. \_\_\_\_\_
2. \_\_\_\_\_
3. \_\_\_\_\_
4. \_\_\_\_\_
5. \_\_\_\_\_
6. \_\_\_\_\_
7. \_\_\_\_\_
8. \_\_\_\_\_
9. \_\_\_\_\_
10. \_\_\_\_\_
11. \_\_\_\_\_
12. \_\_\_\_\_
13. \_\_\_\_\_
14. \_\_\_\_\_
15. \_\_\_\_\_

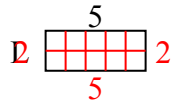


Определите значение 'L'

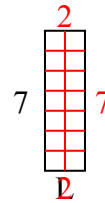
1) Площадь =  $36u^2$



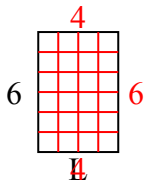
2) Площадь =  $10u^2$



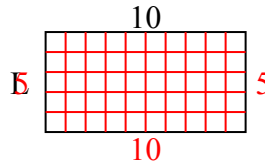
3) Площадь =  $14u^2$



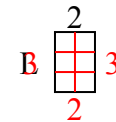
4) Площадь =  $24u^2$



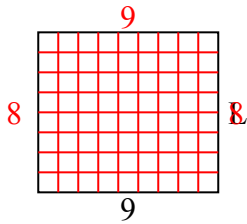
5) Площадь =  $50u^2$



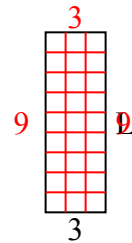
6) Площадь =  $6u^2$



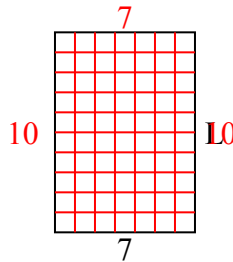
7) Площадь =  $72u^2$



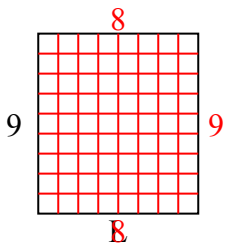
8) Площадь =  $27u^2$



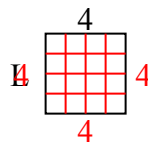
9) Площадь =  $70u^2$



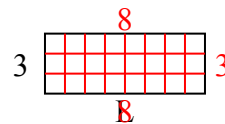
10) Площадь =  $72u^2$



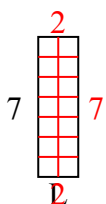
11) Площадь =  $16u^2$



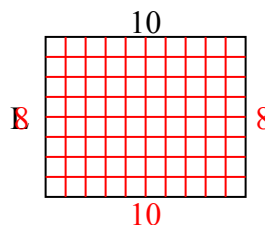
12) Площадь =  $24u^2$



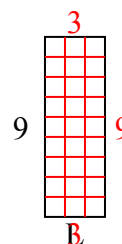
13) Площадь =  $14u^2$



14) Площадь =  $80u^2$



15) Площадь =  $27u^2$



**ОТВЕТЫ**

1. 4

2. 2

3. 2

4. 4

5. 5

6. 3

7. 8

8. 9

9. 10

10. 8

11. 4

12. 8

13. 2

14. 8

15. 3