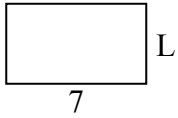




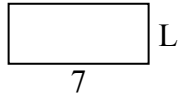
Определите значение 'L'

ОТВЕТЫ

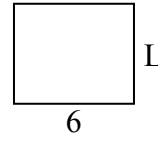
1) Площадь = $28u^2$



2) Площадь = $21u^2$



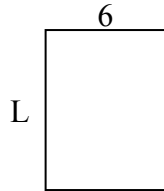
3) Площадь = $30u^2$



4) Площадь = $12u^2$




5) Площадь = $48u^2$



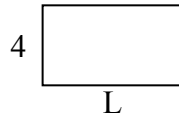
6) Площадь = $6u^2$



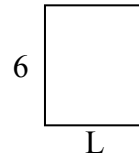
7) Площадь = $18u^2$



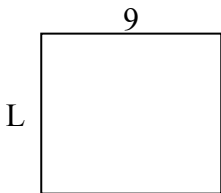
8) Площадь = $28u^2$



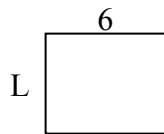
9) Площадь = $30u^2$



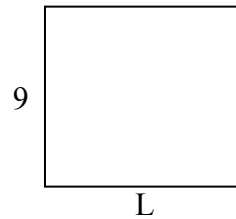
10) Площадь = $72u^2$



11) Площадь = $30u^2$



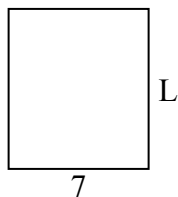
12) Площадь = $90u^2$



13) Площадь = $30u^2$



14) Площадь = $56u^2$



15) Площадь = $54u^2$

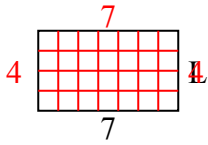


1. _____
2. _____
3. _____
4. _____
5. _____
6. _____
7. _____
8. _____
9. _____
10. _____
11. _____
12. _____
13. _____
14. _____
15. _____

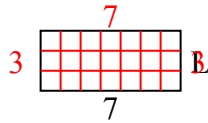


Определите значение 'L'

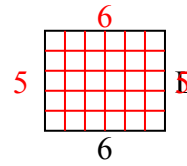
1) Площадь = $28u^2$



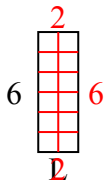
2) Площадь = $21u^2$



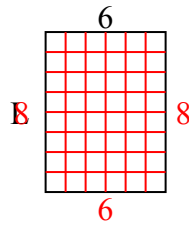
3) Площадь = $30u^2$



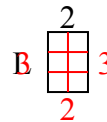
4) Площадь = $12u^2$



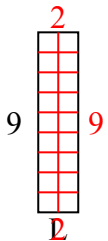
5) Площадь = $48u^2$



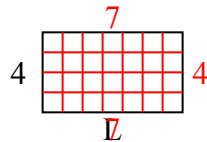
6) Площадь = $6u^2$



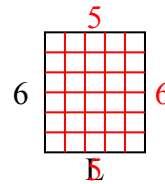
7) Площадь = $18u^2$



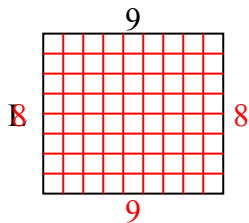
8) Площадь = $28u^2$



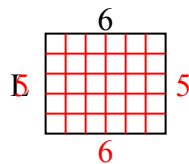
9) Площадь = $30u^2$



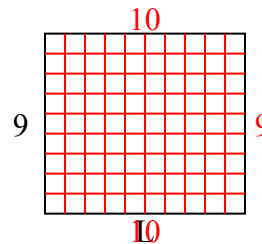
10) Площадь = $72u^2$



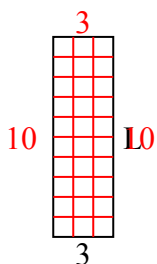
11) Площадь = $30u^2$



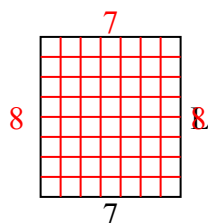
12) Площадь = $90u^2$



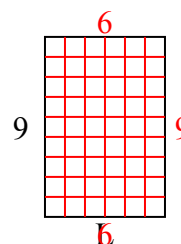
13) Площадь = $30u^2$



14) Площадь = $56u^2$



15) Площадь = $54u^2$



ОТВЕТЫ

1. 4

2. 3

3. 5

4. 2

5. 8

6. 3

7. 2

8. 7

9. 5

10. 8

11. 5

12. 10

13. 10

14. 8

15. 6