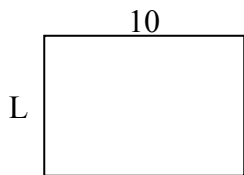


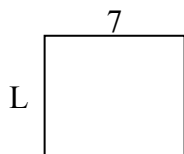


Определите значение 'P'


1) Периметр = 34



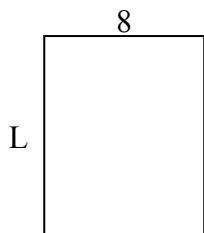
2) Периметр = 26



3) Периметр = 18



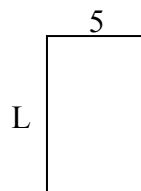
4) Периметр = 36



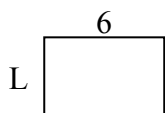
5) Периметр = 18




6) Периметр = 26



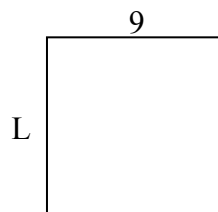
7) Периметр = 20



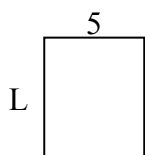
8) Периметр = 32



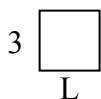
9) Периметр = 36



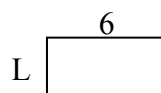
10) Периметр = 22



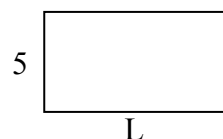
11) Периметр = 12



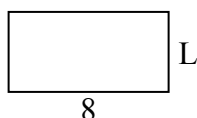
12) Периметр = 18



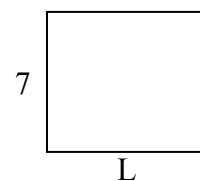
13) Периметр = 28



14) Периметр = 24



15) Периметр = 30



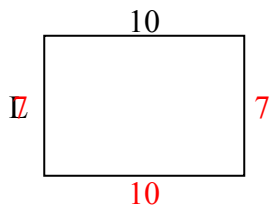
ОТВЕТЫ

1. _____
2. _____
3. _____
4. _____
5. _____
6. _____
7. _____
8. _____
9. _____
10. _____
11. _____
12. _____
13. _____
14. _____
15. _____

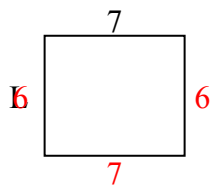


Определите значение 'P'

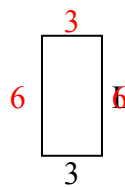
1) Периметр = 34



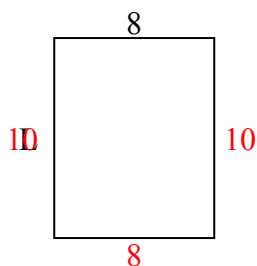
2) Периметр = 26



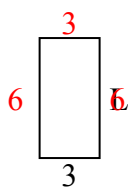
3) Периметр = 18



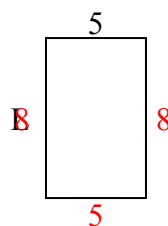
4) Периметр = 36



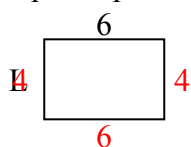
5) Периметр = 18



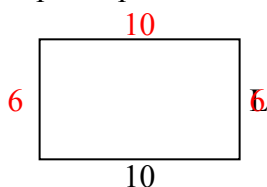
6) Периметр = 26



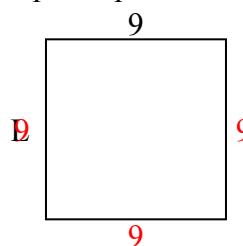
7) Периметр = 20



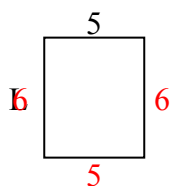
8) Периметр = 32



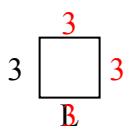
9) Периметр = 36



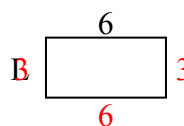
10) Периметр = 22



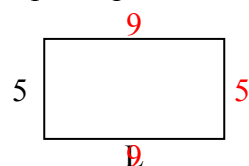
11) Периметр = 12



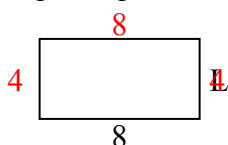
12) Периметр = 18



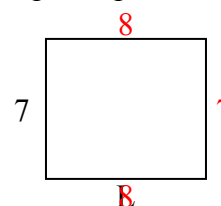
13) Периметр = 28



14) Периметр = 24



15) Периметр = 30



ОТВЕТЫ

1. 7 cm

2. 6 cm

3. 6 cm

4. 10 cm

5. 6 cm

6. 8 cm

7. 4 cm

8. 6 cm

9. 9 cm

10. 6 cm

11. 3 cm

12. 3 cm

13. 9 cm

14. 4 cm

15. 8 cm