




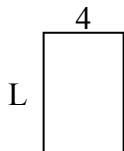
Определите значение 'P'

ОТВЕТЫ

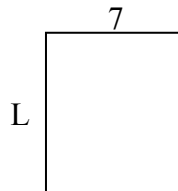
1) Периметр = 26



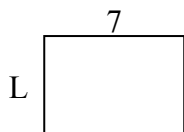
2) Периметр = 20



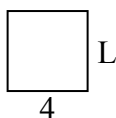
3) Периметр = 30



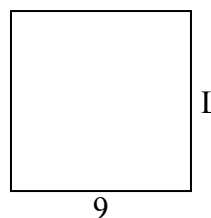
4) Периметр = 24



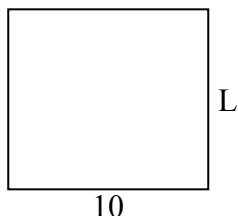
5) Периметр = 16



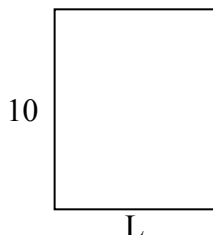
6) Периметр = 36



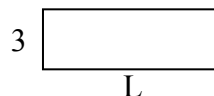
7) Периметр = 38




8) Периметр = 36



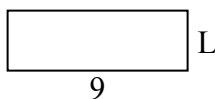
9) Периметр = 24



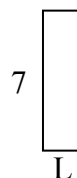
10) Периметр = 24



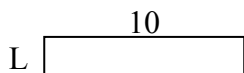
11) Периметр = 24



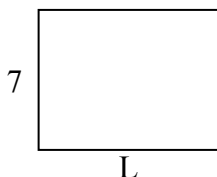
12) Периметр = 18



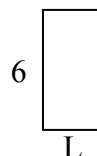
13) Периметр = 24



14) Периметр = 32



15) Периметр = 18




1. _____
2. _____
3. _____
4. _____
5. _____
6. _____
7. _____
8. _____
9. _____
10. _____
11. _____
12. _____
13. _____
14. _____
15. _____

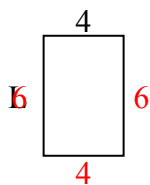


Определите значение 'P'

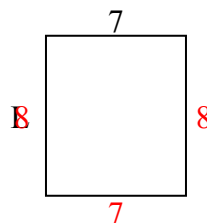
1) Периметр = 26



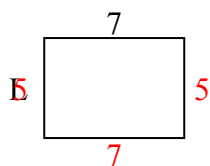
2) Периметр = 20



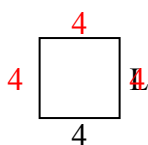
3) Периметр = 30



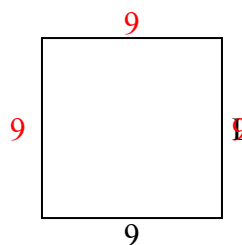
4) Периметр = 24



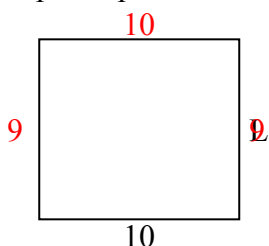
5) Периметр = 16



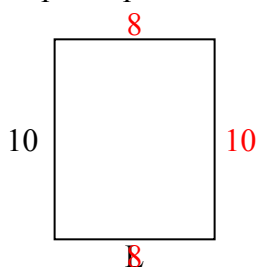
6) Периметр = 36



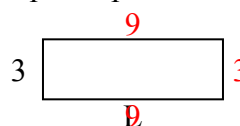
7) Периметр = 38



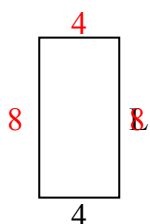
8) Периметр = 36



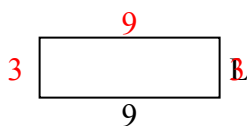
9) Периметр = 24



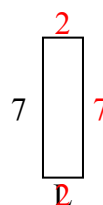
10) Периметр = 24



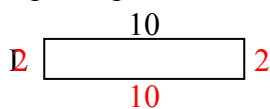
11) Периметр = 24



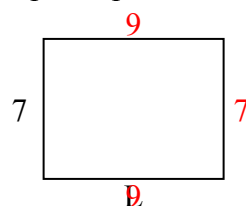
12) Периметр = 18



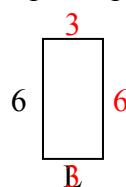
13) Периметр = 24



14) Периметр = 32



15) Периметр = 18



ОТВЕТЫ

1. 3 cm

2. 6 cm

3. 8 cm

4. 5 cm

5. 4 cm

6. 9 cm

7. 9 cm

8. 8 cm

9. 9 cm

10. 8 cm

11. 3 cm

12. 2 cm

13. 2 cm

14. 9 cm

15. 3 cm