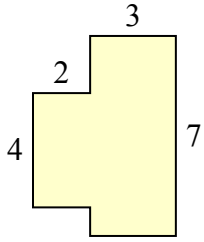


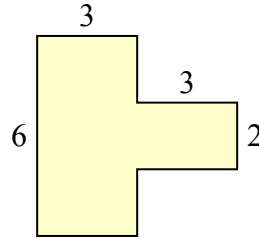


Определите общую площадь фигуры. Измерения в миллиметрах. Не шкала.

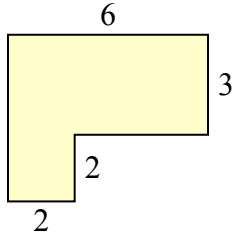
1)



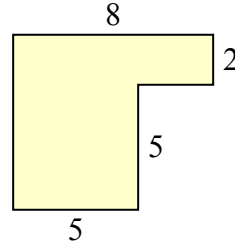
2)



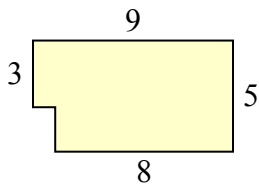
3)



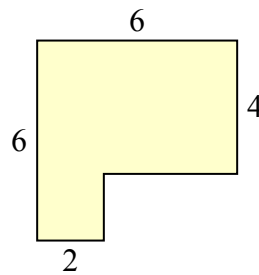
4)



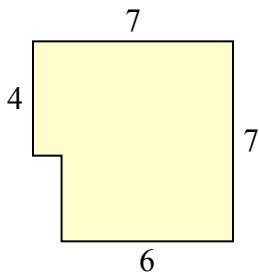
5)



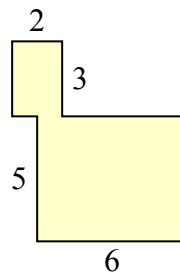
6)



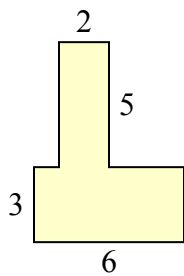
7)



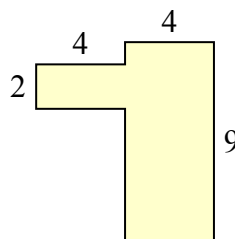
8)



9)



10)

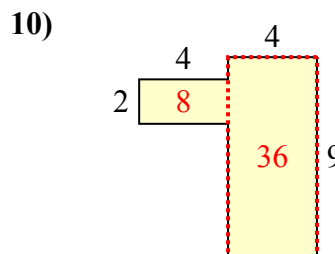
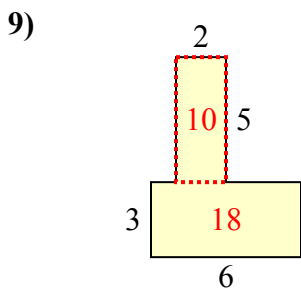
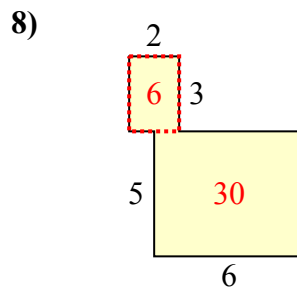
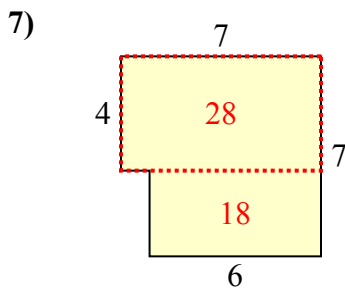
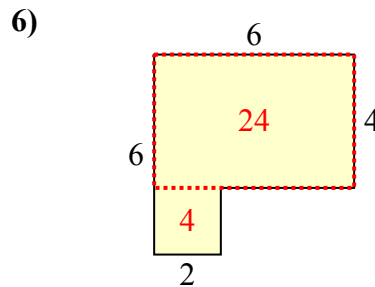
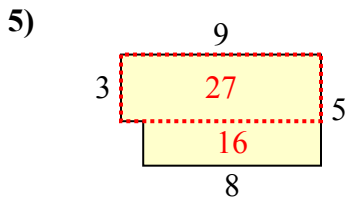
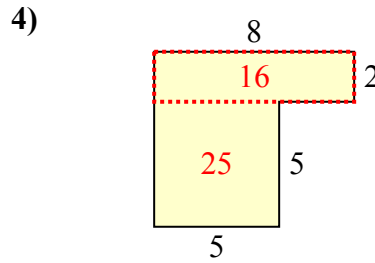
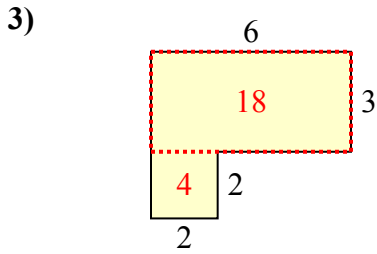
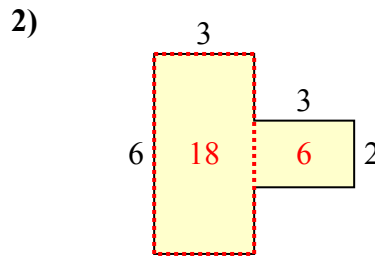
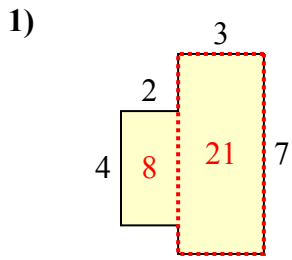


ОТВЕТЫ

1. _____
2. _____
3. _____
4. _____
5. _____
6. _____
7. _____
8. _____
9. _____
10. _____



Определите общую площадь фигуры. Измерения в миллиметрах. Не шкала.



ОТВЕТЫ

1. 29 mm²
2. 24 mm²
3. 22 mm²
4. 41 mm²
5. 43 mm²
6. 28 mm²
7. 46 mm²
8. 36 mm²
9. 28 mm²
10. 44 mm²