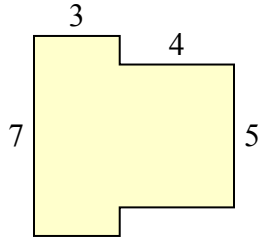


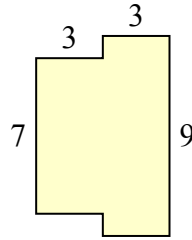


Определите общую площадь фигуры. Измерения в миллиметрах. Не шкала.

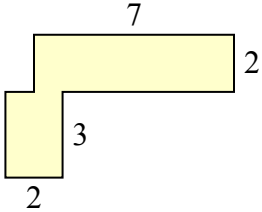
1)



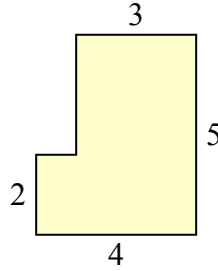
2)



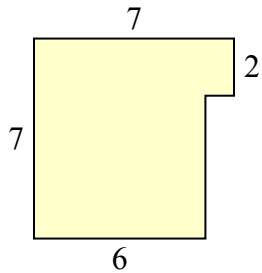
3)



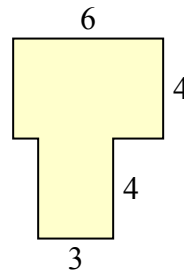
4)



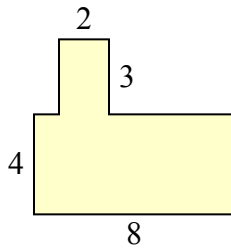
5)



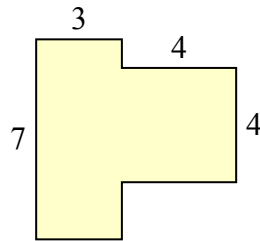
6)



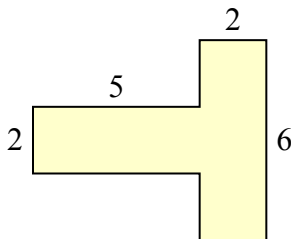
7)



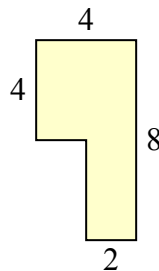
8)



9)



10)



Ответы

1. _____

2. _____

3. _____

4. _____

5. _____

6. _____

7. _____

8. _____

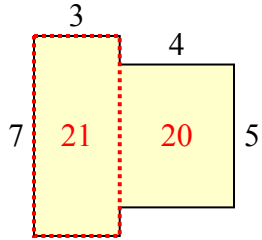
9. _____

10. _____

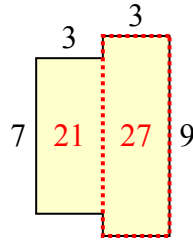


Определите общую площадь фигуры. Измерения в миллиметрах. Не шкала.

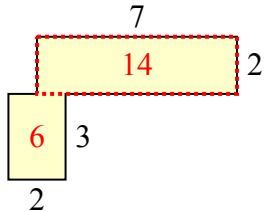
1)



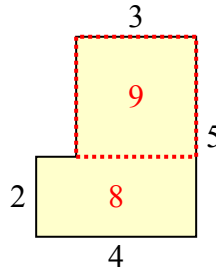
2)



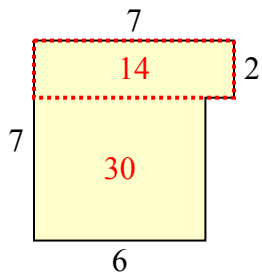
3)



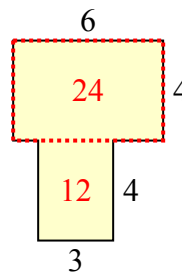
4)



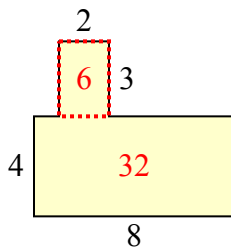
5)



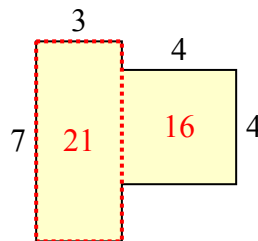
6)



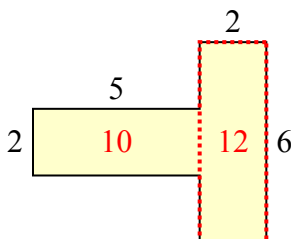
7)



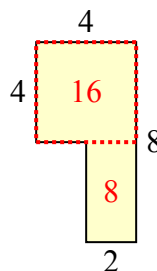
8)



9)



10)



ОТВЕТЫ

1. 41 mm²
2. 48 mm²
3. 20 mm²
4. 17 mm²
5. 44 mm²
6. 36 mm²
7. 38 mm²
8. 37 mm²
9. 22 mm²
10. 24 mm²