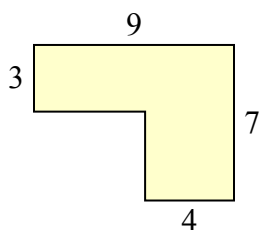




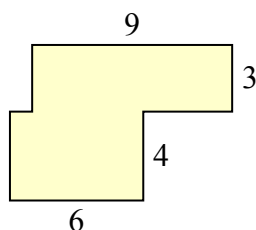
Определите общую площадь фигуры. Измерения в миллиметрах. Не шкала.

Ответы

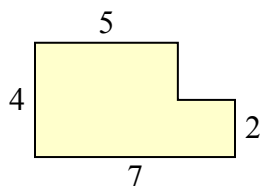
1)



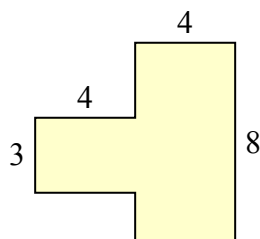
2)



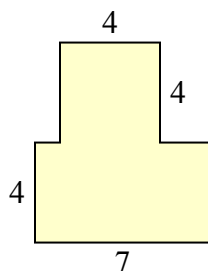
3)



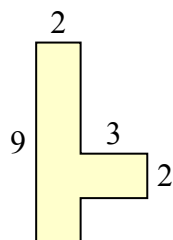
4)



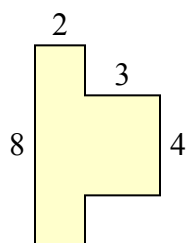
5)



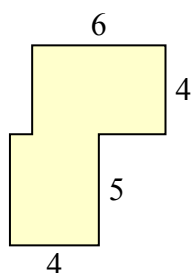
6)



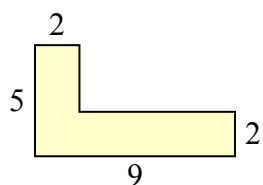
7)



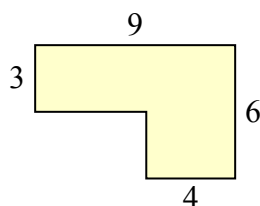
8)



9)



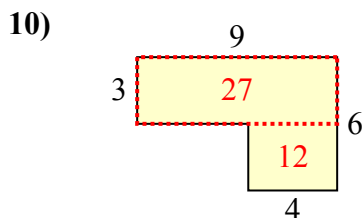
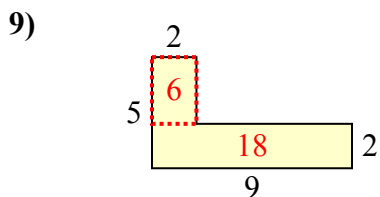
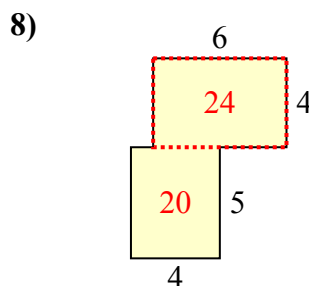
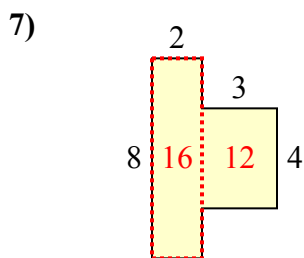
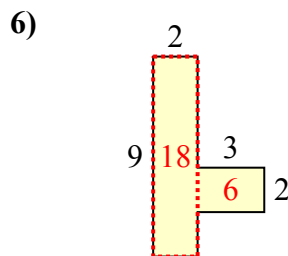
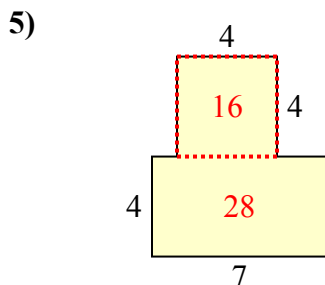
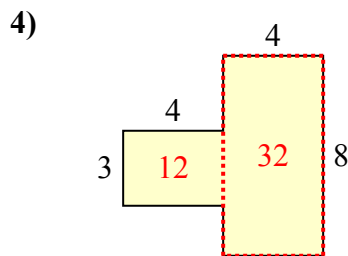
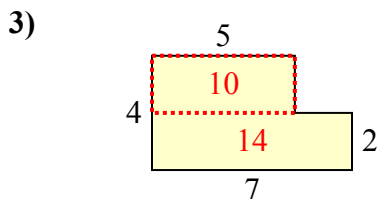
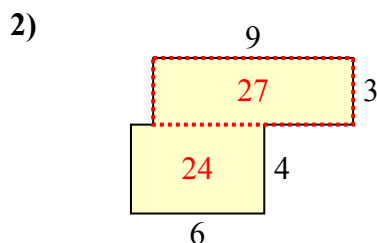
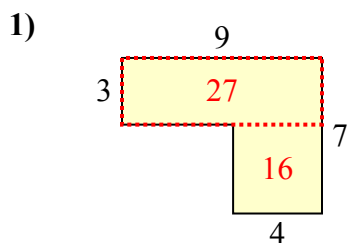
10)



1. _____
2. _____
3. _____
4. _____
5. _____
6. _____
7. _____
8. _____
9. _____
10. _____



Определите общую площадь фигуры. Измерения в миллиметрах. Не шкала.

**Отвѣты**

1. **43 mm²**
2. **51 mm²**
3. **24 mm²**
4. **44 mm²**
5. **44 mm²**
6. **24 mm²**
7. **28 mm²**
8. **44 mm²**
9. **24 mm²**
10. **39 mm²**