
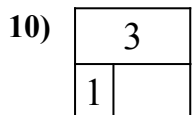
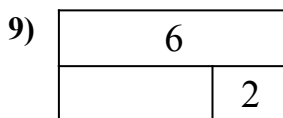
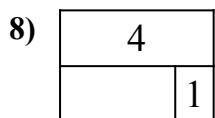
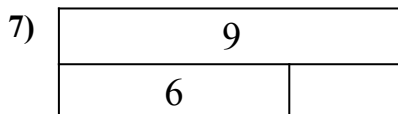
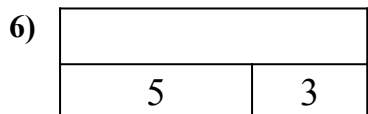
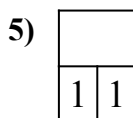
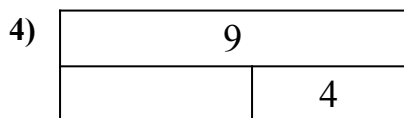

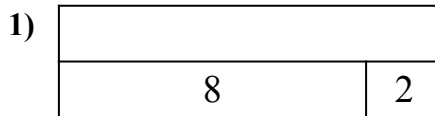
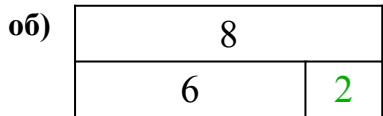




Определите число, которое нужно вставить в данную фигуру.



Ответы

об. 2

1. _____

2. _____

3. _____

4. _____

5. _____

6. _____

7. _____

8. _____

9. _____

10. _____

11. _____