





Решите каждую задачу.


1) $84\,635 + 7\,993 =$




2) $27\,053 + 1\,202 =$



3) $25\,491 + 11\,215 =$



4) $61\,077 + 35\,185 =$



5) $39\,050 + 33\,499 =$



6) $62\,588 + 34\,361 =$



7) $17\,643 + 320 =$



8) $18\,776 + 17\,487 =$



Отвeты

1. _____

2. _____

3. _____

4. _____

5. _____

6. _____

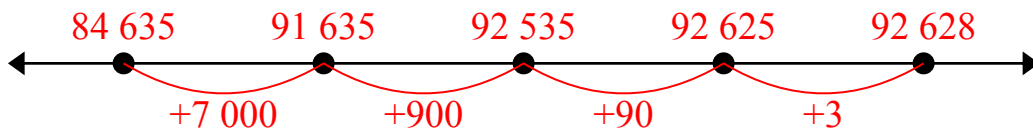
7. _____

8. _____

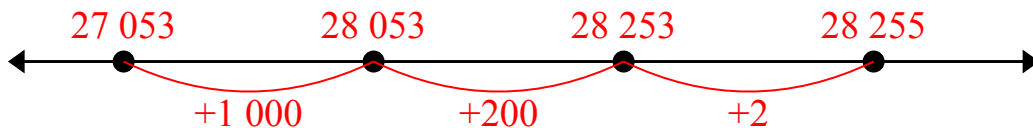


Решите каждую задачу.

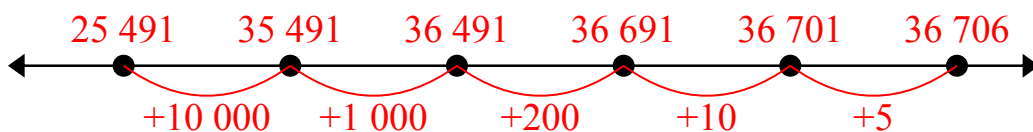
1) $84\,635 + 7\,993 =$



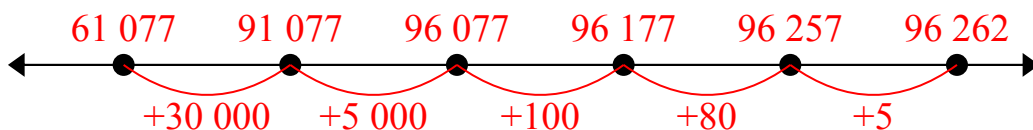
2) $27\,053 + 1\,202 =$



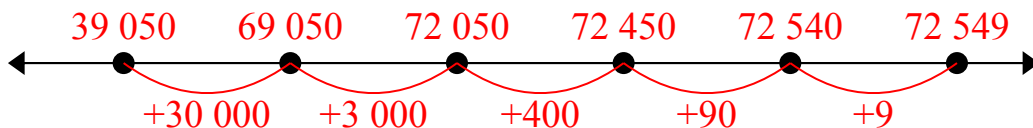
3) $25\,491 + 11\,215 =$



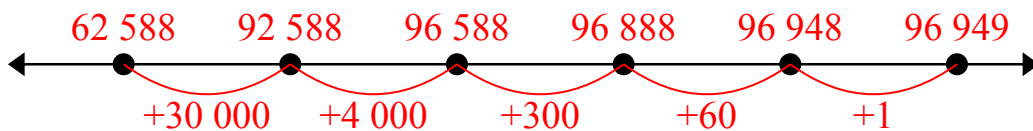
4) $61\,077 + 35\,185 =$



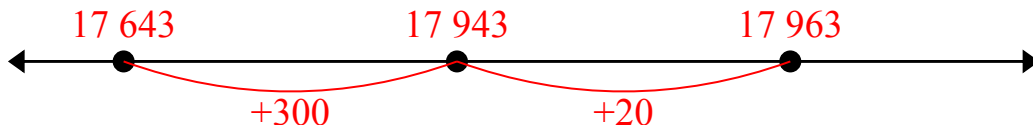
5) $39\,050 + 33\,499 =$



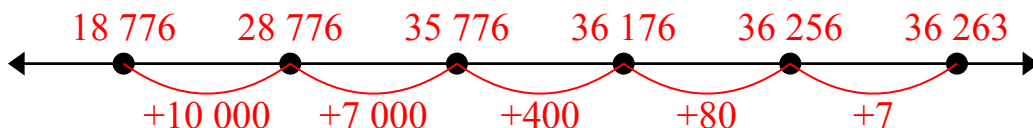
6) $62\,588 + 34\,361 =$



7) $17\,643 + 320 =$



8) $18\,776 + 17\,487 =$

**Ответы**1. 92 6282. 28 2553. 36 7064. 96 2625. 72 5496. 96 9497. 17 9638. 36 263