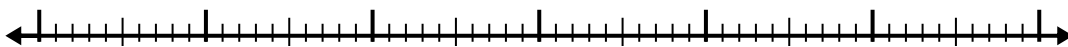


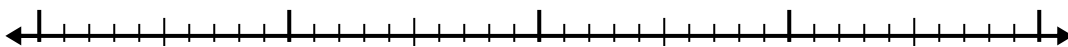


Используйте числовую линию для решения каждой проблемы.


1)  $2.1 + 3.4 =$




2)  $2.5 + 2.1 =$




3)  $6.9 + 1.2 =$



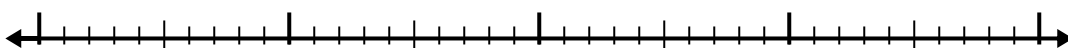
4)  $6.8 + 1.3 =$



5)  $7.1 + 1.8 =$



6)  $3.8 + 2.1 =$




7)  $7.2 + 2.1 =$



8)  $6 + 1.8 =$



9)  $4.5 + 1.1 =$



10)  $3.3 + 2.7 =$



Ответы

1. \_\_\_\_\_

2. \_\_\_\_\_

3. \_\_\_\_\_

4. \_\_\_\_\_

5. \_\_\_\_\_

6. \_\_\_\_\_

7. \_\_\_\_\_

8. \_\_\_\_\_

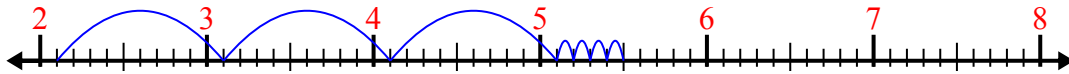
9. \_\_\_\_\_

10. \_\_\_\_\_

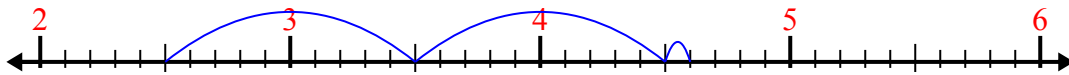


Используйте числовую линию для решения каждой проблемы.

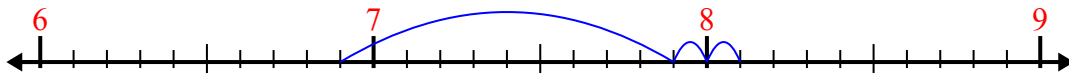
1)  $2.1 + 3.4 =$



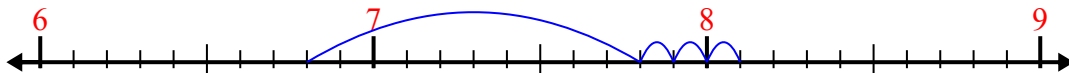
2)  $2.5 + 2.1 =$



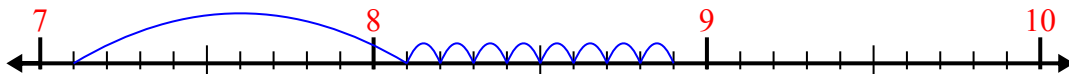
3)  $6.9 + 1.2 =$



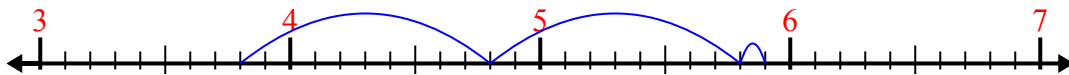
4)  $6.8 + 1.3 =$



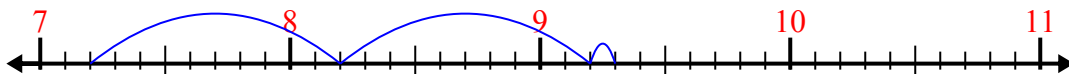
5)  $7.1 + 1.8 =$



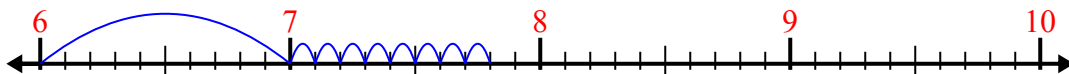
6)  $3.8 + 2.1 =$



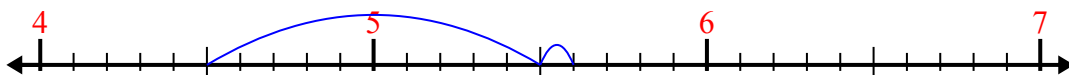
7)  $7.2 + 2.1 =$



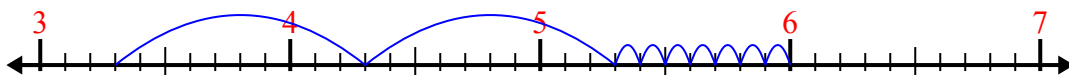
8)  $6 + 1.8 =$



9)  $4.5 + 1.1 =$



10)  $3.3 + 2.7 =$



**ОТВЕТЫ**

1. 5,5
2. 4,6
3. 8,1
4. 8,1
5. 8,9
6. 5,9
7. 9,3
8. 7,8
9. 5,6
10. 6,0