




Используйте числовую линию для решения каждой проблемы.

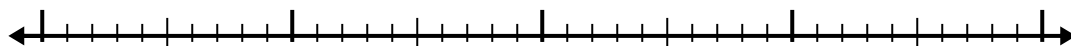
Отвѣты

1) $2.7 + 3.1 =$



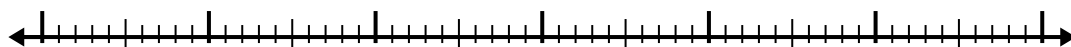
1. _____

2) $5.1 + 2.3 =$



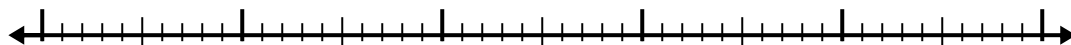
2. _____

3) $7.2 + 3.1 =$



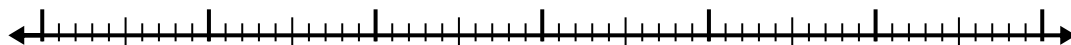
3. _____

4) $3.2 + 3.7 =$



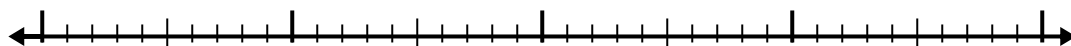
4. _____

5) $7.6 + 3.6 =$



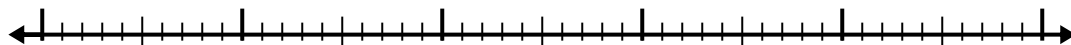
5. _____

6) $1.8 + 2.7 =$




6. _____

7) $1.7 + 2.4 =$



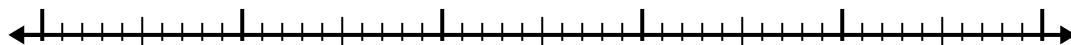
7. _____

8) $8.8 + 3.6 =$



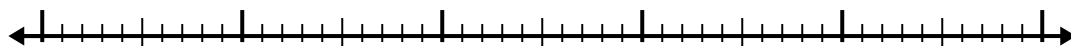
8. _____

9) $8.9 + 2.6 =$



9. _____

10) $5.3 + 3.9 =$

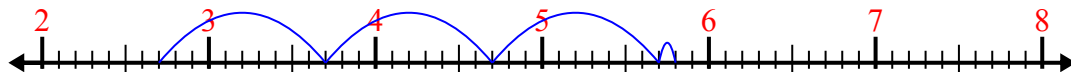


10. _____

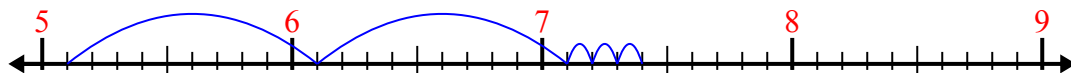


Используйте числовую линию для решения каждой проблемы.

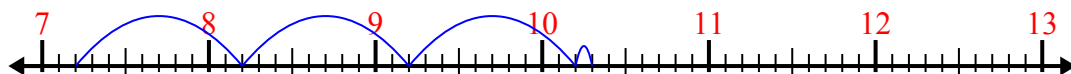
1) $2.7 + 3.1 =$



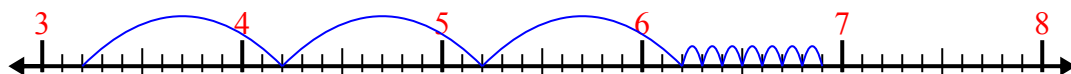
2) $5.1 + 2.3 =$



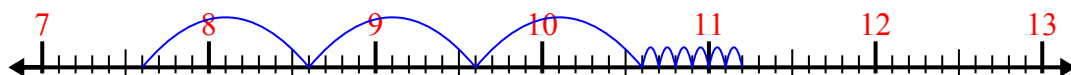
3) $7.2 + 3.1 =$



4) $3.2 + 3.7 =$



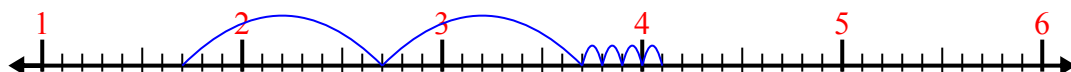
5) $7.6 + 3.6 =$



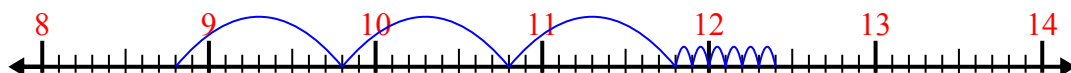
6) $1.8 + 2.7 =$



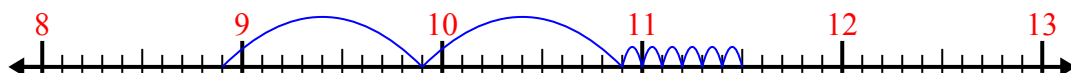
7) $1.7 + 2.4 =$



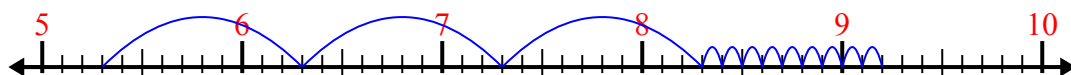
8) $8.8 + 3.6 =$



9) $8.9 + 2.6 =$



10) $5.3 + 3.9 =$

**Ответы**1. 5,82. 7,43. 10,34. 6,95. 11,26. 4,57. 4,18. 12,49. 11,510. 9,2