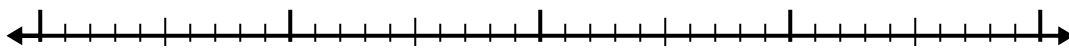


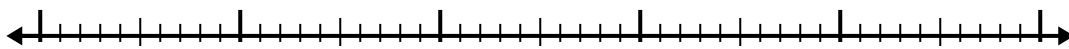


Используйте числовую линию для решения каждой проблемы.

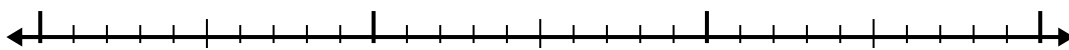
1)  $4.4 + 2.6 =$




2)  $3.5 + 2.7 =$



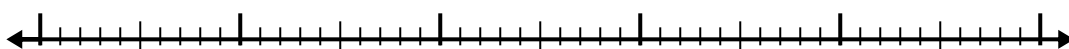
3)  $1.3 + 1.2 =$




4)  $3.3 + 1.9 =$



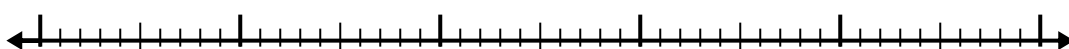
5)  $8.9 + 3.4 =$



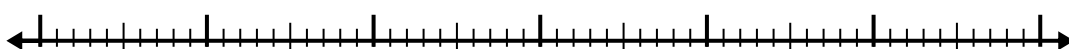
6)  $8.3 + 2.7 =$



7)  $5.3 + 2.7 =$




8)  $1.9 + 3.1 =$



9)  $8.6 + 2.3 =$



10)  $4 + 1.1 =$



Ответы

1. \_\_\_\_\_

2. \_\_\_\_\_

3. \_\_\_\_\_

4. \_\_\_\_\_

5. \_\_\_\_\_

6. \_\_\_\_\_

7. \_\_\_\_\_

8. \_\_\_\_\_

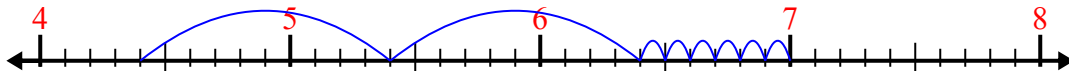
9. \_\_\_\_\_

10. \_\_\_\_\_

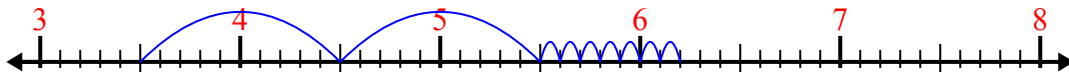


Используйте числовую линию для решения каждой проблемы.

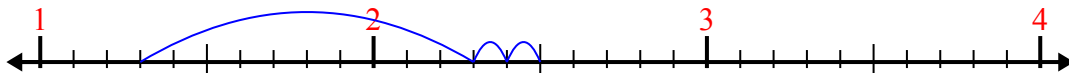
1)  $4.4 + 2.6 =$



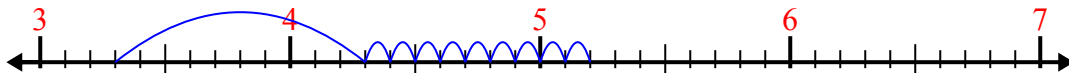
2)  $3.5 + 2.7 =$



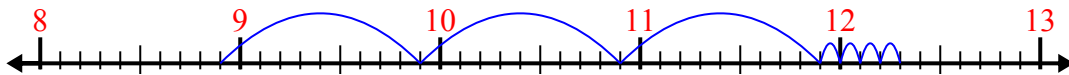
3)  $1.3 + 1.2 =$



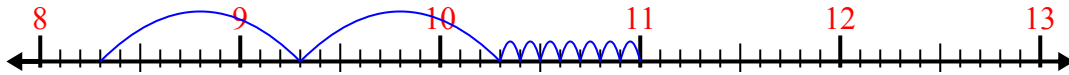
4)  $3.3 + 1.9 =$



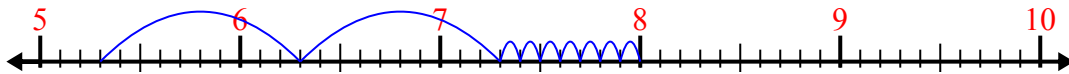
5)  $8.9 + 3.4 =$



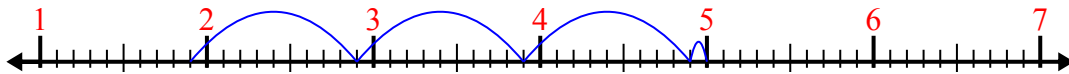
6)  $8.3 + 2.7 =$



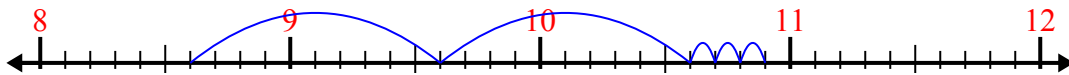
7)  $5.3 + 2.7 =$



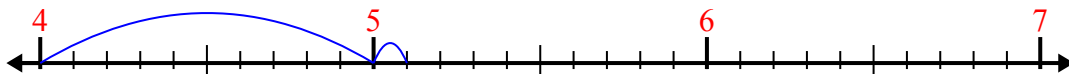
8)  $1.9 + 3.1 =$



9)  $8.6 + 2.3 =$



10)  $4 + 1.1 =$



**Ответы**

1. 7,0

2. 6,2

3. 2,5

4. 5,2

5. 12,3

6. 11,0

7. 8,0

8. 5,0

9. 10,9

10. 5,1