
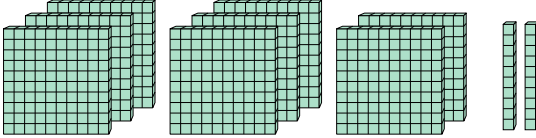





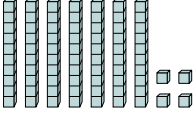
Используйте блок слева для нахождения значения наборов блоков справа.

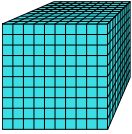
ОТВЕТЫ

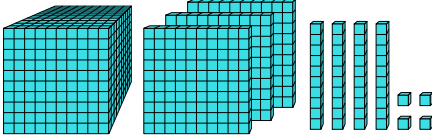
1)  = 1

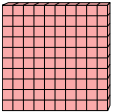


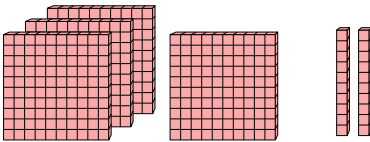
2)  = 1

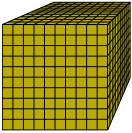


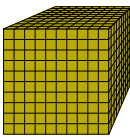
3)  = 1




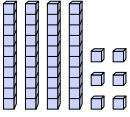
4)  = 1




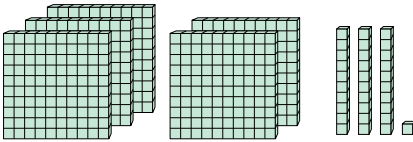
5)  = 1

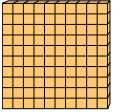


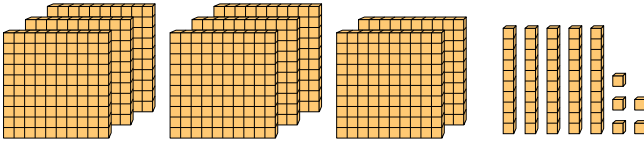
6)  = 1

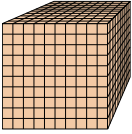


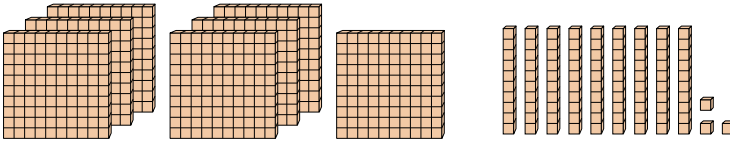
7)  = 1

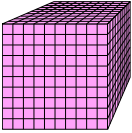


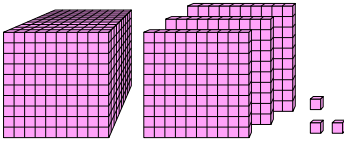
8)  = 1



9)  = 1




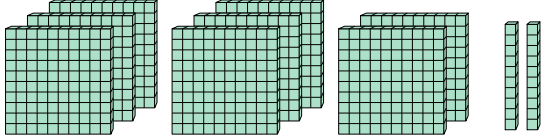
10)  = 1


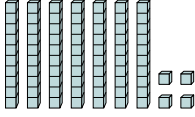


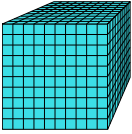
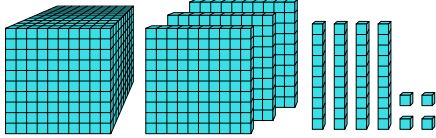
1. _____
2. _____
3. _____
4. _____
5. _____
6. _____
7. _____
8. _____
9. _____
10. _____

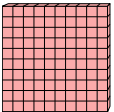
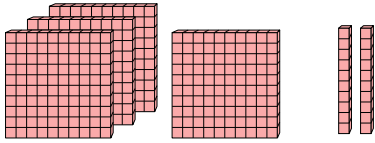


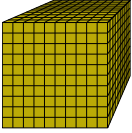
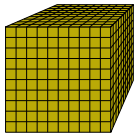
Используйте блок слева для нахождения значения наборов блоков справа.

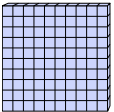
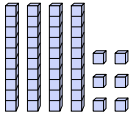
1)  = 1 

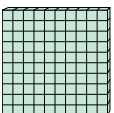
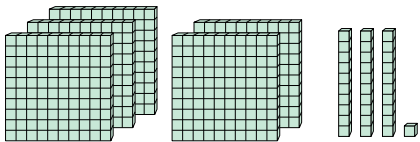
2)  = 1 

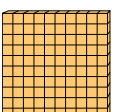
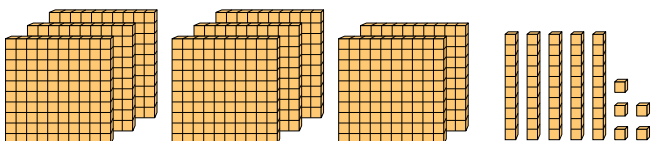
3)  = 1 

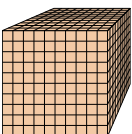
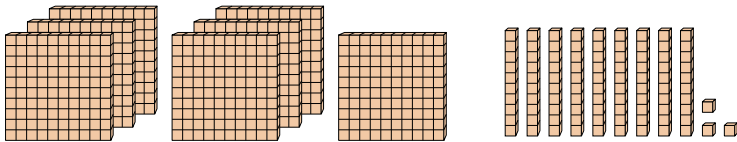
4)  = 1 

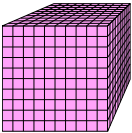
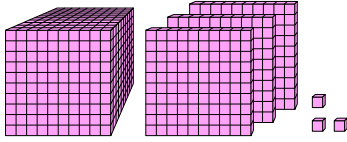
5)  = 1 

6)  = 1 

7)  = 1 

8)  = 1 

9)  = 1 

10)  = 1 

Ответы

1. 8,2
2. 0,74
3. 1,344
4. 4,2
5. 1
6. 0,46
7. 5,31
8. 8,55
9. 0,793
10. 1,303