



Используйте блок слева для нахождения значения наборов блоков справа.

**ОТВЕТЫ**

1) = 1

1. \_\_\_\_\_

2) = 1

2. \_\_\_\_\_

3) = 1

3. \_\_\_\_\_

4) = 1

4. \_\_\_\_\_

5) = 1

5. \_\_\_\_\_

6) = 1

6. \_\_\_\_\_

7) = 1

7. \_\_\_\_\_

8) = 1

8. \_\_\_\_\_

9) = 1

9. \_\_\_\_\_

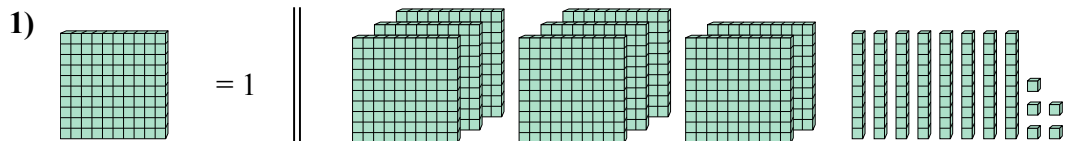
10) = 1

10. \_\_\_\_\_

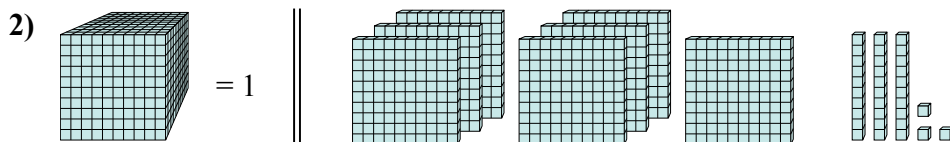


Используйте блок слева для нахождения значения наборов блоков справа.

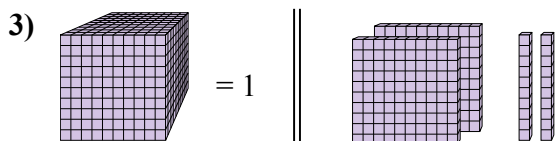
**Ответы**



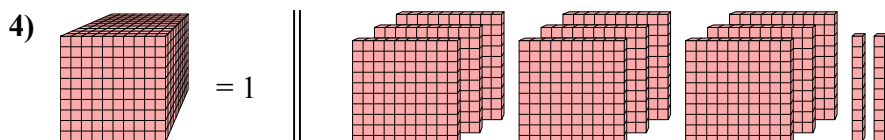
1. 8,85



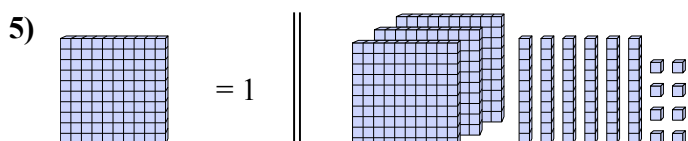
2. 0,733



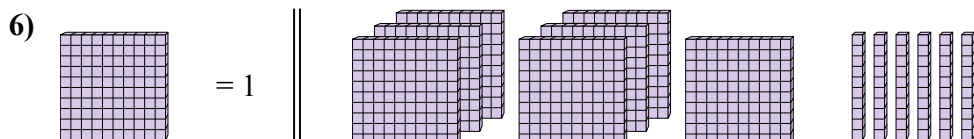
3. 0,22



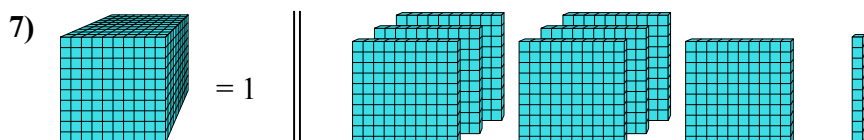
4. 0,92



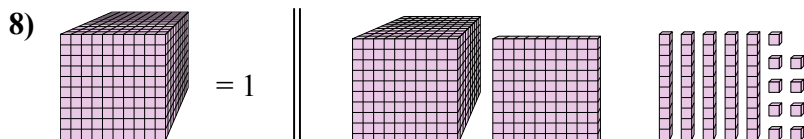
5. 3,68



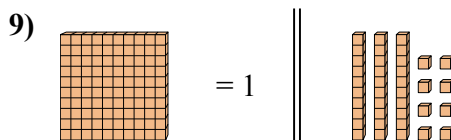
6. 7,6



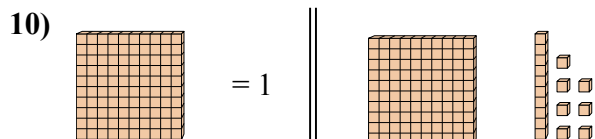
7. 0,71



8. 1,159



9. 0,38



10. 1,17