





Используйте визуальную модель, чтобы решить задачу.


1) $0,9 \times 0,5 =$




2) $0,6 \times 0,2 =$




3) $0,2 \times 0,9 =$




4) $0,7 \times 0,2 =$




5) $0,2 \times 0,6 =$




6) $0,4 \times 0,8 =$




7) $0,5 \times 0,8 =$




8) $0,9 \times 0,3 =$




9) $0,8 \times 0,5 =$




10) $0,4 \times 0,5 =$




11) $0,2 \times 0,1 =$




12) $0,5 \times 0,2 =$




13) $0,8 \times 0,4 =$



14) $0,7 \times 0,9 =$



15) $0,7 \times 0,1 =$

**ОТВЕТЫ**

1. _____

2. _____

3. _____

4. _____

5. _____

6. _____

7. _____

8. _____

9. _____

10. _____

11. _____

12. _____

13. _____

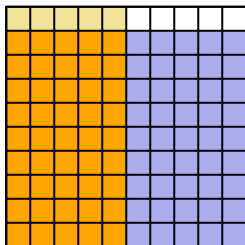
14. _____

15. _____

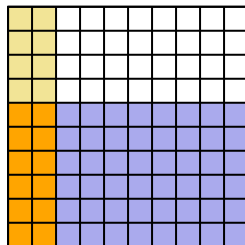


Используйте визуальную модель, чтобы решить задачу.

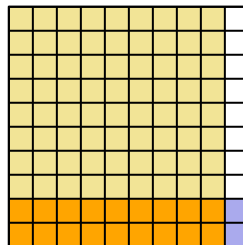
1) $0,9 \times 0,5 =$



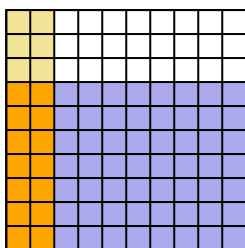
2) $0,6 \times 0,2 =$



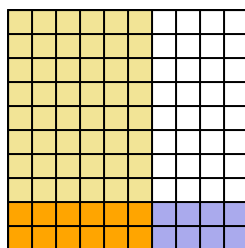
3) $0,2 \times 0,9 =$



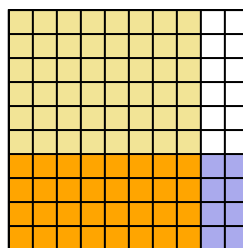
4) $0,7 \times 0,2 =$



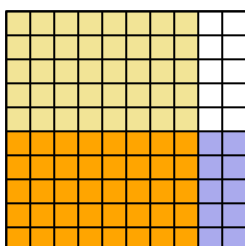
5) $0,2 \times 0,6 =$



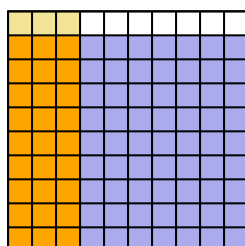
6) $0,4 \times 0,8 =$



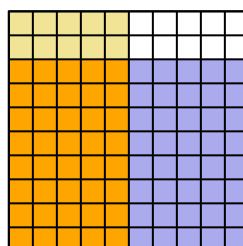
7) $0,5 \times 0,8 =$



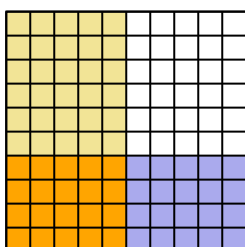
8) $0,9 \times 0,3 =$



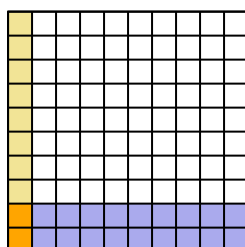
9) $0,8 \times 0,5 =$



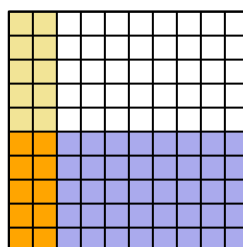
10) $0,4 \times 0,5 =$



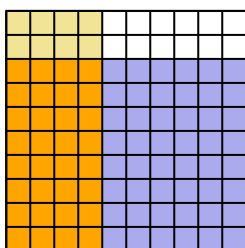
11) $0,2 \times 0,1 =$



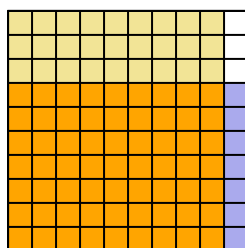
12) $0,5 \times 0,2 =$



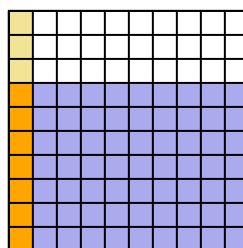
13) $0,8 \times 0,4 =$



14) $0,7 \times 0,9 =$



15) $0,7 \times 0,1 =$



ОТВЕТЫ

1. $\frac{45}{100} = 0,45$
2. $\frac{12}{100} = 0,12$
3. $\frac{18}{100} = 0,18$
4. $\frac{14}{100} = 0,14$
5. $\frac{12}{100} = 0,12$
6. $\frac{32}{100} = 0,32$
7. $\frac{40}{100} = 0,4$
8. $\frac{27}{100} = 0,27$
9. $\frac{40}{100} = 0,4$
10. $\frac{20}{100} = 0,2$
11. $\frac{2}{100} = 0,02$
12. $\frac{10}{100} = 0,1$
13. $\frac{32}{100} = 0,32$
14. $\frac{63}{100} = 0,63$
15. $\frac{7}{100} = 0,07$