



Используйте визуальную модель, чтобы решить задачу.


1)  $0,9 \times 0,6 =$




2)  $0,3 \times 0,2 =$




3)  $0,6 \times 0,2 =$




4)  $0,6 \times 0,5 =$




5)  $0,3 \times 0,6 =$




6)  $0,8 \times 0,3 =$




7)  $0,9 \times 0,3 =$




8)  $0,7 \times 0,1 =$




9)  $0,8 \times 0,7 =$




10)  $0,3 \times 0,3 =$




11)  $0,8 \times 0,6 =$




12)  $0,1 \times 0,1 =$




13)  $0,9 \times 0,2 =$



14)  $0,8 \times 0,4 =$



15)  $0,2 \times 0,4 =$

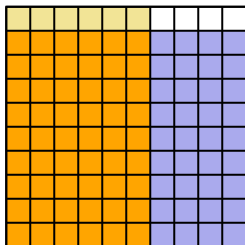
**ОТВЕТЫ**

1. \_\_\_\_\_
2. \_\_\_\_\_
3. \_\_\_\_\_
4. \_\_\_\_\_
5. \_\_\_\_\_
6. \_\_\_\_\_
7. \_\_\_\_\_
8. \_\_\_\_\_
9. \_\_\_\_\_
10. \_\_\_\_\_
11. \_\_\_\_\_
12. \_\_\_\_\_
13. \_\_\_\_\_
14. \_\_\_\_\_
15. \_\_\_\_\_

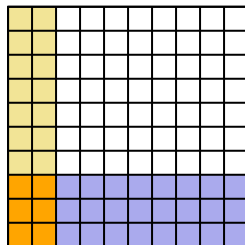


Используйте визуальную модель, чтобы решить задачу.

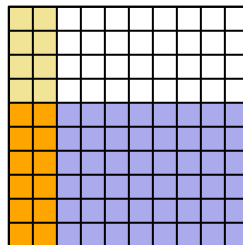
1)  $0,9 \times 0,6 =$



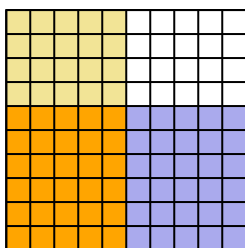
2)  $0,3 \times 0,2 =$



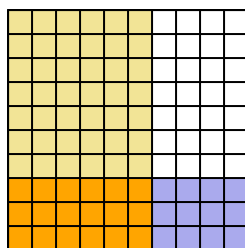
3)  $0,6 \times 0,2 =$



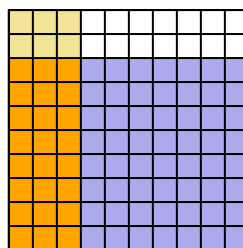
4)  $0,6 \times 0,5 =$



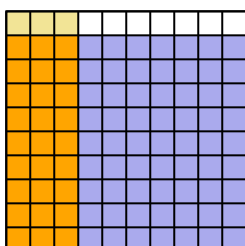
5)  $0,3 \times 0,6 =$



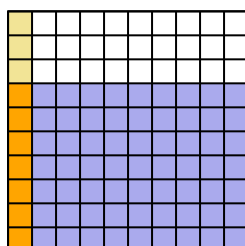
6)  $0,8 \times 0,3 =$



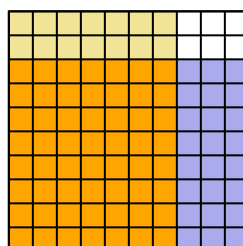
7)  $0,9 \times 0,3 =$



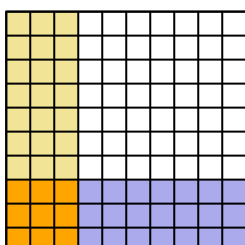
8)  $0,7 \times 0,1 =$



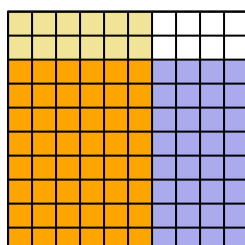
9)  $0,8 \times 0,7 =$



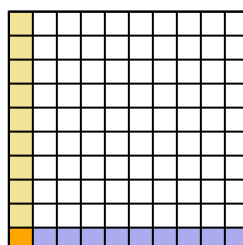
10)  $0,3 \times 0,3 =$



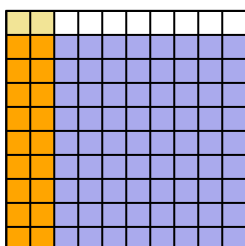
11)  $0,8 \times 0,6 =$



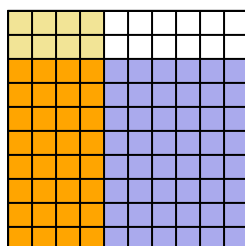
12)  $0,1 \times 0,1 =$



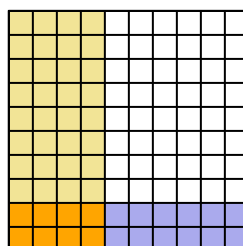
13)  $0,9 \times 0,2 =$



14)  $0,8 \times 0,4 =$



15)  $0,2 \times 0,4 =$



**ОТВЕТЫ**

1.  $\frac{54}{100} = 0,54$
2.  $\frac{6}{100} = 0,06$
3.  $\frac{12}{100} = 0,12$
4.  $\frac{30}{100} = 0,3$
5.  $\frac{18}{100} = 0,18$
6.  $\frac{24}{100} = 0,24$
7.  $\frac{27}{100} = 0,27$
8.  $\frac{7}{100} = 0,07$
9.  $\frac{56}{100} = 0,56$
10.  $\frac{9}{100} = 0,09$
11.  $\frac{48}{100} = 0,48$
12.  $\frac{1}{100} = 0,01$
13.  $\frac{18}{100} = 0,18$
14.  $\frac{32}{100} = 0,32$
15.  $\frac{8}{100} = 0,08$