




Используйте визуальную модель, чтобы решить задачу.

ОТВЕТЫ

1) $3 \times 0,18 =$

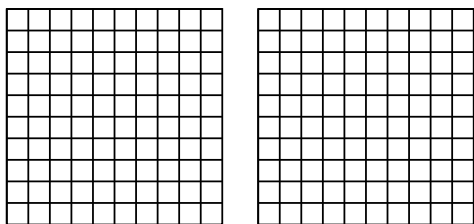


1. _____

2. _____

3. _____

2) $2 \times 0,53 =$

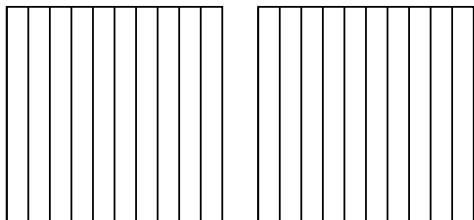


4. _____

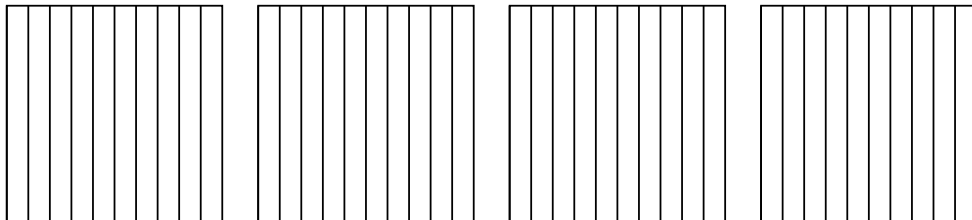
5. _____

6. _____

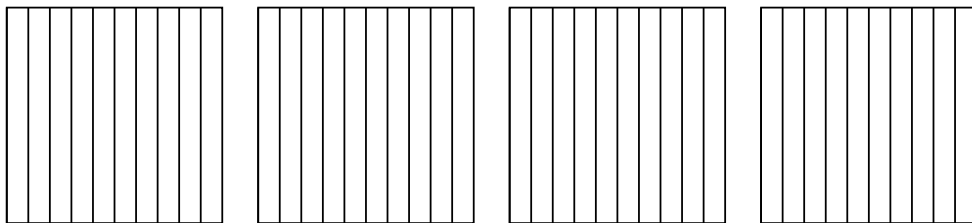
3) $2 \times 0,4 =$



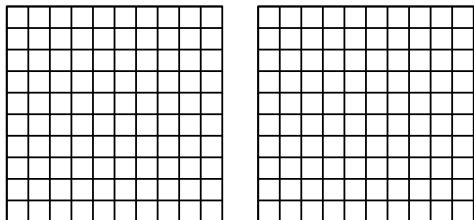
4) $4 \times 0,7 =$



5) $4 \times 0,8 =$



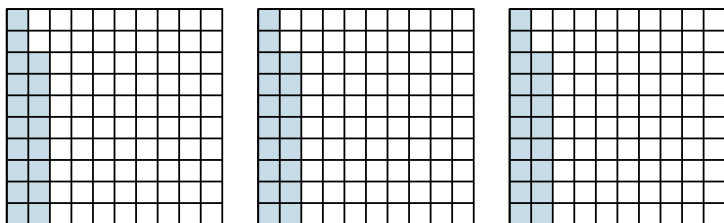
6) $2 \times 0,38 =$



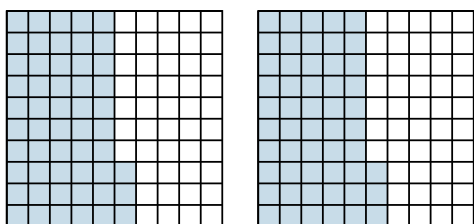


Используйте визуальную модель, чтобы решить задачу.

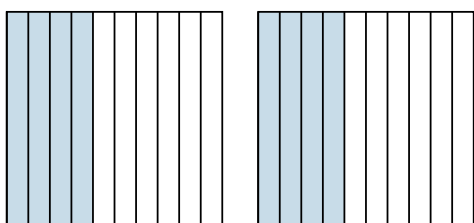
1) $3 \times 0,18 =$



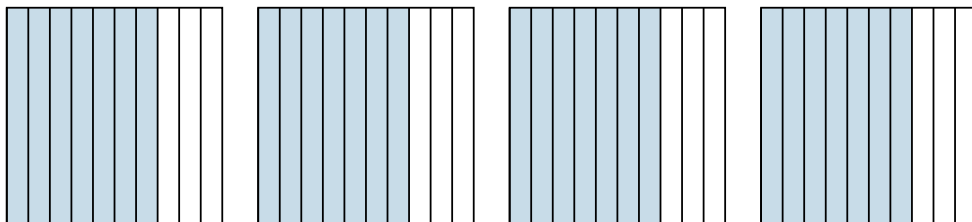
2) $2 \times 0,53 =$



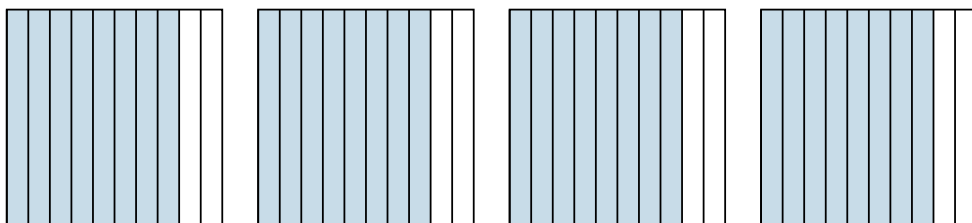
3) $2 \times 0,4 =$



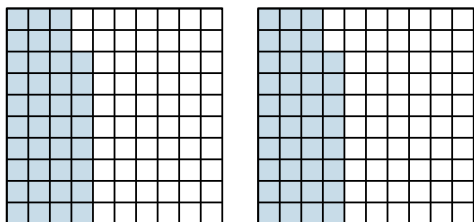
4) $4 \times 0,7 =$



5) $4 \times 0,8 =$



6) $2 \times 0,38 =$



ОТВЕТЫ

1. $\frac{54}{100} = 0,54$

2. $\frac{106}{100} = 1,06$

3. $\frac{8}{10} = 0,8$

4. $\frac{28}{10} = 2,8$

5. $\frac{32}{10} = 3,2$

6. $\frac{76}{100} = 0,76$