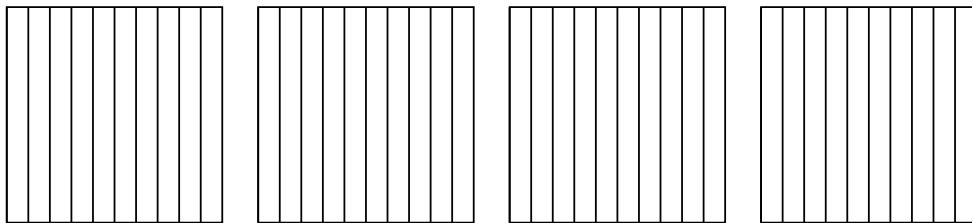


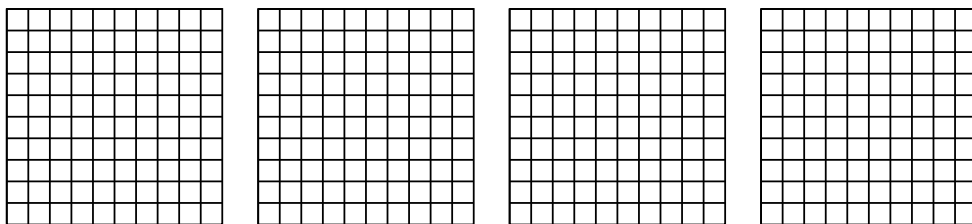


Используйте визуальную модель, чтобы решить задачу.


1) $4 \times 0,5 =$



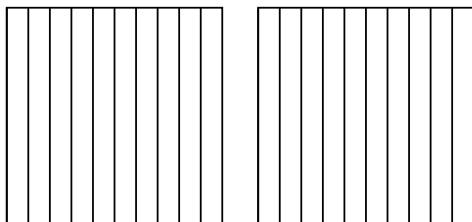
2) $4 \times 0,92 =$



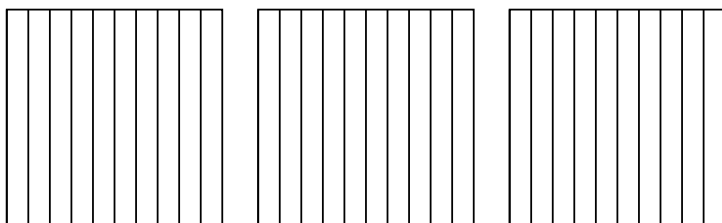
3) $3 \times 0,36 =$



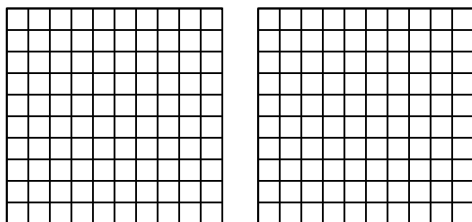
4) $2 \times 0,2 =$



5) $3 \times 0,6 =$



6) $2 \times 0,44 =$

**ОТВЕТЫ**

1. _____

2. _____

3. _____

4. _____

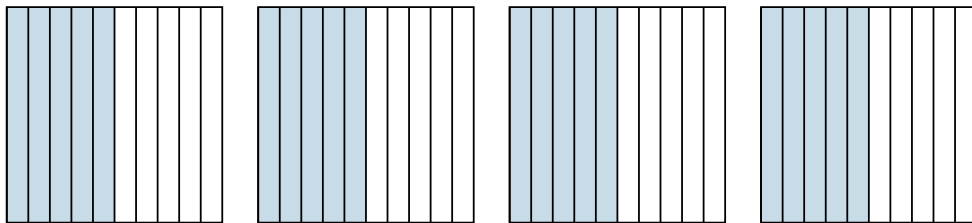
5. _____

6. _____

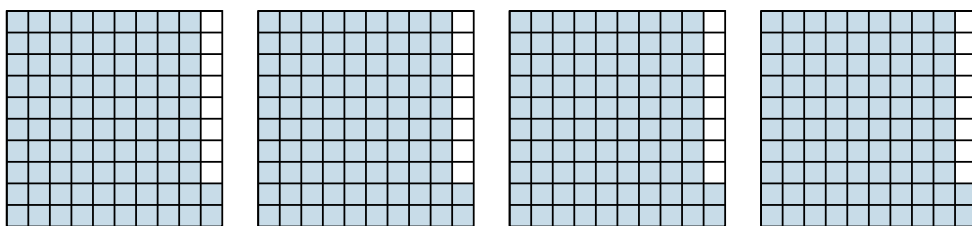


Используйте визуальную модель, чтобы решить задачу.

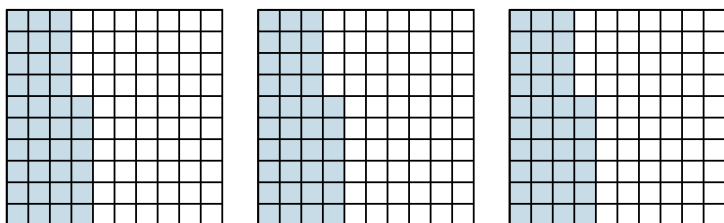
1) $4 \times 0,5 =$



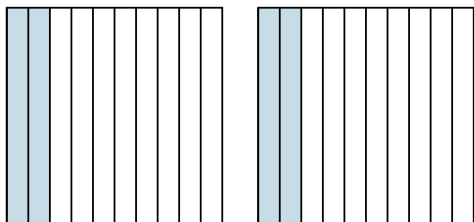
2) $4 \times 0,92 =$



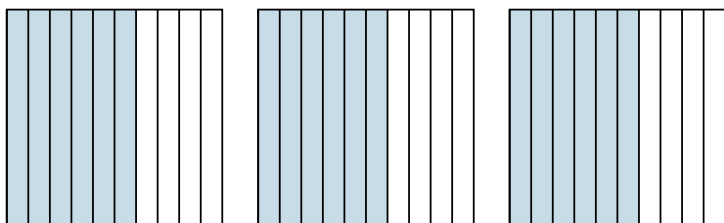
3) $3 \times 0,36 =$



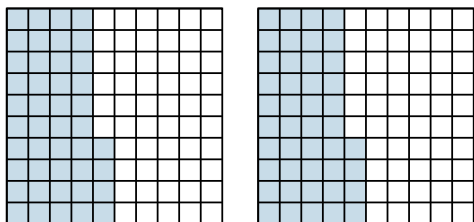
4) $2 \times 0,2 =$



5) $3 \times 0,6 =$



6) $2 \times 0,44 =$



ОТВЕТЫ

1. $\frac{20}{10} = 2$

2. $\frac{368}{100} = 3,68$

3. $\frac{108}{100} = 1,08$

4. $\frac{4}{10} = 0,4$

5. $\frac{18}{10} = 1,8$

6. $\frac{88}{100} = 0,88$