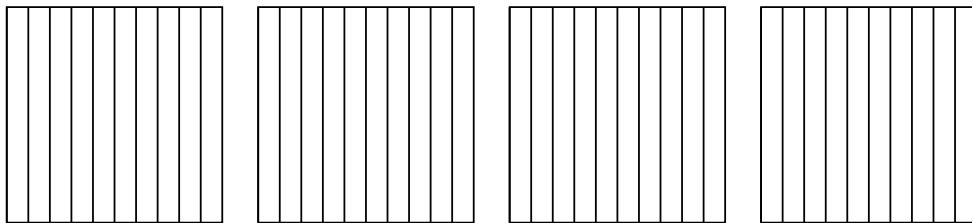





Используйте визуальную модель, чтобы решить задачу.


1) $4 \times 0,9 =$



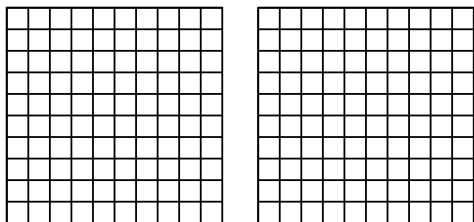
2) $4 \times 0,39 =$




3) $3 \times 0,54 =$



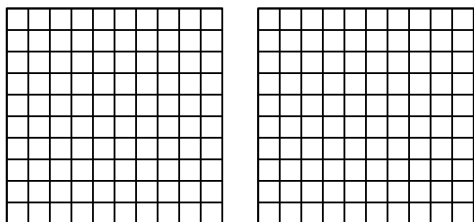
4) $2 \times 0,79 =$



5) $3 \times 0,2 =$



6) $2 \times 0,23 =$

**ОТВЕТЫ**

1. _____

2. _____

3. _____

4. _____

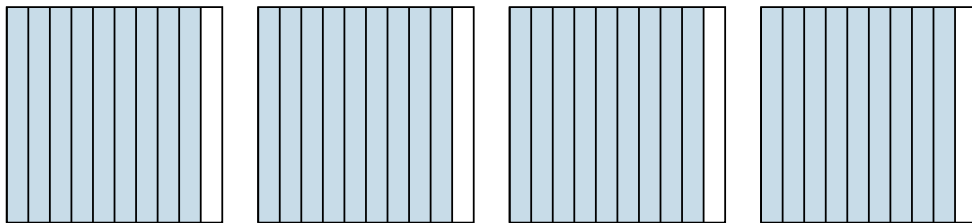
5. _____

6. _____

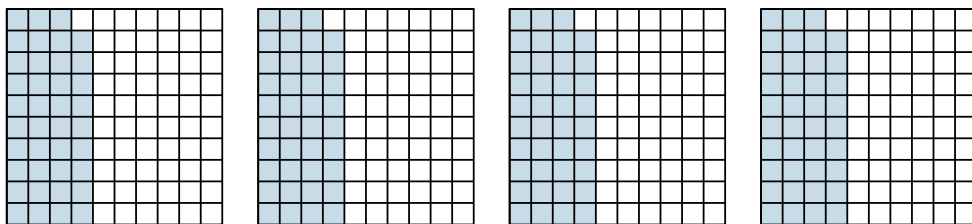


Используйте визуальную модель, чтобы решить задачу.

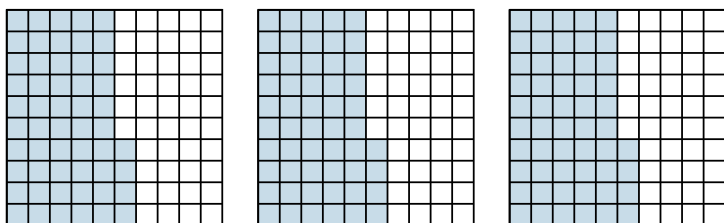
1) $4 \times 0,9 =$



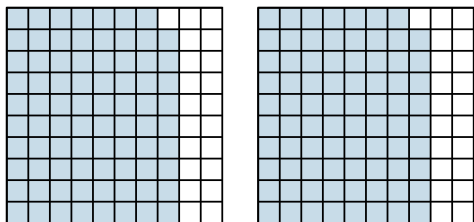
2) $4 \times 0,39 =$




3) $3 \times 0,54 =$



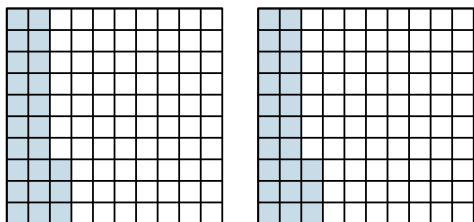
4) $2 \times 0,79 =$



5) $3 \times 0,2 =$



6) $2 \times 0,23 =$



ОТВЕТЫ

1. $\frac{36}{10} = 3,6$

2. $\frac{156}{100} = 1,56$

3. $\frac{162}{100} = 1,62$

4. $\frac{158}{100} = 1,58$

5. $\frac{6}{10} = 0,6$

6. $\frac{46}{100} = 0,46$