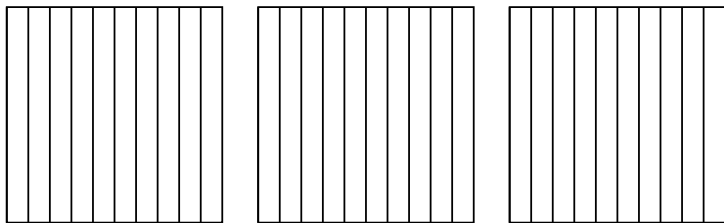


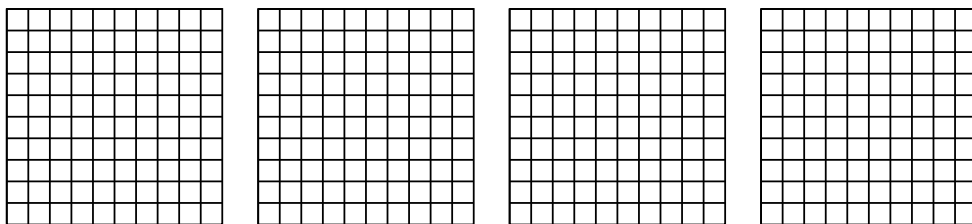


Используйте визуальную модель, чтобы решить задачу.

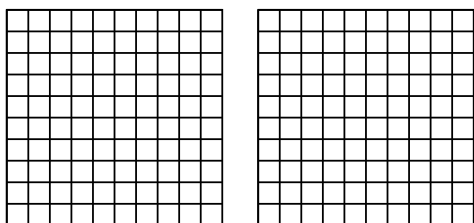
1) $3 \times 0,6 =$



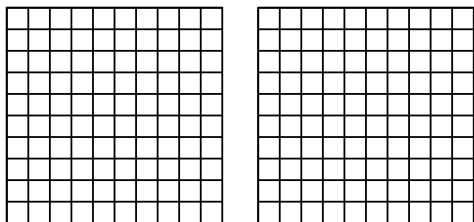
2) $4 \times 0,69 =$



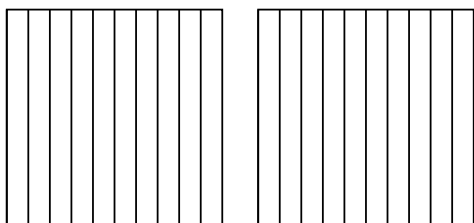
3) $2 \times 0,97 =$



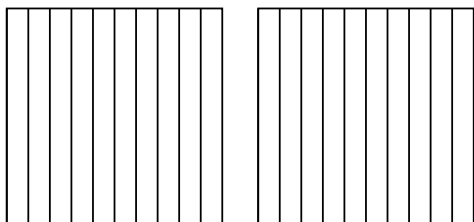
4) $2 \times 0,75 =$



5) $2 \times 0,3 =$



6) $2 \times 0,2 =$

**ОТВЕТЫ**

1. _____

2. _____

3. _____

4. _____

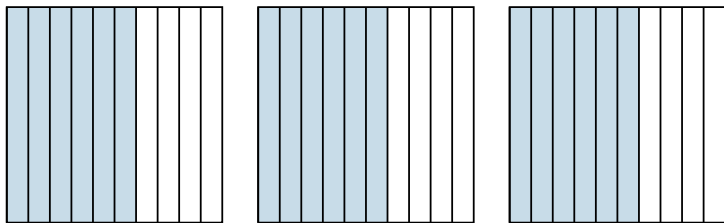
5. _____

6. _____

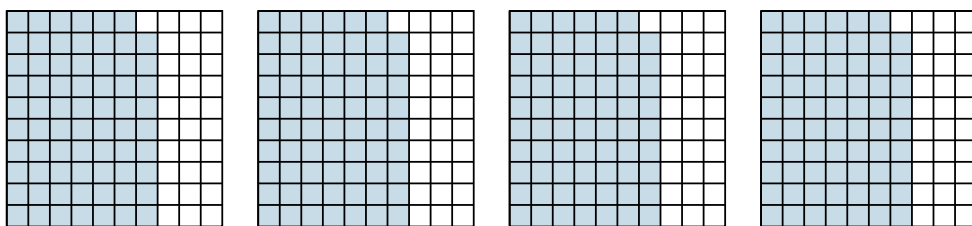


Используйте визуальную модель, чтобы решить задачу.

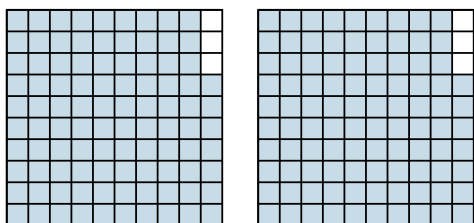
1) $3 \times 0,6 =$



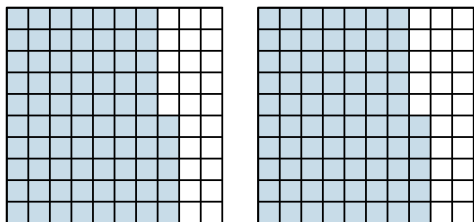
2) $4 \times 0,69 =$



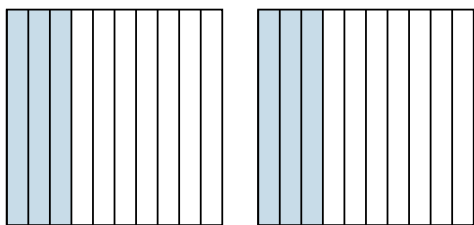
3) $2 \times 0,97 =$



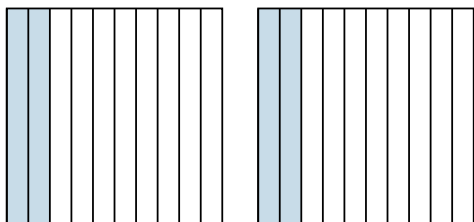
4) $2 \times 0,75 =$



5) $2 \times 0,3 =$



6) $2 \times 0,2 =$



ОТВЕТЫ

1. $\frac{18}{10} = 1,8$

2. $\frac{276}{100} = 2,76$

3. $\frac{194}{100} = 1,94$

4. $\frac{150}{100} = 1,5$

5. $\frac{6}{10} = 0,6$

6. $\frac{4}{10} = 0,4$