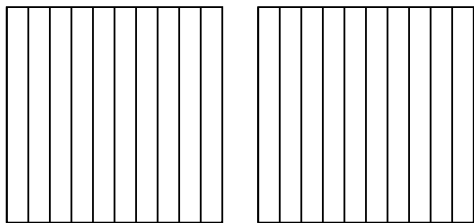




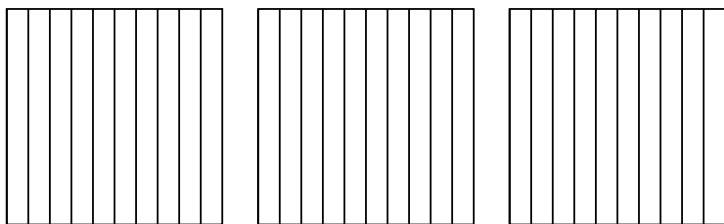
Используйте визуальную модель, чтобы решить задачу.

ОТВЕТЫ

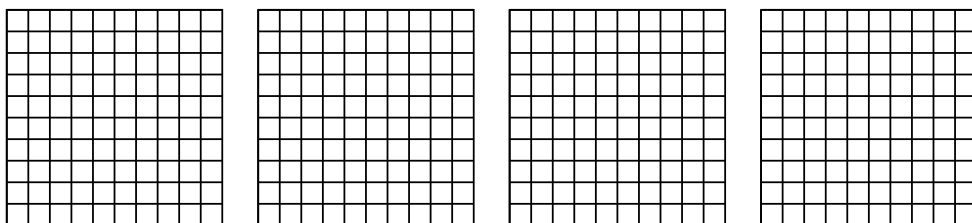
1) $2 \times 0,7 =$




2) $3 \times 0,5 =$



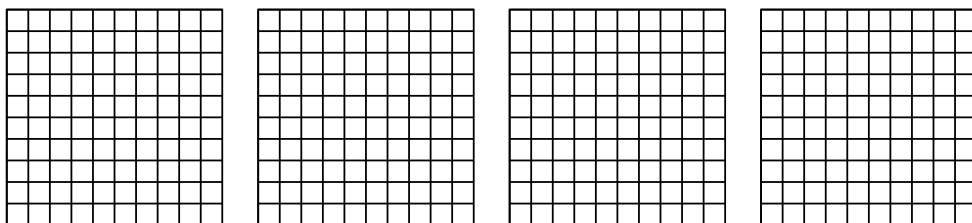
3) $4 \times 0,92 =$



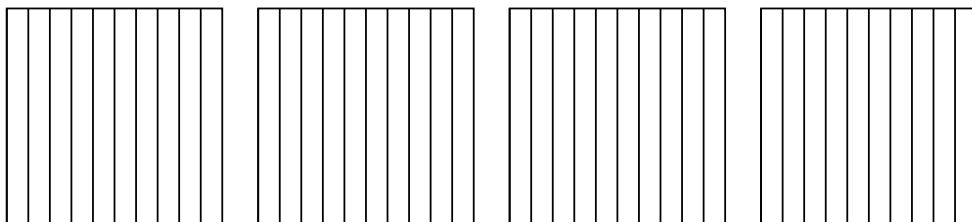
4) $3 \times 0,73 =$



5) $4 \times 0,20 =$



6) $4 \times 0,7 =$



1. _____

2. _____

3. _____

4. _____

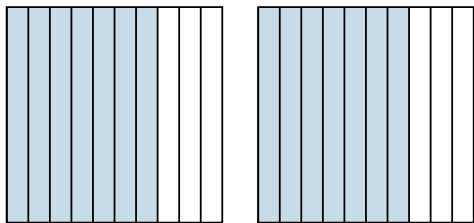
5. _____

6. _____

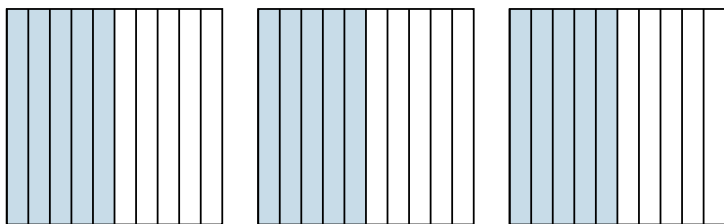


Используйте визуальную модель, чтобы решить задачу.

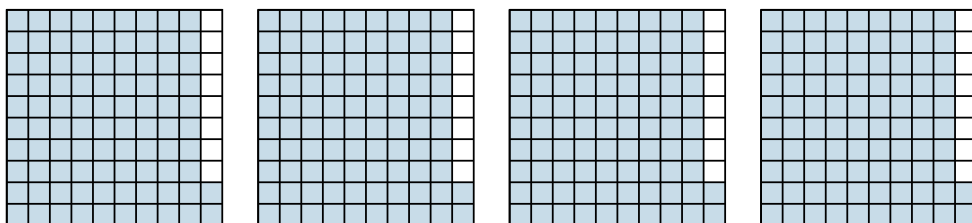
1) $2 \times 0,7 =$



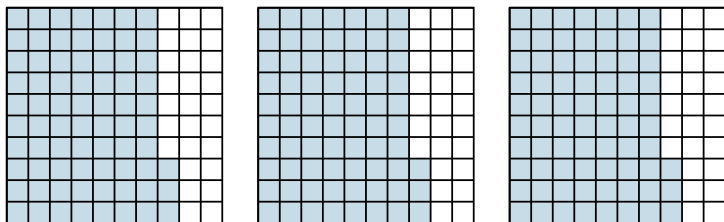
2) $3 \times 0,5 =$



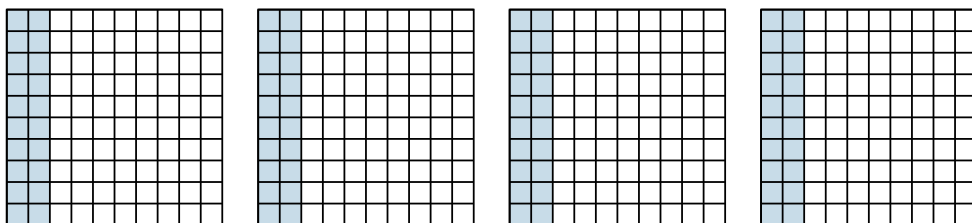
3) $4 \times 0,92 =$



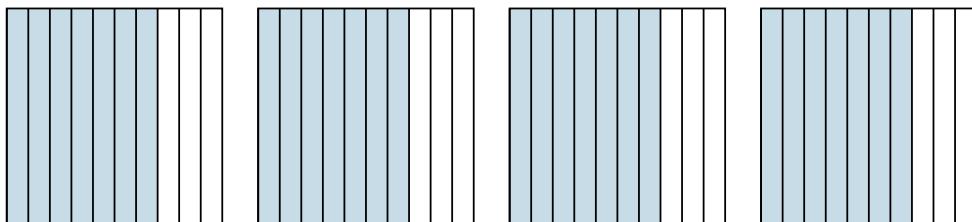
4) $3 \times 0,73 =$



5) $4 \times 0,20 =$



6) $4 \times 0,7 =$



ОТВЕТЫ

1. $\frac{14}{10} = 1,4$

2. $\frac{15}{10} = 1,5$

3. $\frac{368}{100} = 3,68$

4. $\frac{219}{100} = 2,19$

5. $\frac{80}{100} = 0,8$

6. $\frac{28}{10} = 2,8$