



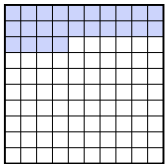

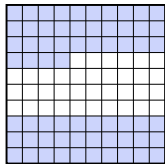
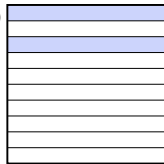
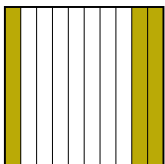
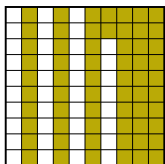
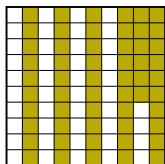
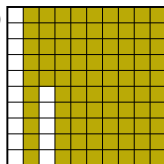
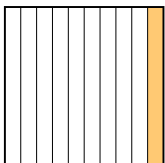
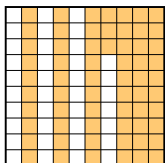
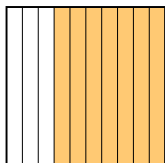
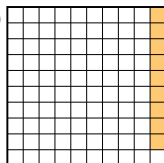
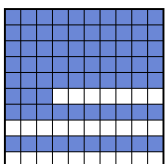
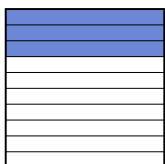
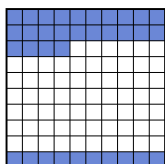

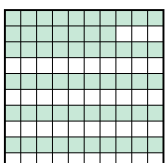





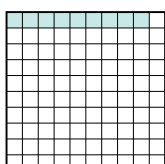
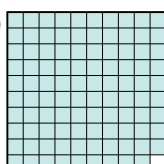


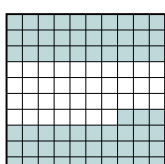
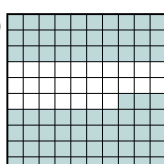
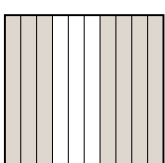

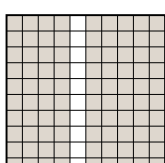
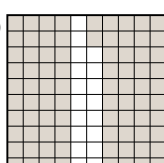

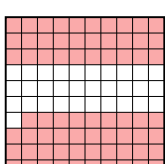


Расположите данные сектора по возрастанию, по наличию закрашенных частей.

ОТВЕТЫ

об)	A	B	C	D	маленький <u>0.2 - D</u>	об. D,A,B,C
				<u>0.24 - A</u>		
				<u>0.4 - B</u>		
				большой <u>0.64 - C</u>		
1)	A	B	C	D	маленький _____	1. _____
				большой _____	2. _____	
2)	A	B	C	D	маленький _____	3. _____
				большой _____	4. _____	
3)	A	B	C	D	маленький _____	5. _____
				большой _____	6. _____	
4)	A	B	C	D	маленький _____	7. _____
				большой _____	8. _____	
5)	A	B	C	D	маленький _____	
				большой _____		
6)	A	B	C	D	маленький _____	
				большой _____		
7)	A	B	C	D	маленький _____	
				большой _____		
8)	A	B	C	D	маленький _____	
				большой _____		



Расположите данные сектора по возрастанию, по наличию закрашенных частей.

об)	A 	B 	C 	D 	маленький $\frac{0.2}{0.24} - D$	
					большой $\frac{0.4}{0.64} - C$	
1)	A 	B 	C 	D 	маленький $\frac{0.3}{0.56} - C$	
					большой $\frac{0.62}{0.85} - D$	
2)	A 	B 	C 	D 	маленький $\frac{0.09}{0.1} - A$	
					большой $\frac{0.63}{0.7} - C$	
3)	A 	B 	C 	D 	маленький $\frac{0.3}{0.34} - C$	
					большой $\frac{0.7}{0.73} - A$	
4)	A 	B 	C 	D 	маленький $\frac{0.16}{0.4} - B$	
					большой $\frac{0.57}{0.9} - C$	
5)	A 	B 	C 	D 	маленький $\frac{0.09}{0.3} - B$	
					большой $\frac{0.9}{0.99} - D$	
6)	A 	B 	C 	D 	маленький $\frac{0.3}{0.4} - B$	
					большой $\frac{0.63}{0.73} - D$	
7)	A 	B 	C 	D 	маленький $\frac{0.06}{0.7} - A$	
					большой $\frac{0.82}{0.9} - C$	
8)	A 	B 	C 	D 	маленький $\frac{0.07}{0.2} - D$	
					большой $\frac{0.3}{0.69} - B$	

ОТВЕТЫ

- об. D,A,B,C
1. A,C,B,D
2. D,A,B,C
3. B,C,D,A
4. D,B,A,C
5. C,B,A,D
6. A,B,C,D
7. B,A,D,C
8. A,D,C,B