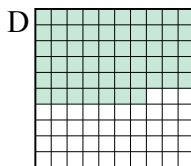
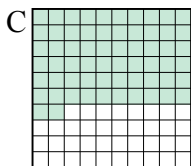
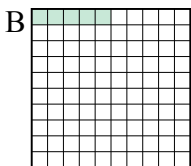
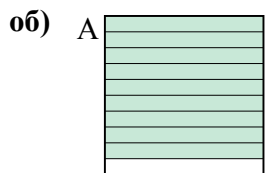




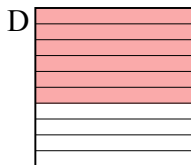
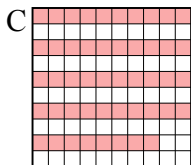

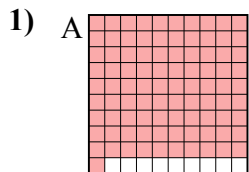
Расположите данные сектора по возрастанию, по наличию закрашенных частей.

ОТВЕТЫ

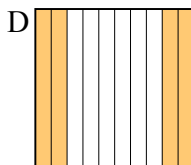
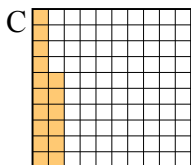
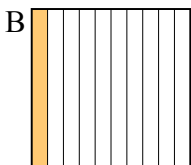
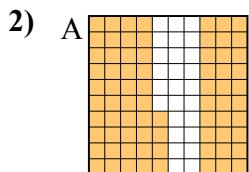


маленький 0.05 - B
0.57 - D
0.62 - C
 большой 0.9 - A

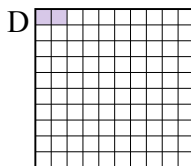
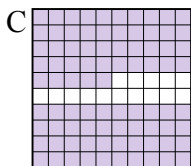

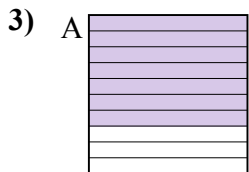
об. **B,D,C,A**



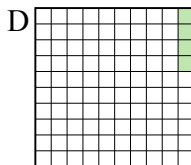
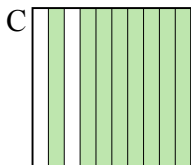
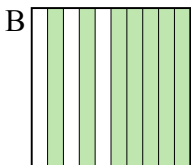
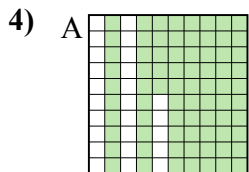
маленький _____
 большой _____



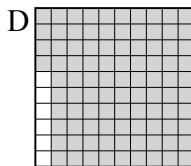
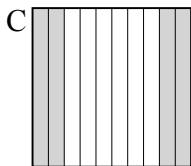
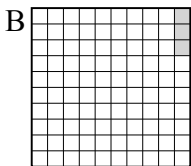
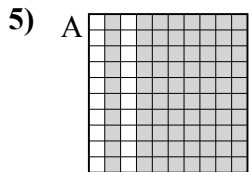
маленький _____
 большой _____




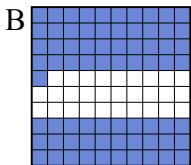
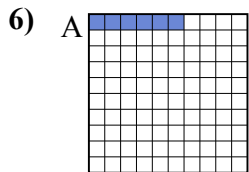
маленький _____
 большой _____



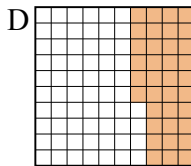
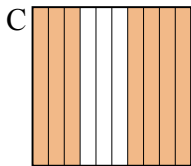
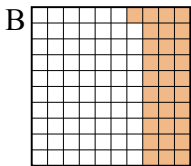
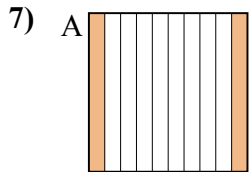
маленький _____
 большой _____



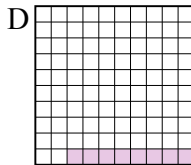
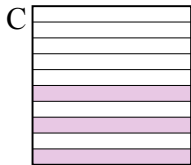
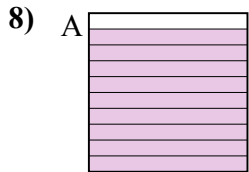
маленький _____
 большой _____



маленький _____
 большой _____



маленький _____
 большой _____


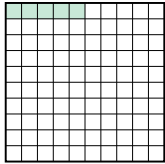
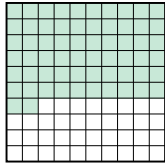
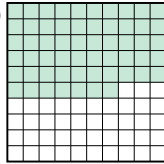
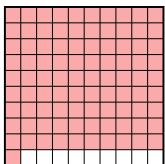

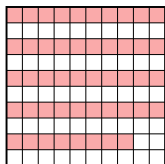

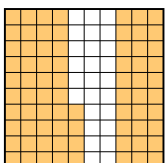
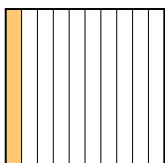
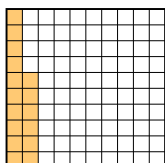
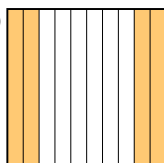



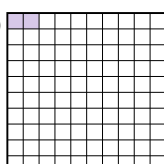
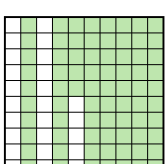
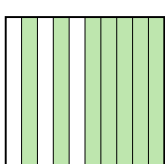

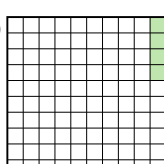


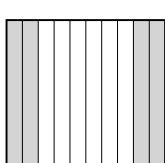

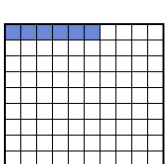
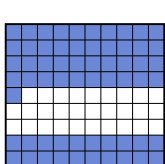


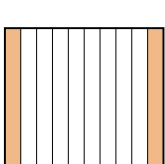
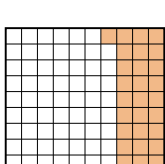
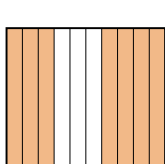
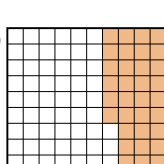






маленький _____
 большой _____

1. _____
2. _____
3. _____
4. _____
5. _____
6. _____
7. _____
8. _____



Расположите данные сектора по возрастанию, по наличию закрашенных частей.

| | | | | | | <u>ОТВЕТЫ</u> |
|-----|---|---|---|---|---|--|
| об) | A  | B  | C  | D  | маленький 0.05 - B 0.57 - D 0.62 - C | об. B,D,C,A |
| | | | | | большой 0.9 - A | 1. C,B,D,A |
| 1) | A  | B  | C  | D  | маленький 0.48 - C 0.5 - B 0.6 - D | 2. B,C,D,A |
| | | | | | большой 0.91 - A | 3. D,B,A,C |
| 2) | A  | B  | C  | D  | маленький 0.1 - B 0.16 - C 0.4 - D | 4. D,B,A,C |
| | | | | | большой 0.74 - A | 5. B,C,A,D |
| 3) | A  | B  | C  | D  | маленький 0.02 - D 0.1 - B 0.7 - A | 6. A,C,D,B |
| | | | | | большой 0.85 - C | 7. A,B,D,C |
| 4) | A  | B  | C  | D  | маленький 0.04 - D 0.7 - B 0.75 - A | 8. D,C,B,A |
| | | | | | большой 0.8 - C | |
| 5) | A  | B  | C  | D  | маленький 0.03 - B 0.4 - C 0.8 - A | |
| | | | | | большой 0.94 - D | |
| 6) | A  | B  | C  | D  | маленький 0.06 - A 0.6 - C 0.7 - D | |
| | | | | | большой 0.71 - B | |
| 7) | A  | B  | C  | D  | маленький 0.2 - A 0.31 - B 0.36 - D | |
| | | | | | большой 0.7 - C | |
| 8) | A  | B  | C  | D  | маленький 0.08 - D 0.3 - C 0.4 - B | |
| | | | | | большой 0.9 - A | |