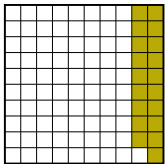
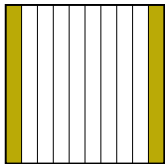

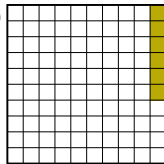


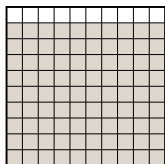


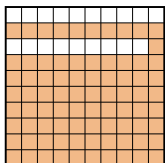

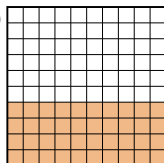
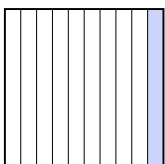
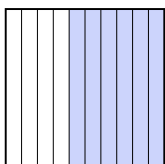
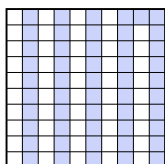
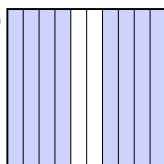
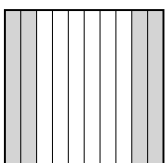
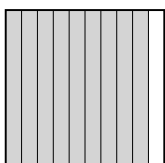


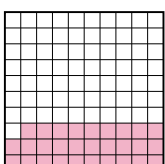
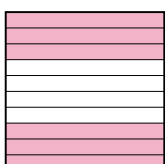

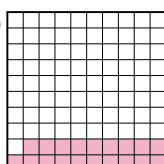

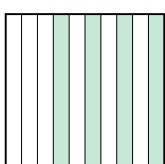
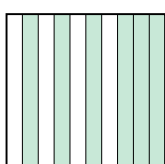

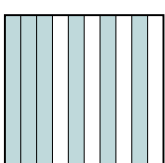
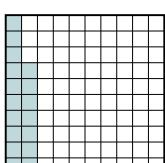
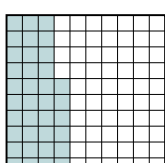
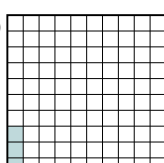








Расположите данные сектора по возрастанию, по наличию закрашенных частей.

**ОТВЕТЫ**

об)	A 	B 	C 	D 	маленький <u>0.06 - D</u> <u>0.19 - A</u> <u>0.2 - B</u> большой <u>0.4 - C</u>
1)	A 	B 	C 	D 	маленький _____ большой _____
2)	A 	B 	C 	D 	маленький _____ большой _____
3)	A 	B 	C 	D 	маленький _____ большой _____
4)	A 	B 	C 	D 	маленький _____ большой _____
5)	A 	B 	C 	D 	маленький _____ большой _____
6)	A 	B 	C 	D 	маленький _____ большой _____
7)	A 	B 	C 	D 	маленький _____ большой _____
8)	A 	B 	C 	D 	маленький _____ большой _____

об. **D,A,B,C**

1. \_\_\_\_\_

2. \_\_\_\_\_

3. \_\_\_\_\_

4. \_\_\_\_\_

5. \_\_\_\_\_

6. \_\_\_\_\_

7. \_\_\_\_\_

8. \_\_\_\_\_



Расположите данные сектора по возрастанию, по наличию закрашенных частей.

об)	A	B	C	D	<p>маленький <math>\frac{0.06}{0.19} - D</math></p> <p><math>\frac{0.2}{0.4} - B</math></p> <p>большой <math>\frac{0.4}{0.4} - C</math></p>
1)	A	B	C	D	<p>маленький <math>\frac{0.2}{0.5} - D</math></p> <p><math>\frac{0.9}{0.96} - C</math></p> <p>большой <math>\frac{0.96}{0.96} - A</math></p>
2)	A	B	C	D	<p>маленький <math>\frac{0.1}{0.4} - C</math></p> <p><math>\frac{0.8}{0.81} - B</math></p> <p>большой <math>\frac{0.81}{0.81} - B</math></p>
3)	A	B	C	D	<p>маленький <math>\frac{0.1}{0.51} - A</math></p> <p><math>\frac{0.6}{0.6} - B</math></p> <p>большой <math>\frac{0.8}{0.8} - D</math></p>
4)	A	B	C	D	<p>маленький <math>\frac{0.36}{0.4} - D</math></p> <p><math>\frac{0.9}{0.9} - B</math></p> <p>большой <math>\frac{0.93}{0.93} - C</math></p>
5)	A	B	C	D	<p>маленький <math>\frac{0.19}{0.29} - D</math></p> <p><math>\frac{0.6}{0.6} - B</math></p> <p>большой <math>\frac{0.8}{0.8} - C</math></p>
6)	A	B	C	D	<p>маленький <math>\frac{0.4}{0.6} - B</math></p> <p><math>\frac{0.67}{0.67} - A</math></p> <p>большой <math>\frac{0.89}{0.89} - D</math></p>
7)	A	B	C	D	<p>маленький <math>\frac{0.03}{0.17} - D</math></p> <p><math>\frac{0.36}{0.36} - C</math></p> <p>большой <math>\frac{0.6}{0.6} - A</math></p>
8)	A	B	C	D	<p>маленький <math>\frac{0.2}{0.5} - A</math></p> <p><math>\frac{0.61}{0.61} - C</math></p> <p>большой <math>\frac{0.92}{0.92} - B</math></p>

**ОТВЕТЫ**

об.	<span style="color: green;">D,A,B,C</span>
1.	<span style="color: red;">D,B,C,A</span>
2.	<span style="color: red;">C,D,A,B</span>
3.	<span style="color: red;">A,C,B,D</span>
4.	<span style="color: red;">D,A,B,C</span>
5.	<span style="color: red;">D,A,B,C</span>
6.	<span style="color: red;">B,C,A,D</span>
7.	<span style="color: red;">D,B,C,A</span>
8.	<span style="color: red;">A,D,C,B</span>