


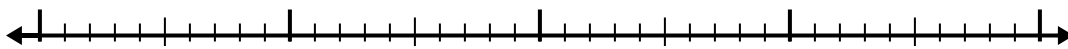


Используйте числовую линию для решения каждой проблемы.

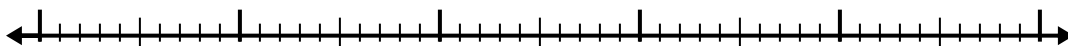
1) $9,1 - 3,6 =$



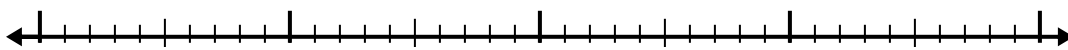
2) $8,1 - 1,6 =$



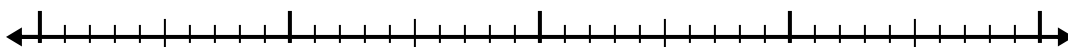
3) $6,7 - 3,2 =$



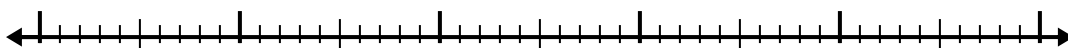
4) $10,3 - 2,6 =$




5) $5,8 - 1,9 =$



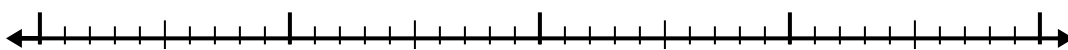
6) $8,2 - 2,3 =$




7) $5,9 - 1,6 =$




8) $11,2 - 2,9 =$



9) $10,5 - 3,5 =$



10) $8 - 2,4 =$



Ответы

1. _____

2. _____

3. _____

4. _____

5. _____

6. _____

7. _____

8. _____

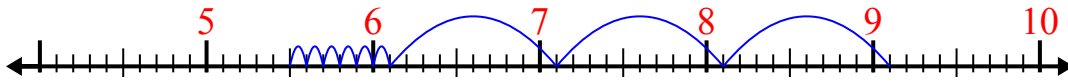
9. _____

10. _____

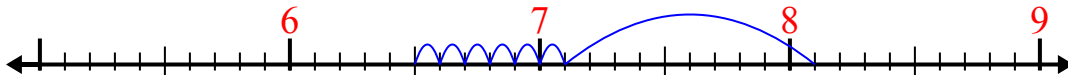


Используйте числовую линию для решения каждой проблемы.

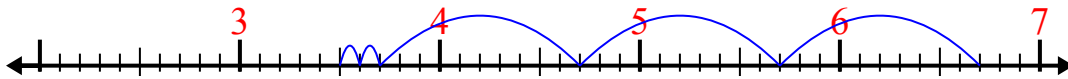
1) $9,1 - 3,6 =$



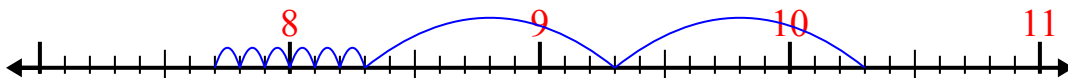
2) $8,1 - 1,6 =$



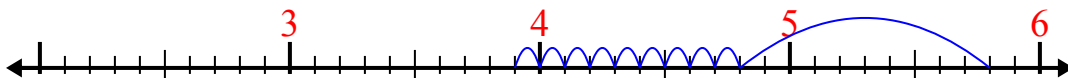
3) $6,7 - 3,2 =$



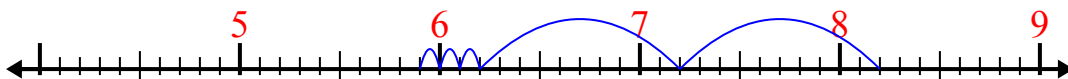
4) $10,3 - 2,6 =$



5) $5,8 - 1,9 =$



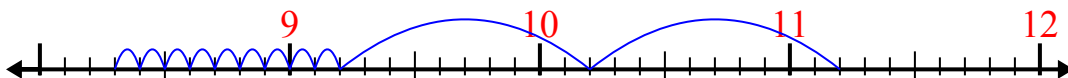
6) $8,2 - 2,3 =$



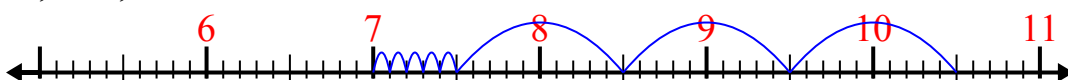
7) $5,9 - 1,6 =$



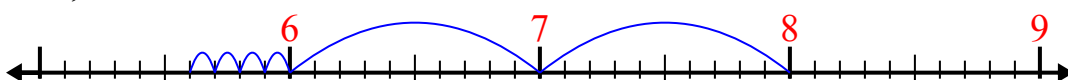
8) $11,2 - 2,9 =$



9) $10,5 - 3,5 =$



10) $8 - 2,4 =$



Ответы

1. 5,5

2. 6,5

3. 3,5

4. 7,7

5. 3,9

6. 5,9

7. 4,3

8. 8,3

9. 7

10. 5,6