


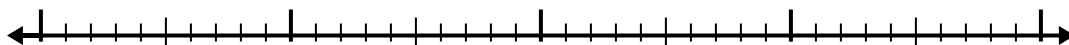


Используйте числовую линию для решения каждой проблемы.


1) $2,5 - 1,3 =$



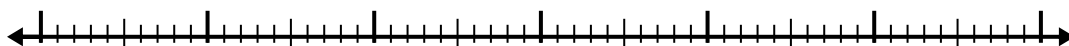
2) $10,8 - 2,4 =$



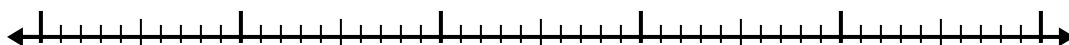
3) $4,5 - 1,7 =$



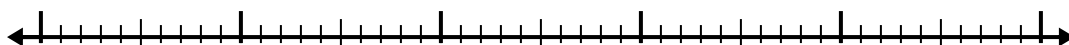
4) $9,9 - 3,8 =$



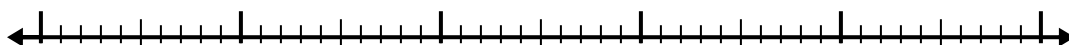
5) $4,4 - 2,5 =$



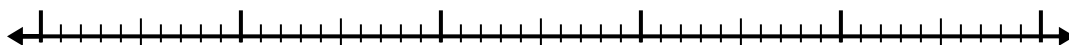
6) $9,7 - 2,4 =$




7) $12,6 - 3,7 =$




8) $6,2 - 2,7 =$



9) $7,7 - 1,6 =$



10) $6,5 - 2,1 =$



Отвeты

1. _____

2. _____

3. _____

4. _____

5. _____

6. _____

7. _____

8. _____

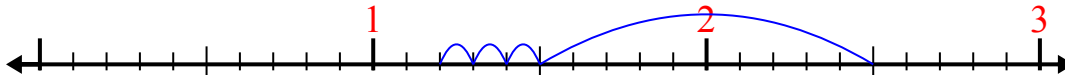
9. _____

10. _____

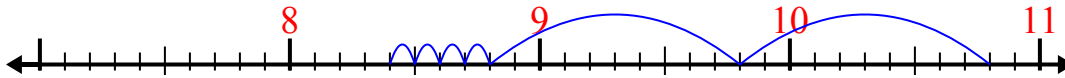


Используйте числовую линию для решения каждой проблемы.

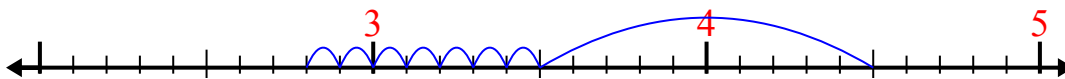
1) $2,5 - 1,3 =$



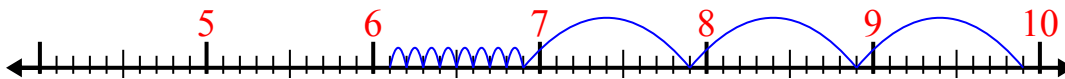
2) $10,8 - 2,4 =$



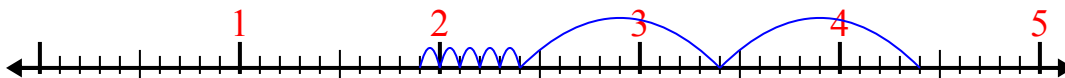
3) $4,5 - 1,7 =$



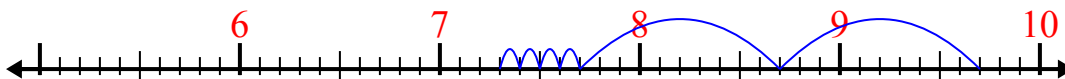
4) $9,9 - 3,8 =$



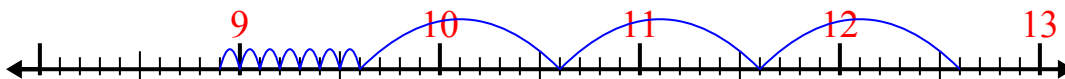
5) $4,4 - 2,5 =$



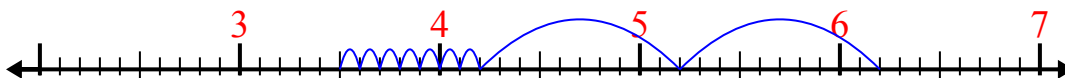
6) $9,7 - 2,4 =$



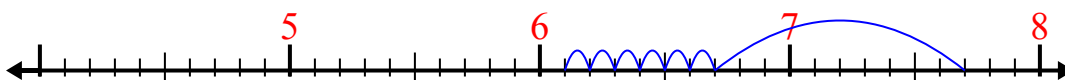
7) $12,6 - 3,7 =$



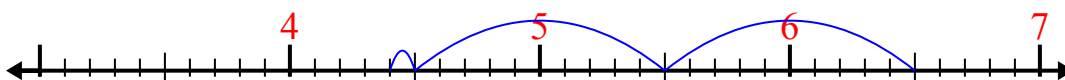
8) $6,2 - 2,7 =$



9) $7,7 - 1,6 =$



10) $6,5 - 2,1 =$



Отвѣты

1. 1,2

2. 8,4

3. 2,8

4. 6,1

5. 1,9

6. 7,3

7. 8,9

8. 3,5

9. 6,1

10. 4,4