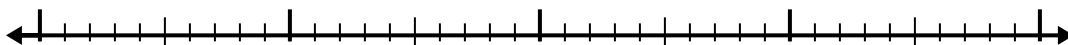


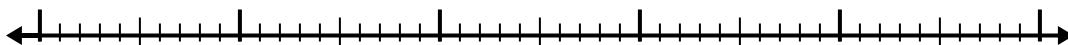


Используйте числовую линию для решения каждой проблемы.


1)  $7 - 2,6 =$



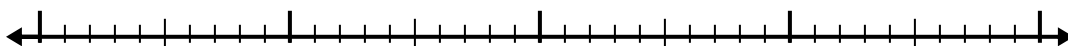
2)  $6,2 - 2,7 =$



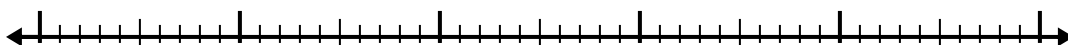
3)  $2,5 - 1,2 =$



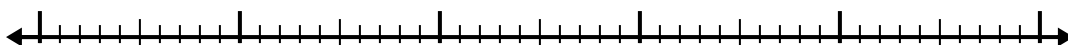
4)  $5,2 - 1,9 =$



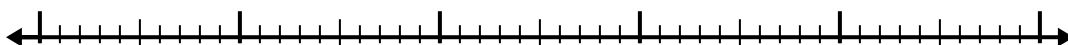
5)  $12,3 - 3,4 =$



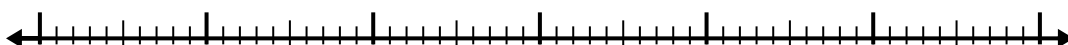
6)  $11 - 2,7 =$




7)  $8 - 2,7 =$




8)  $5 - 3,1 =$



9)  $10,9 - 2,3 =$



10)  $5,1 - 1,1 =$



Ответы

1. \_\_\_\_\_

2. \_\_\_\_\_

3. \_\_\_\_\_

4. \_\_\_\_\_

5. \_\_\_\_\_

6. \_\_\_\_\_

7. \_\_\_\_\_

8. \_\_\_\_\_

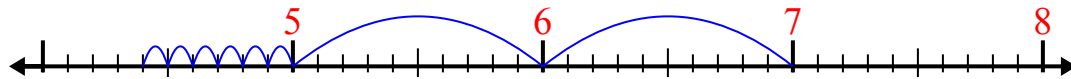
9. \_\_\_\_\_

10. \_\_\_\_\_

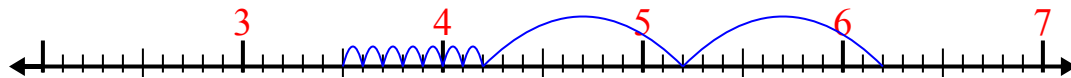


Используйте числовую линию для решения каждой проблемы.

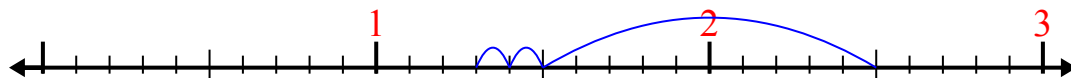
1)  $7 - 2,6 =$



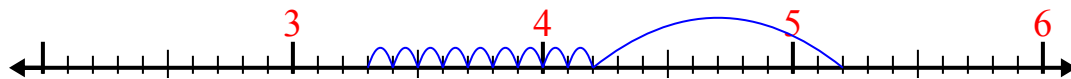
2)  $6,2 - 2,7 =$



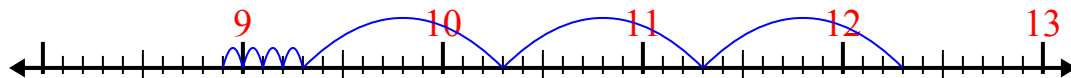
3)  $2,5 - 1,2 =$



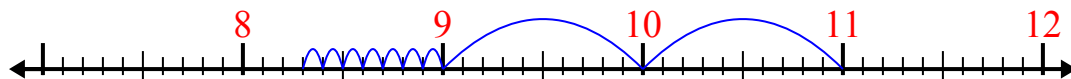
4)  $5,2 - 1,9 =$



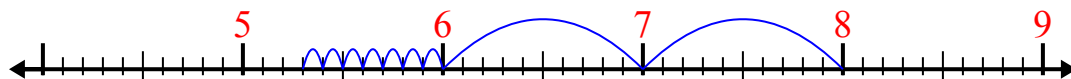
5)  $12,3 - 3,4 =$



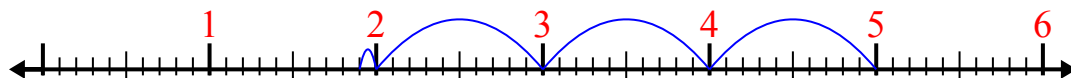
6)  $11 - 2,7 =$



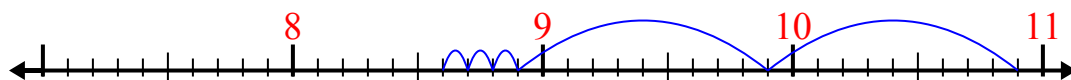
7)  $8 - 2,7 =$



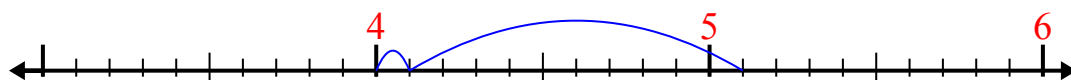
8)  $5 - 3,1 =$



9)  $10,9 - 2,3 =$



10)  $5,1 - 1,1 =$



**Ответы**

1. 4,4

2. 3,5

3. 1,3

4. 3,3

5. 8,9

6. 8,3

7. 5,3

8. 1,9

9. 8,6

10. 4