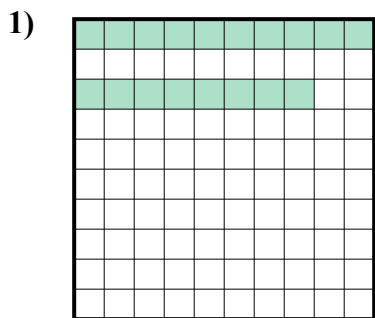


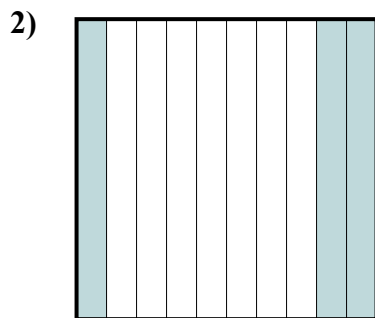


Определите под какой буквой показано значение закрашенного к целому.

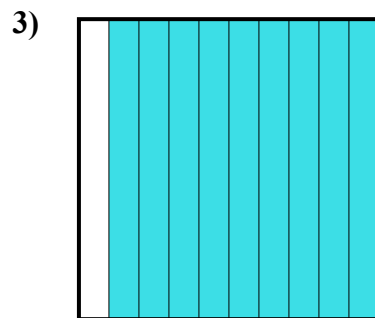
**ОТВЕТЫ**



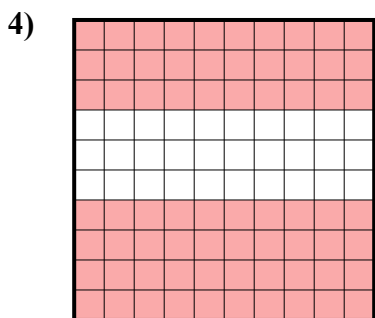
- A. 0,18
- B. 180,00
- C. 0,018
- D. 180,0



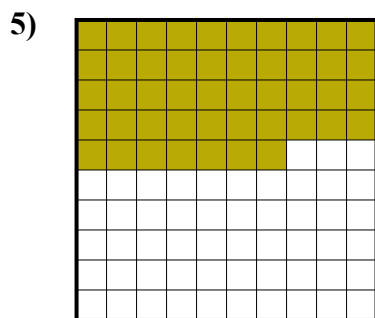
- A. 300,0
- B. 30
- C. 3
- D. 0,3




- A. 90
- B. 0,09
- C. 0,9
- D. 900,00



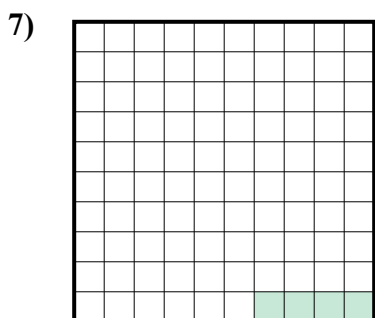
- A. 0,7
- B. 700,0
- C. 700,00
- D. 70



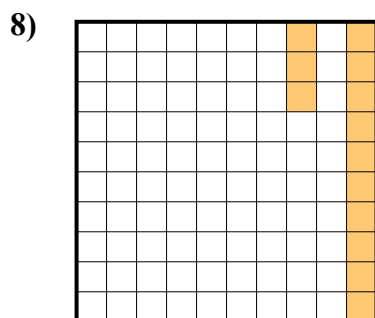
- A. 470,0
- B. 0,047
- C. 0,47
- D. 470,00



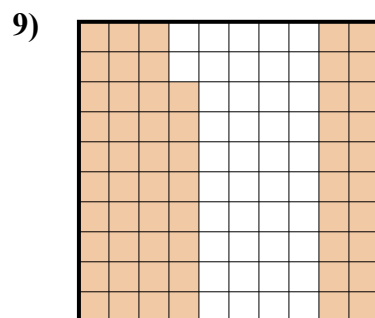
- A. 0,5
- B. 50
- C. 0,05
- D. 5



- A. 0,004
- B. 40,0
- C. 0,04
- D. 0,4



- A. 13
- B. 0,13
- C. 1,3
- D. 130,0



- A. 0,058
- B. 580,00
- C. 0,58
- D. 580,0

1. \_\_\_\_\_

2. \_\_\_\_\_

3. \_\_\_\_\_

4. \_\_\_\_\_

5. \_\_\_\_\_

6. \_\_\_\_\_

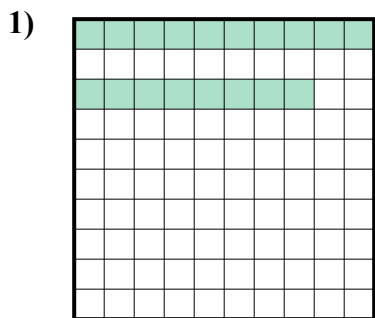
7. \_\_\_\_\_

8. \_\_\_\_\_

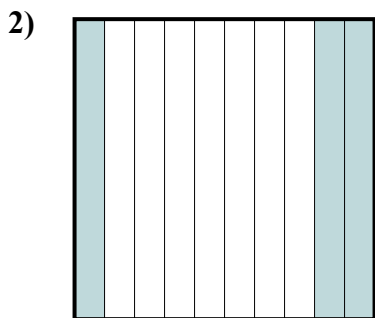
9. \_\_\_\_\_



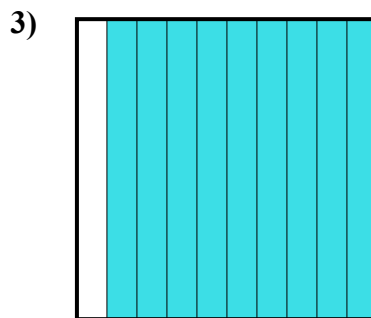
Определите под какой буквой показано значение закрашенного к целому.



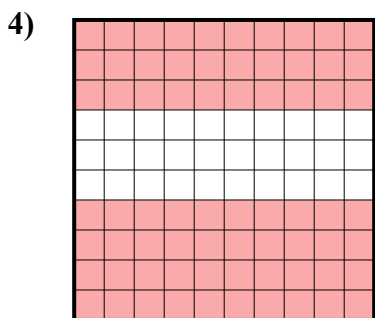
- A. 0,18
- B. 180,00
- C. 0,018
- D. 180,0



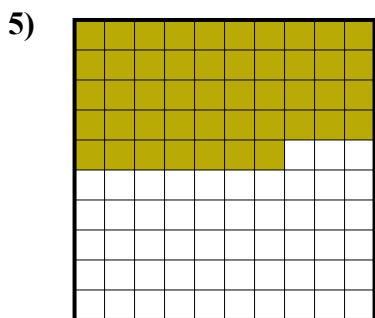
- A. 300,0
- B. 30
- C. 3
- D. 0,3



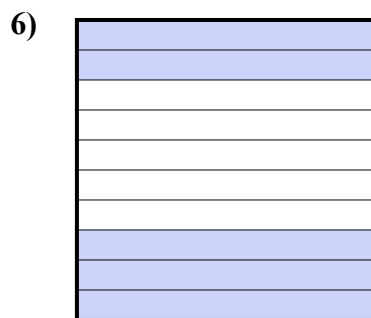
- A. 90
- B. 0,09
- C. 0,9
- D. 900,00



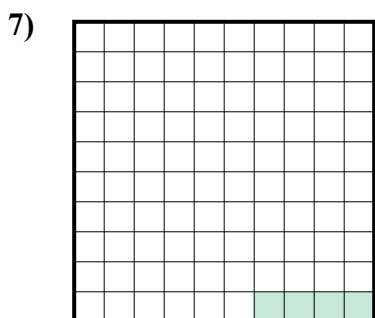
- A. 0,7
- B. 700,0
- C. 700,00
- D. 70



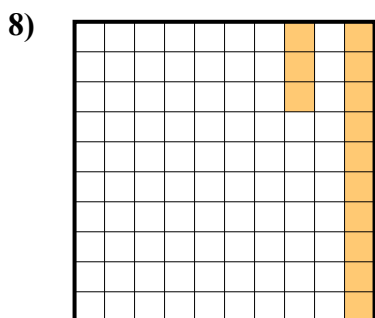
- A. 470,0
- B. 0,047
- C. 0,47
- D. 470,00



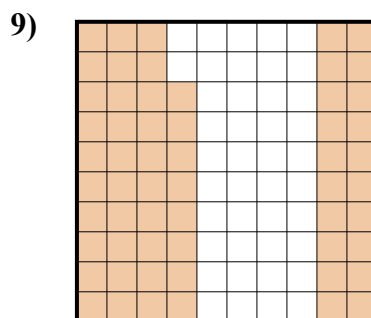
- A. 0,5
- B. 50
- C. 0,05
- D. 5



- A. 0,004
- B. 40,0
- C. 0,04
- D. 0,4



- A. 13
- B. 0,13
- C. 1,3
- D. 130,0



- A. 0,058
- B. 580,00
- C. 0,58
- D. 580,0

**ОТВЕТЫ**

1.           **A**          

2.           **D**          

3.           **C**          

4.           **A**          

5.           **C**          

6.           **A**          

7.           **C**          

8.           **B**          

9.           **C**