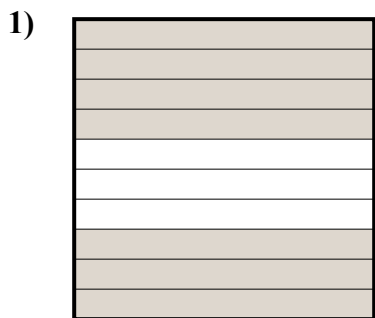


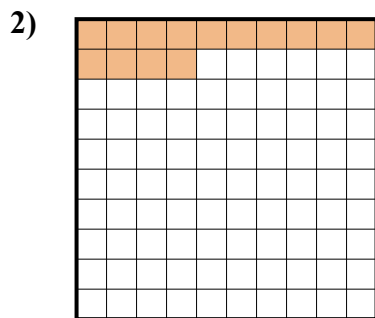


Определите под какой буквой показано значение закрашенного к целому.

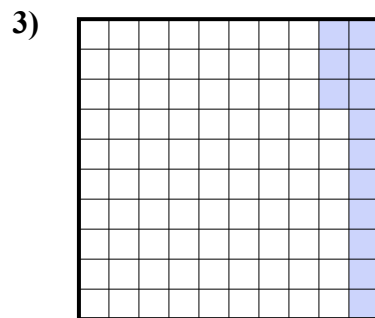
ОТВЕТЫ




- A. 0,7
- B. 0,07
- C. 700,0
- D. 7



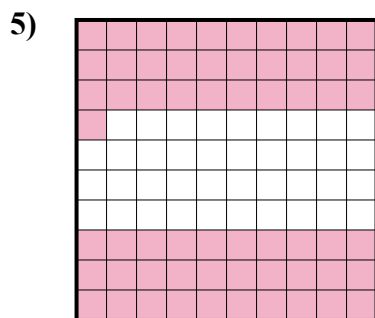
- A. 14
- B. 1,4
- C. 140,0
- D. 0,14



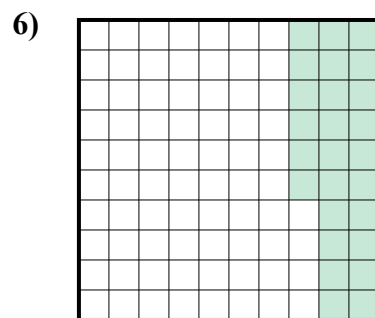
- A. 1,3
- B. 13
- C. 0,13
- D. 0,013



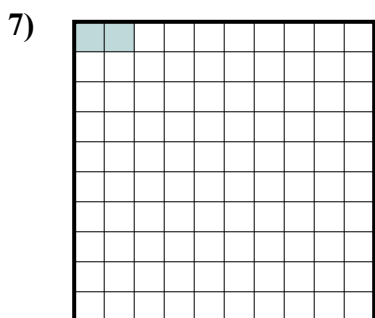
- A. 0,09
- B. 90
- C. 0,9
- D. 900,00



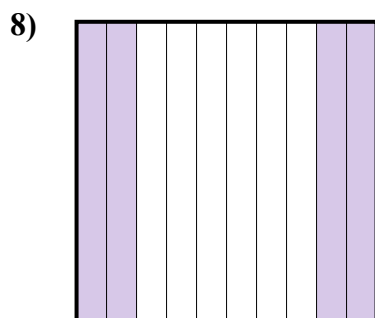
- A. 6,1
- B. 0,61
- C. 610,0
- D. 0,061



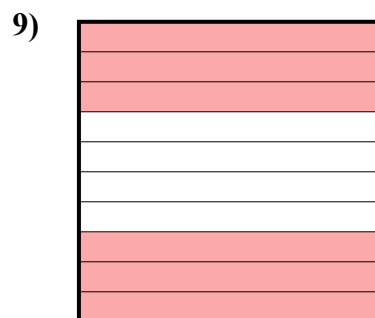
- A. 26
- B. 260,0
- C. 0,26
- D. 0,026



- A. 20,0
- B. 0,2
- C. 0,02
- D. 20,00



- A. 40
- B. 400,0
- C. 0,4
- D. 0,04



- A. 600,00
- B. 60
- C. 0,6
- D. 0,06

1. _____

2. _____

3. _____

4. _____

5. _____

6. _____

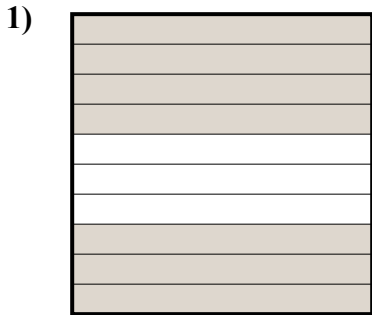
7. _____

8. _____

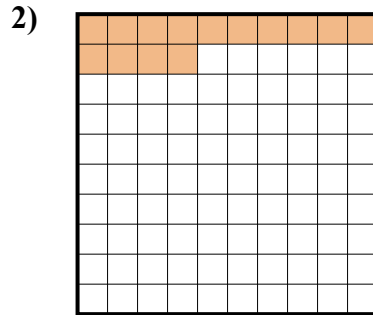
9. _____



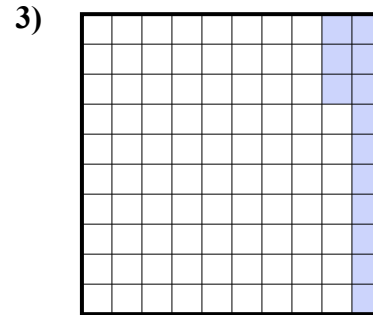
Определите под какой буквой показано значение закрашенного к целому.




- A. 0,7
- B. 0,07
- C. 700,0
- D. 7



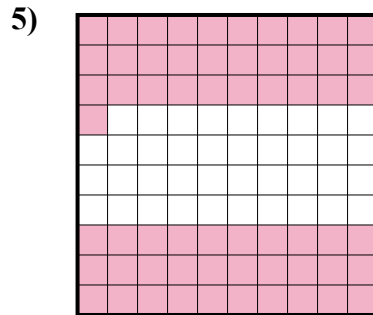
- A. 14
- B. 1,4
- C. 140,0
- D. 0,14



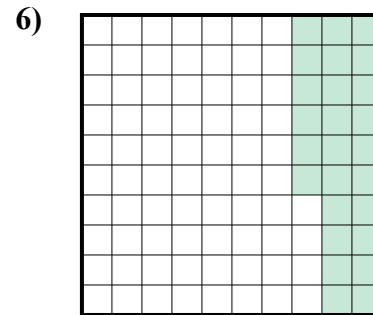
- A. 1,3
- B. 13
- C. 0,13
- D. 0,013



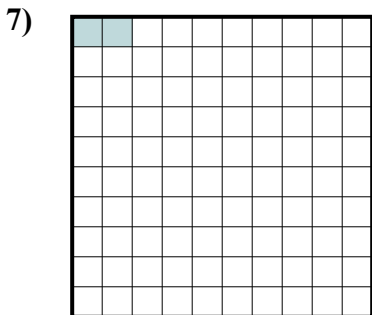
- A. 0,09
- B. 90
- C. 0,9
- D. 900,00



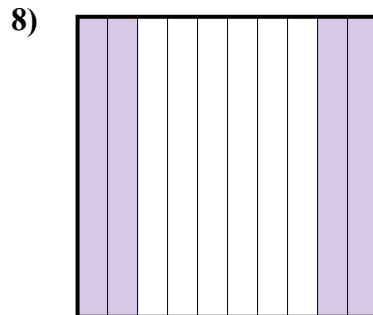
- A. 6,1
- B. 0,61
- C. 610,0
- D. 0,061




- A. 26
- B. 260,0
- C. 0,26
- D. 0,026



- A. 20,0
- B. 0,2
- C. 0,02
- D. 20,00



- A. 40
- B. 400,0
- C. 0,4
- D. 0,04



- A. 600,00
- B. 60
- C. 0,6
- D. 0,06

ОТВЕТЫ

- 1. **A**
- 2. **D**
- 3. **C**
- 4. **C**
- 5. **B**
- 6. **C**
- 7. **C**
- 8. **C**
- 9. **C**