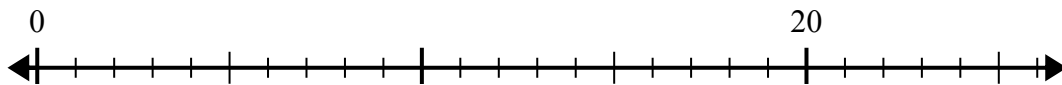


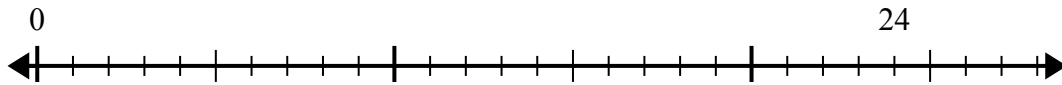


Используйте числовую прямую для решения задачи деления.

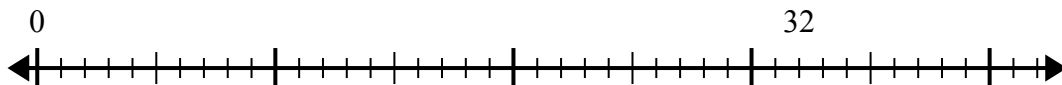
1)  $20:5=$



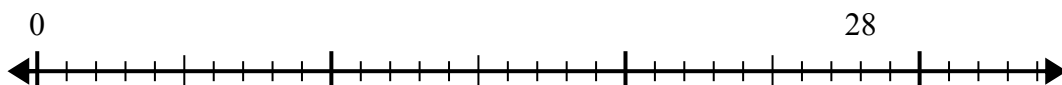
2)  $24:6=$



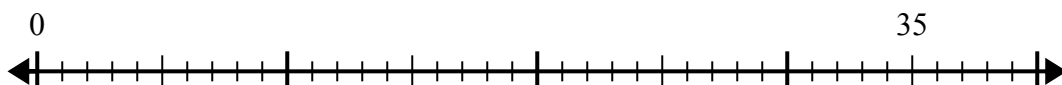
3)  $32:8=$



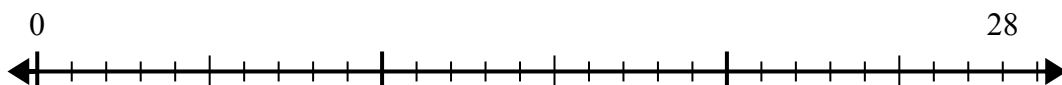
4)  $28:7=$



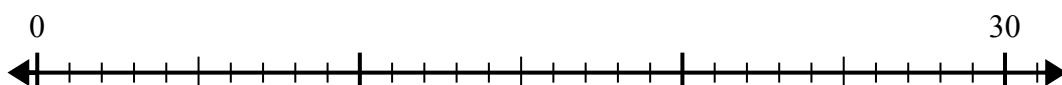
5)  $35:5=$



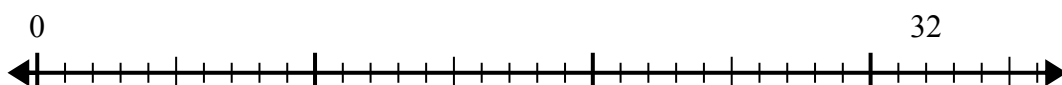
6)  $28:4=$



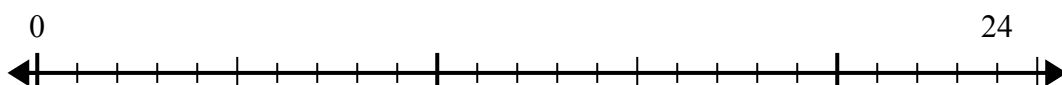
7)  $30:6=$



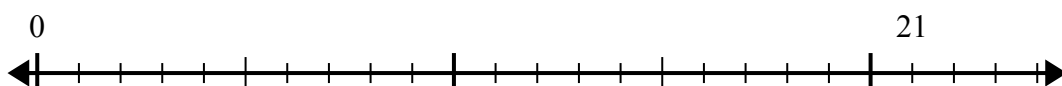
8)  $32:4=$



9)  $24:4=$



10)  $21:7=$



Ответы

1. \_\_\_\_\_

2. \_\_\_\_\_

3. \_\_\_\_\_

4. \_\_\_\_\_

5. \_\_\_\_\_

6. \_\_\_\_\_

7. \_\_\_\_\_

8. \_\_\_\_\_

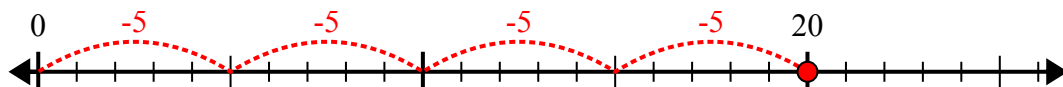
9. \_\_\_\_\_

10. \_\_\_\_\_

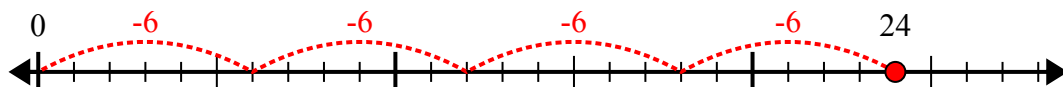


Используйте числовую прямую для решения задачи деления.

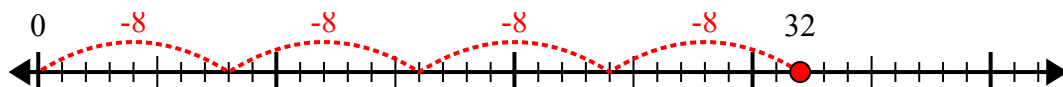
1)  $20:5=$



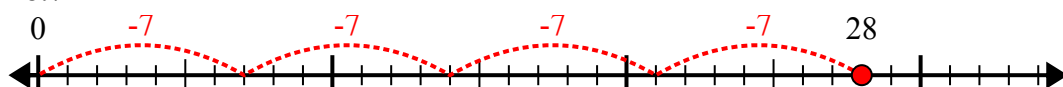
2)  $24:6=$



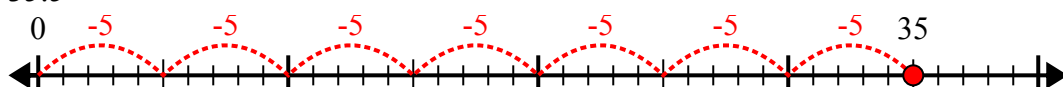
3)  $32:8=$



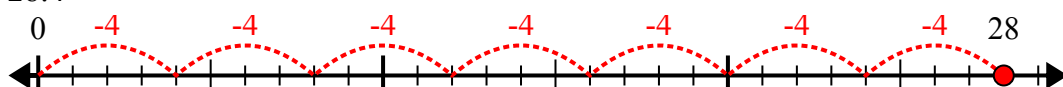
4)  $28:7=$



5)  $35:5=$



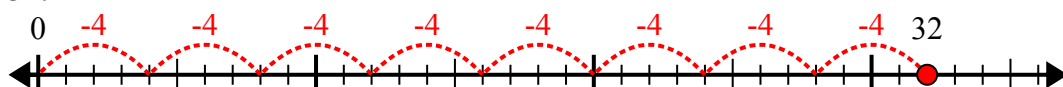
6)  $28:4=$



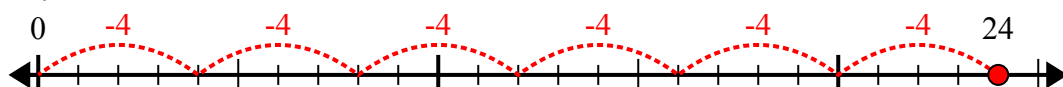
7)  $30:6=$



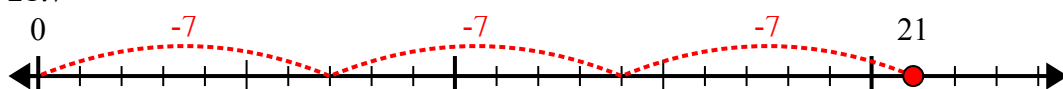
8)  $32:4=$



9)  $24:4=$



10)  $21:7=$



**ОТВЕТЫ**

1. 4

2. 4

3. 4

4. 4

5. 7

6. 7

7. 5

8. 8

9. 6

10. 3