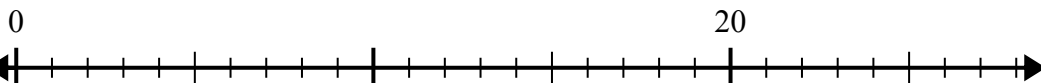


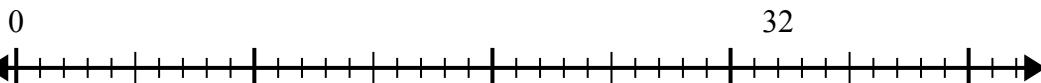


Используйте числовую прямую для решения задачи деления.

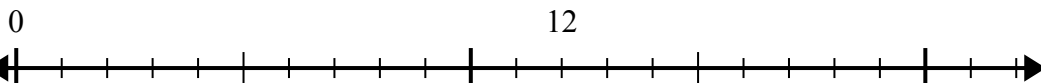
1)  $20:4=$



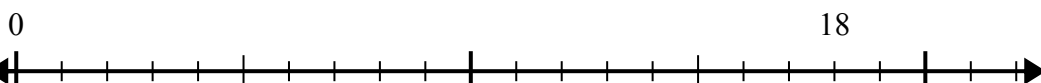
2)  $32:8=$



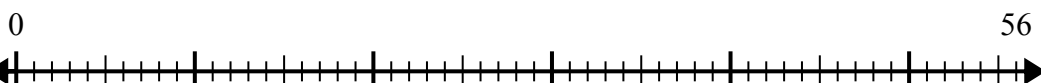
3)  $12:4=$



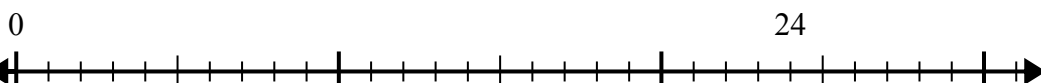
4)  $18:6=$



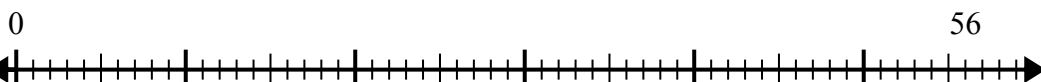
5)  $56:8=$



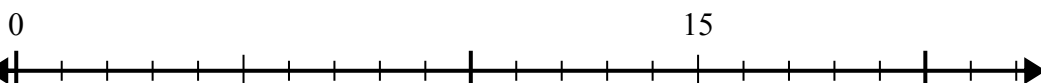
6)  $24:8=$



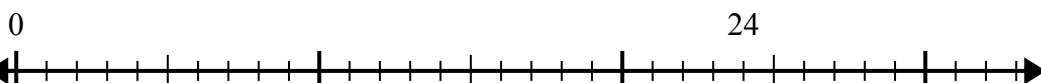
7)  $56:7=$



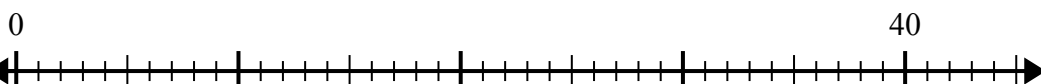
8)  $15:5=$



9)  $24:4=$



10)  $40:5=$



**Отв**еты

1. \_\_\_\_\_

2. \_\_\_\_\_

3. \_\_\_\_\_

4. \_\_\_\_\_

5. \_\_\_\_\_

6. \_\_\_\_\_

7. \_\_\_\_\_

8. \_\_\_\_\_

9. \_\_\_\_\_

10. \_\_\_\_\_

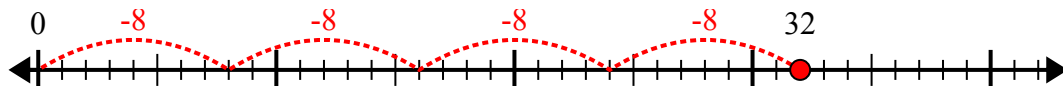


Используйте числовую прямую для решения задачи деления.

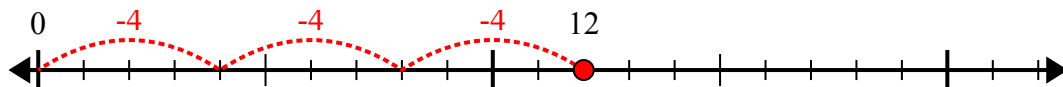
1)  $20:4=$



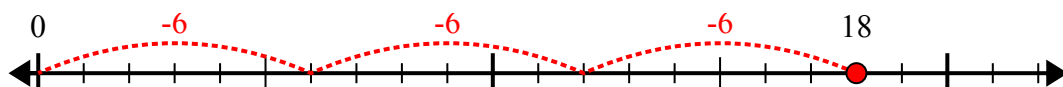
2)  $32:8=$



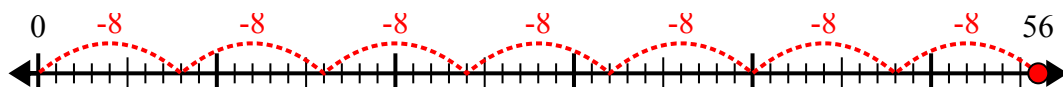
3)  $12:4=$



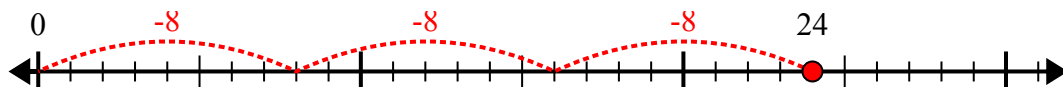
4)  $18:6=$



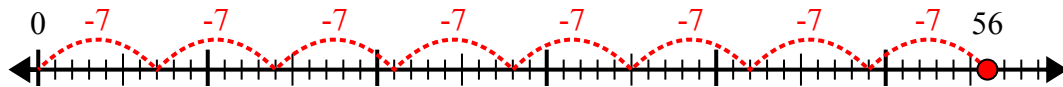
5)  $56:8=$



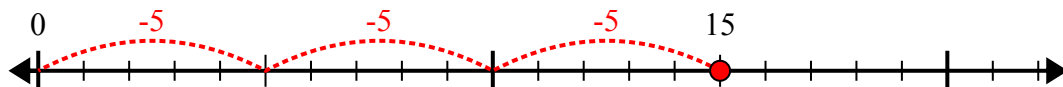
6)  $24:8=$



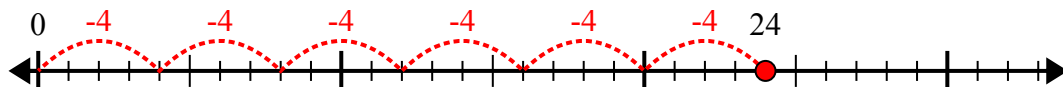
7)  $56:7=$



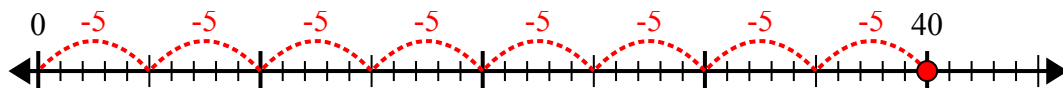
8)  $15:5=$



9)  $24:4=$



10)  $40:5=$



**ОТВЕТЫ**

1. 5

2. 4

3. 3

4. 3

5. 7

6. 3

7. 8

8. 3

9. 6

10. 8