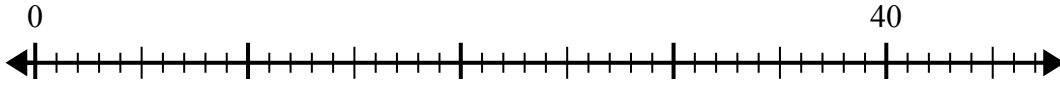


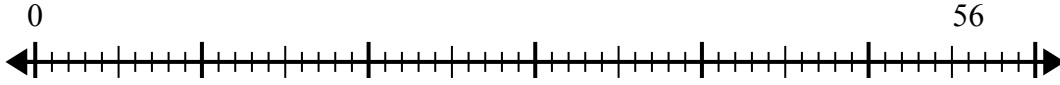


Используйте числовую прямую для решения задачи деления.

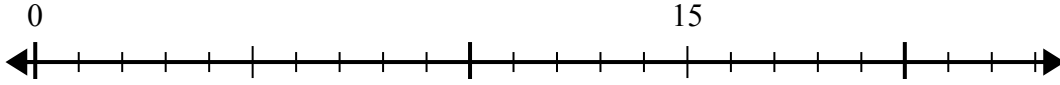
1) $40:5=$
0



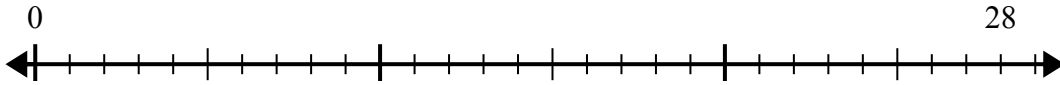
2) $56:7=$
0



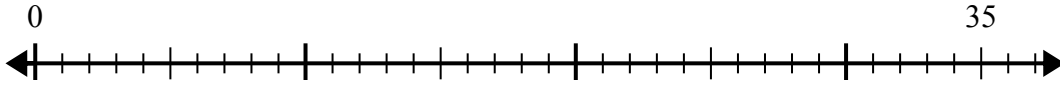
3) $15:5=$
0



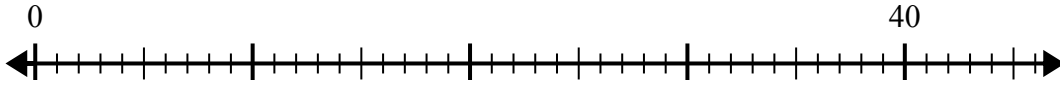
4) $28:4=$
0



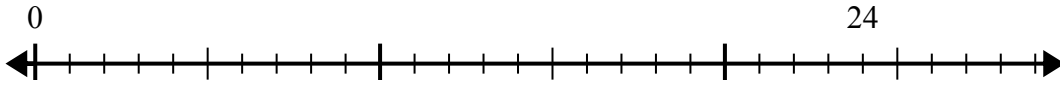
5) $35:7=$
0



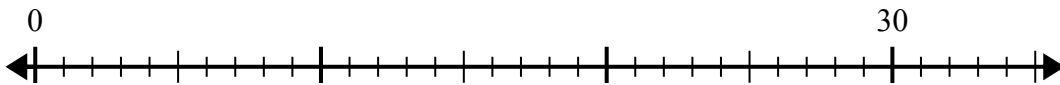
6) $40:8=$
0



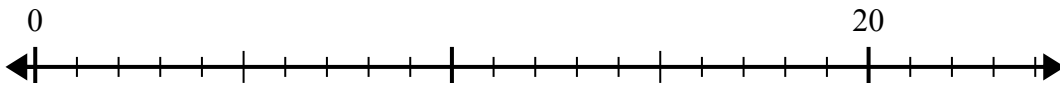
7) $24:4=$
0



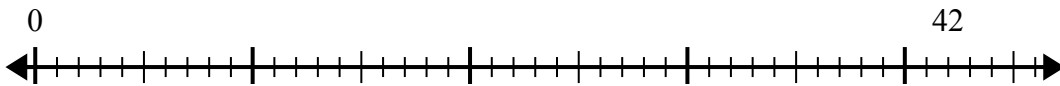
8) $30:5=$
0



9) $20:4=$
0



10) $42:6=$
0



Ответы

1. _____

2. _____

3. _____

4. _____

5. _____

6. _____

7. _____

8. _____

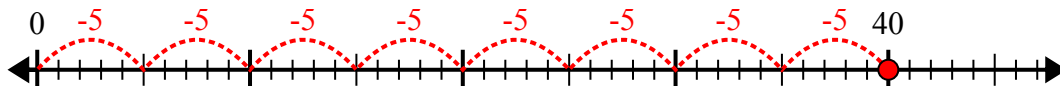
9. _____

10. _____

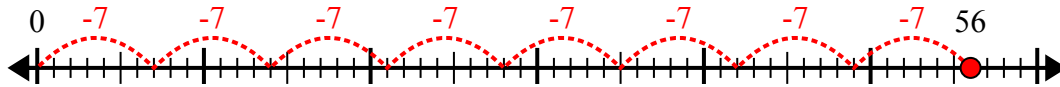


Используйте числовую прямую для решения задачи деления.

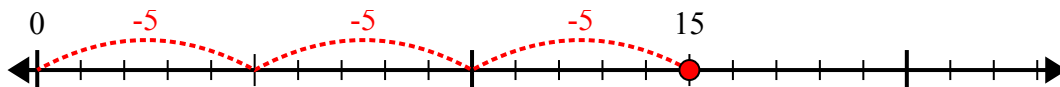
1) $40:5=$



2) $56:7=$



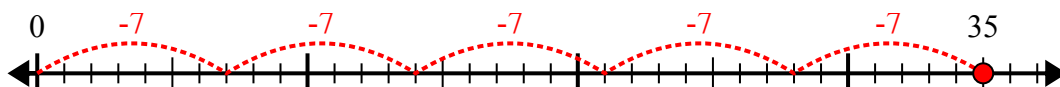
3) $15:5=$



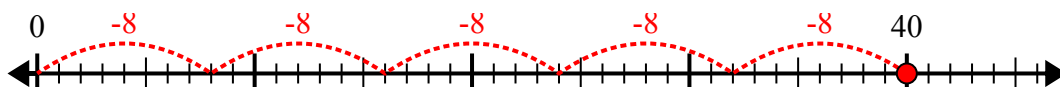
4) $28:4=$



5) $35:7=$



6) $40:8=$



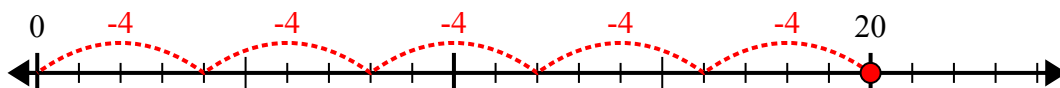
7) $24:4=$



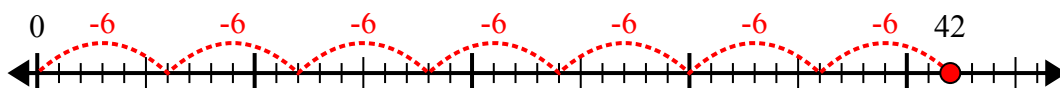
8) $30:5=$



9) $20:4=$



10) $42:6=$



ОТВЕТЫ

1. 8
2. 8
3. 3
4. 7
5. 5
6. 5
7. 6
8. 6
9. 5
10. 7