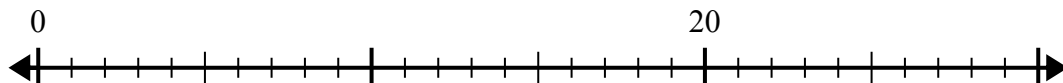


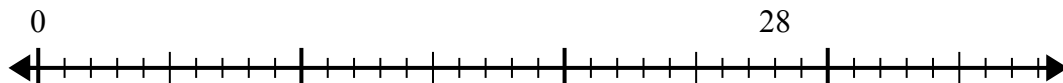


Используйте числовую прямую для решения задачи деления.

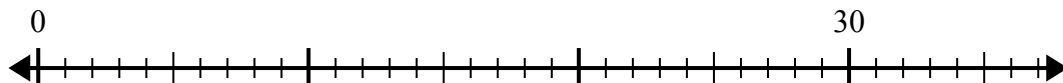
1) $20:5=$



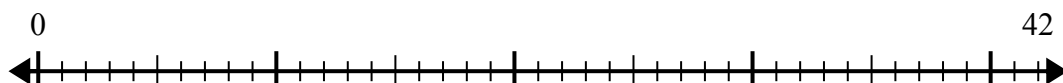
2) $28:4=$



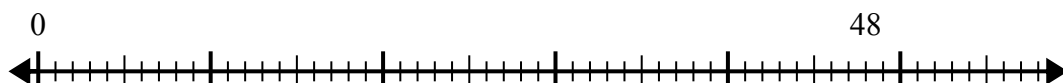
3) $30:6=$



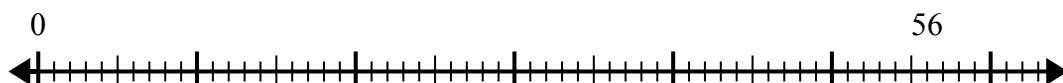
4) $42:6=$



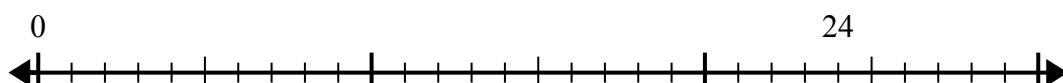
5) $48:6=$



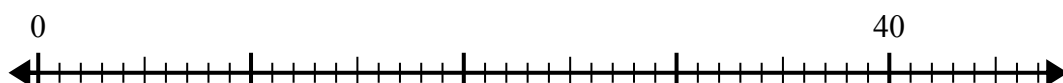
6) $56:8=$



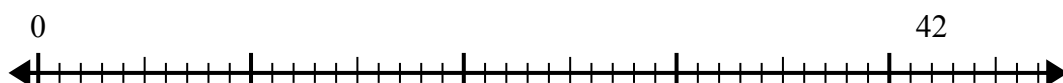
7) $24:6=$



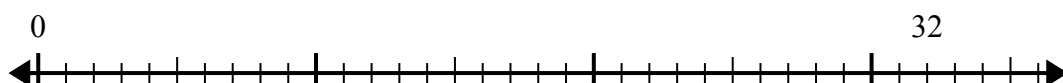
8) $40:8=$



9) $42:7=$



10) $32:4=$



Ответы

1. _____

2. _____

3. _____

4. _____

5. _____

6. _____

7. _____

8. _____

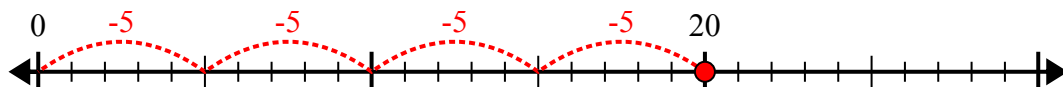
9. _____

10. _____

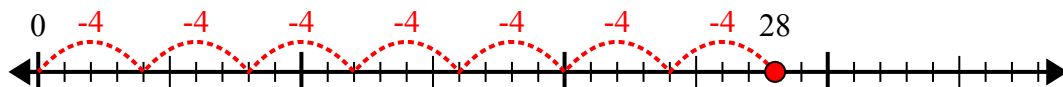


Используйте числовую прямую для решения задачи деления.

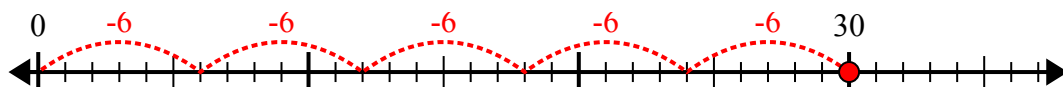
1) $20:5=$



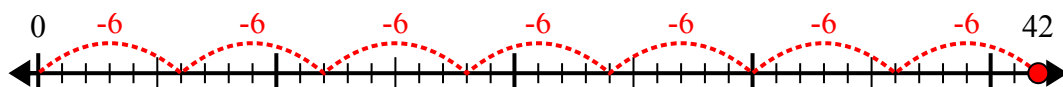
2) $28:4=$



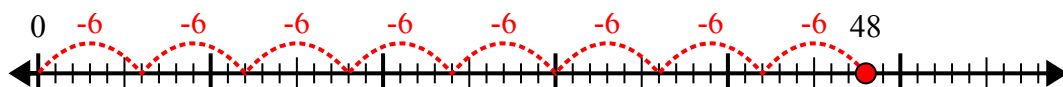
3) $30:6=$



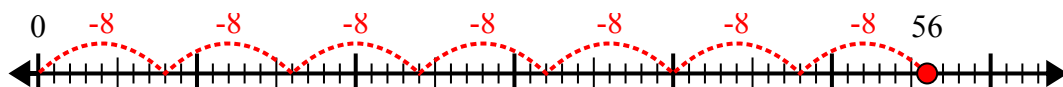
4) $42:6=$



5) $48:6=$



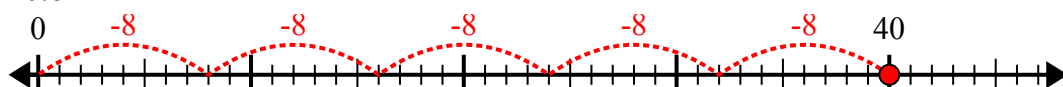
6) $56:8=$



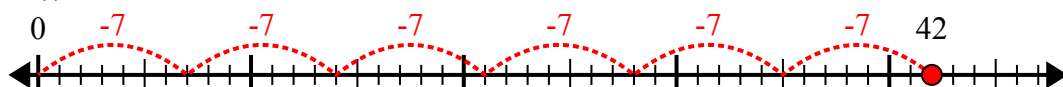
7) $24:6=$



8) $40:8=$



9) $42:7=$



10) $32:4=$



ОТВЕТЫ

1. 4

2. 7

3. 5

4. 7

5. 8

6. 7

7. 4

8. 5

9. 6

10. 8