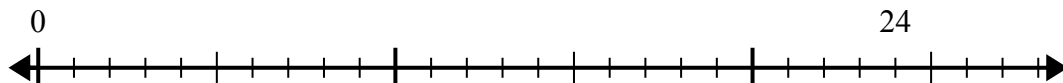


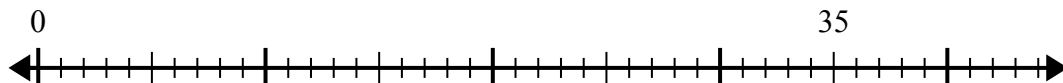


Используйте числовую прямую для решения задачи деления.

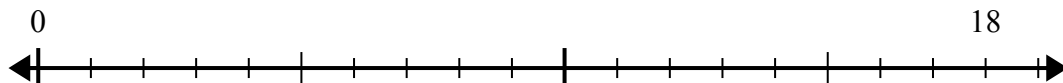
1) $24:6=$



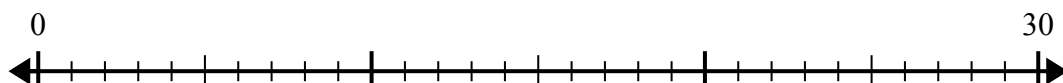
2) $35:7=$



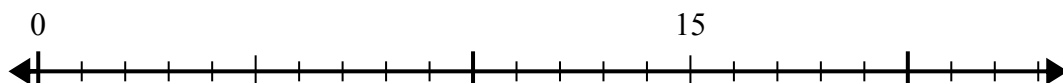
3) $18:6=$



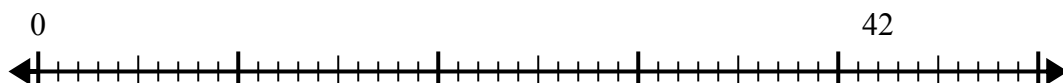
4) $30:6=$



5) $15:5=$



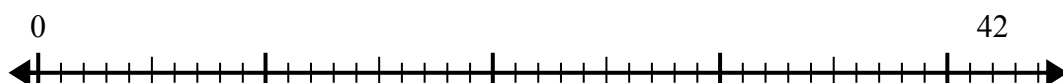
6) $42:6=$



7) $56:8=$



8) $42:7=$



9) $48:8=$



10) $28:4=$



Ответы

1. _____

2. _____

3. _____

4. _____

5. _____

6. _____

7. _____

8. _____

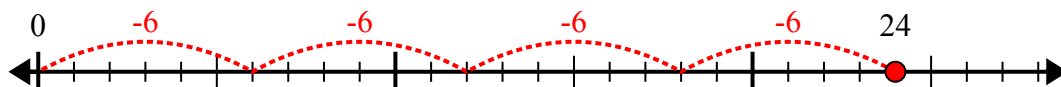
9. _____

10. _____

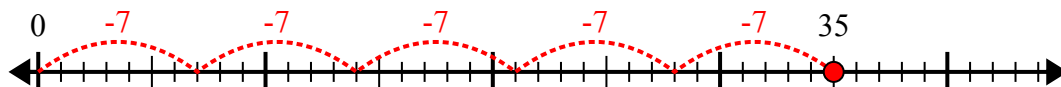


Используйте числовую прямую для решения задачи деления.

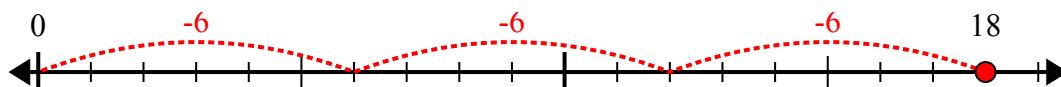
1) $24:6=$



2) $35:7=$



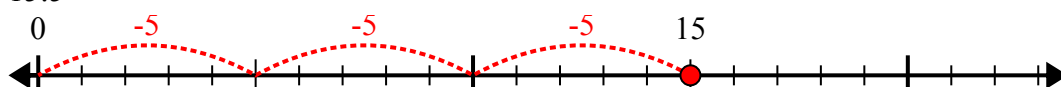
3) $18:6=$



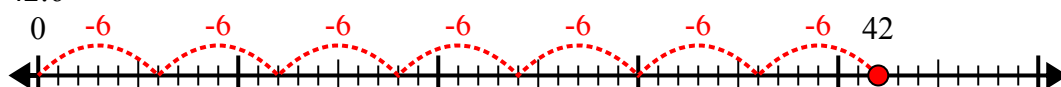
4) $30:6=$




5) $15:5=$



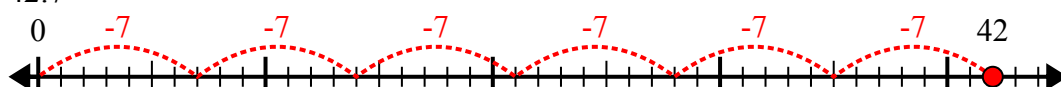
6) $42:6=$



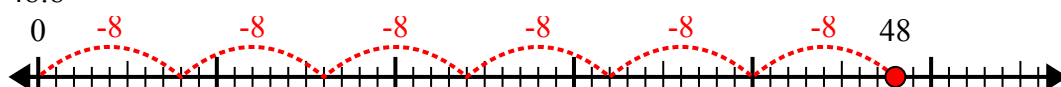
7) $56:8=$



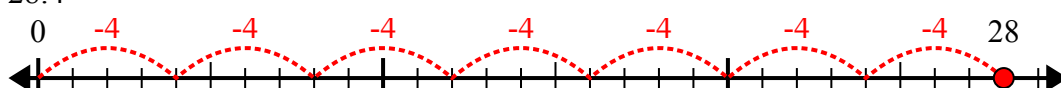
8) $42:7=$



9) $48:8=$



10) $28:4=$



ОТВЕТЫ

1. 4

2. 5

3. 3

4. 5

5. 3

6. 7

7. 7

8. 6

9. 6

10. 7